

Name _____

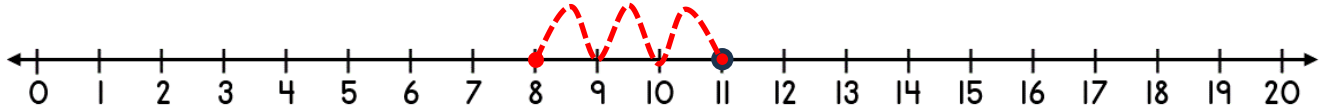
Date _____



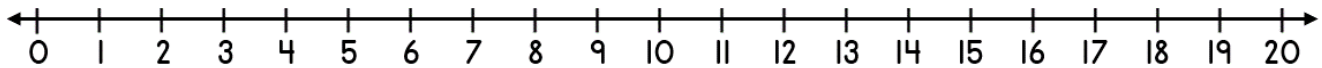
SUBTRACTING ON A NUMBER LINE WITHIN 20 SHEET 4B

Jump back in ones from the starting number to find the missing subtrahend.

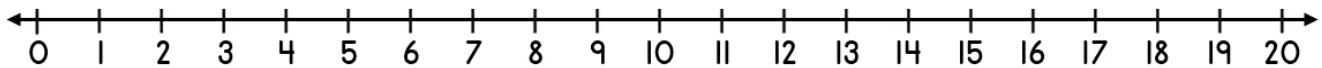
1) $11 - \underline{\quad} = 8$



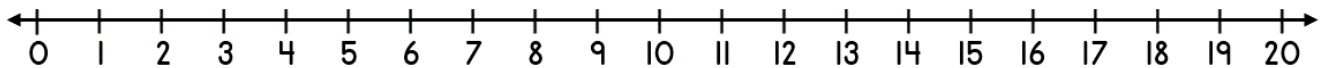
2) $17 - \underline{\quad} = 12$



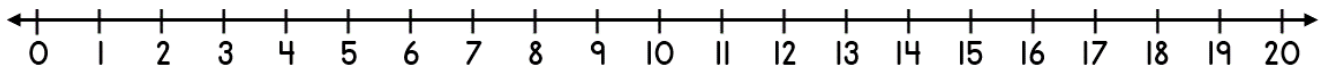
3) $13 - \underline{\quad} = 11$




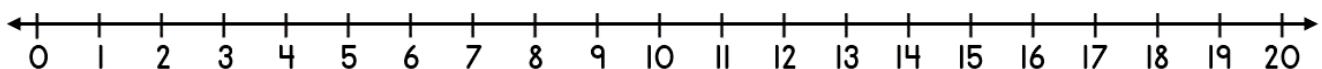
4) $19 - \underline{\quad} = 16$



5) $12 - \underline{\quad} = 6$



6) $20 - \underline{\quad} = 16$



Name

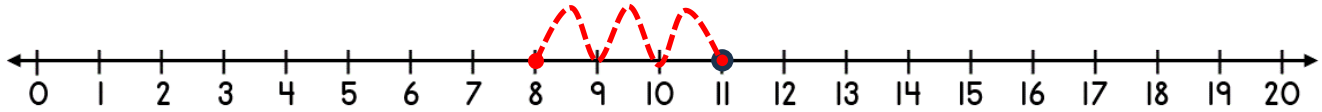
Date



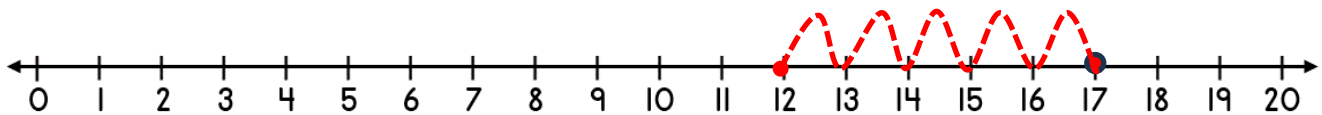
SUBTRACTING ON A NUMBER LINE WITHIN 20

SHEET 4B ANSWERS

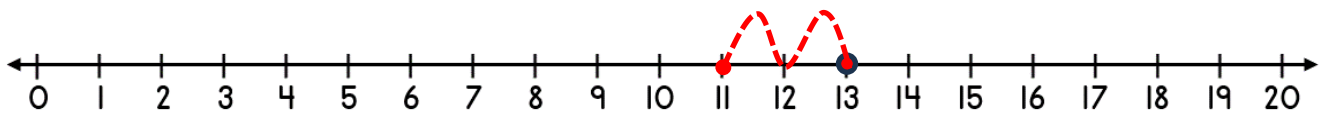
1) $11 - \underline{3} = 8$



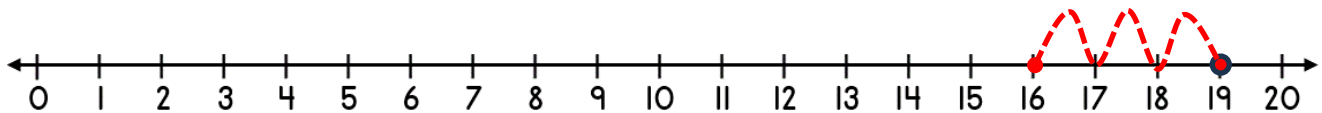
2) $17 - \underline{5} = 12$



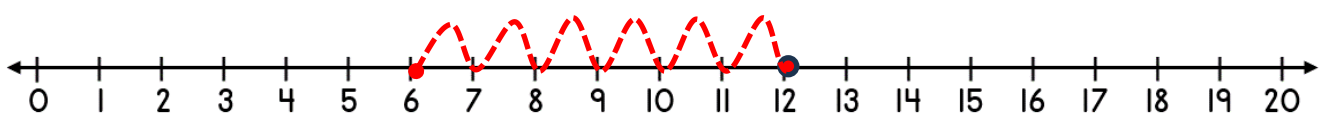
3) $13 - \underline{2} = 11$



4) $19 - \underline{3} = 16$



5) $12 - \underline{6} = 6$



6) $20 - \underline{4} = 16$

