


Name \_\_\_\_\_

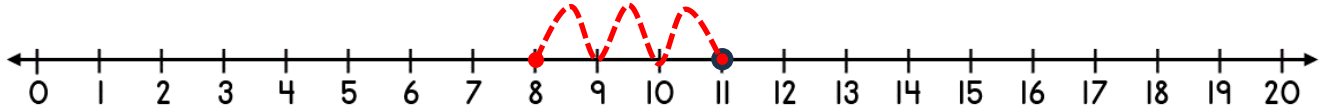
Date \_\_\_\_\_



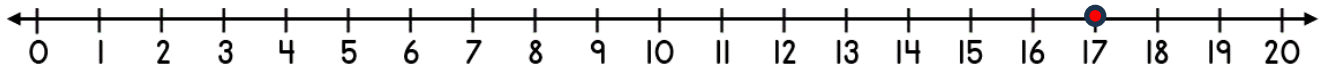
## SUBTRACTING ON A NUMBER LINE WITHIN 20 SHEET 4A

*Jump back in ones from the starting number to find the missing subtrahend.*

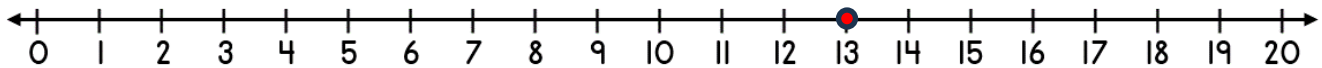
1)  $11 - \underline{\quad} = 8$



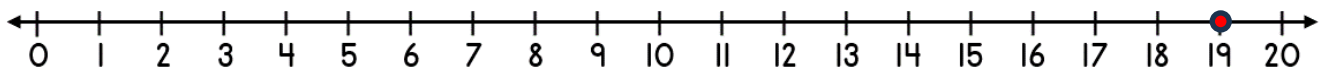
2)  $17 - \underline{\quad} = 12$



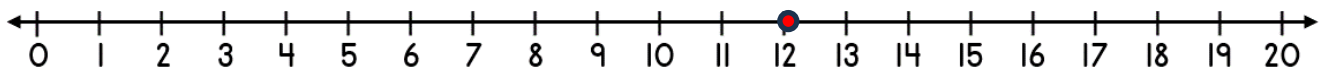
3)  $13 - \underline{\quad} = 11$




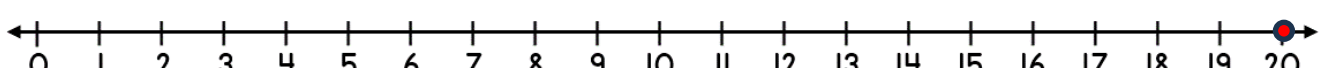
4)  $19 - \underline{\quad} = 16$



5)  $12 - \underline{\quad} = 6$




6)  $20 - \underline{\quad} = 16$



Name

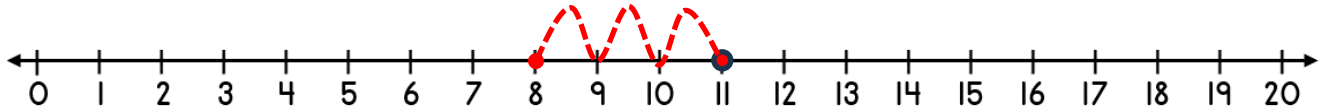
Date



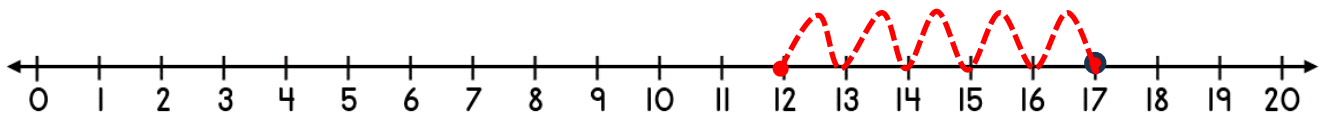
# SUBTRACTING ON A NUMBER LINE WITHIN 20

## SHEET 4A ANSWERS

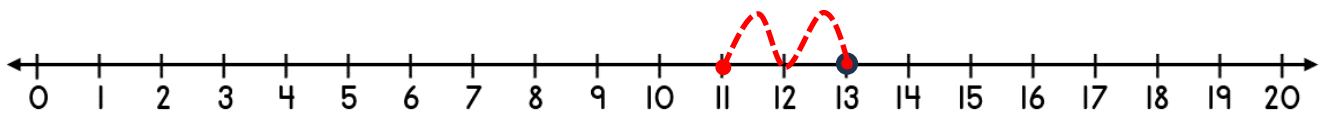
1)  $11 - \underline{3} = 8$



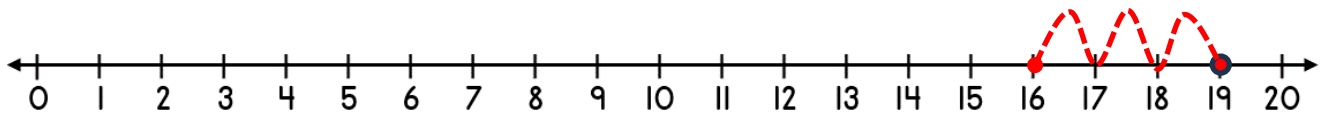
2)  $17 - \underline{5} = 12$



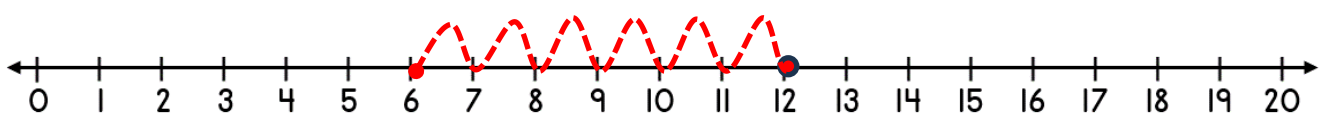
3)  $13 - \underline{2} = 11$



4)  $19 - \underline{3} = 16$



5)  $12 - \underline{6} = 6$



6)  $20 - \underline{4} = 16$

