


Name _____

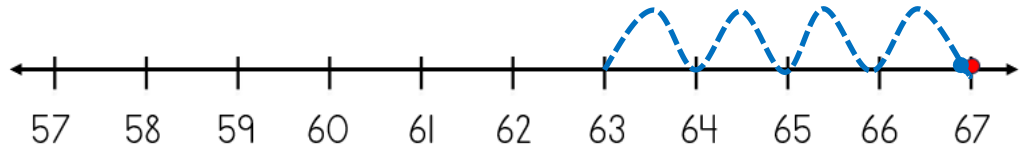
Date _____



SUBTRACTING ON A NUMBER LINE WITHIN 100 SHEET 4B

Jump back in ones from the starting number to find the missing subtrahend.

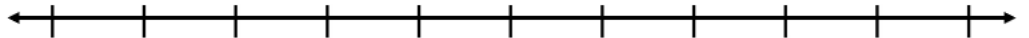
1) $67 - \underline{\quad} = 63$



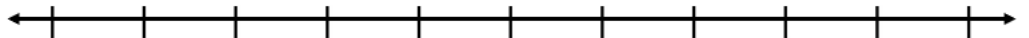
2) $40 - \underline{\quad} = 35$



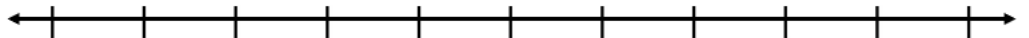
3) $81 - \underline{\quad} = 78$



4) $58 - \underline{\quad} = 52$



5) $93 - \underline{\quad} = 88$




6) $71 - \underline{\quad} = 69$



7) $48 - \underline{\quad} = 40$



8) $24 - \underline{\quad} = 17$



Name

Date



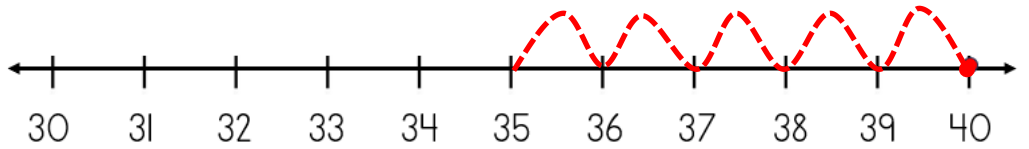
SUBTRACTING ON A NUMBER LINE WITHIN 100

SHEET 4B ANSWERS

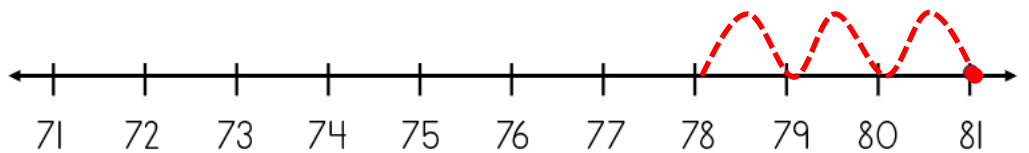
1) $67 - \underline{4} = 63$



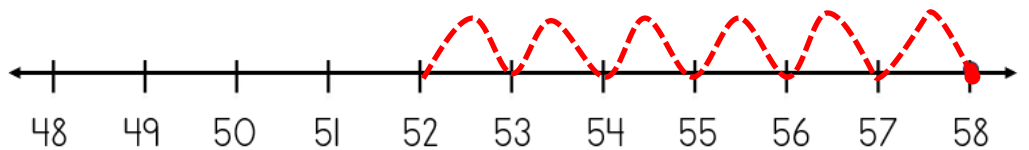
2) $40 - \underline{5} = 35$



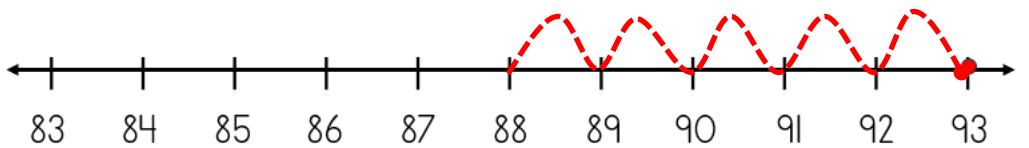
3) $81 - \underline{3} = 78$



4) $58 - \underline{6} = 52$



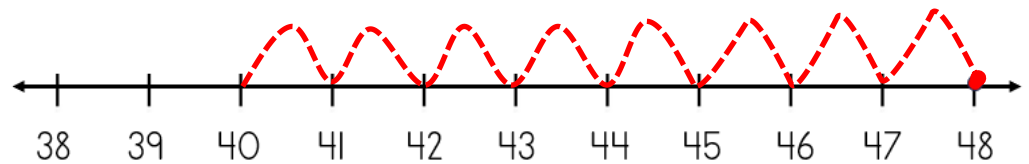
5) $93 - \underline{5} = 88$



6) $71 - \underline{2} = 69$



7) $48 - \underline{8} = 40$



8) $24 - \underline{7} = 17$

