


Name _____

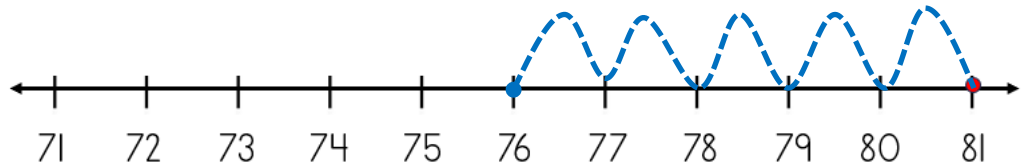
Date _____



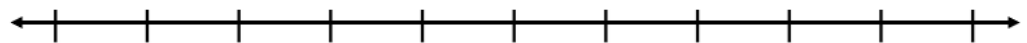
SUBTRACTING ON A NUMBER LINE WITHIN 100 SHEET 3B

Jump back along the number line to find the answer.


1) $81 - 5 = \underline{\quad}$



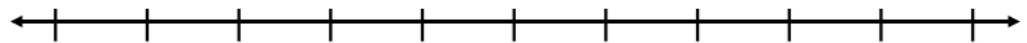
2) $34 - 7 = \underline{\quad}$



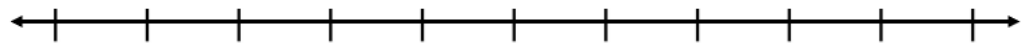
3) $60 - 4 = \underline{\quad}$



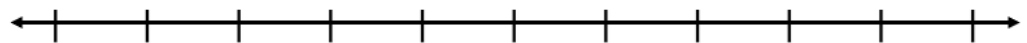
4) $94 - 5 = \underline{\quad}$



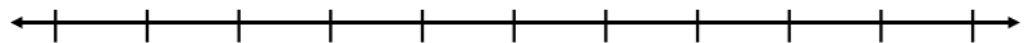
5) $49 - 6 = \underline{\quad}$





6) $55 - 8 = \underline{\quad}$



7) $77 - 3 = \underline{\quad}$



8) $93 - 7 = \underline{\quad}$



Name

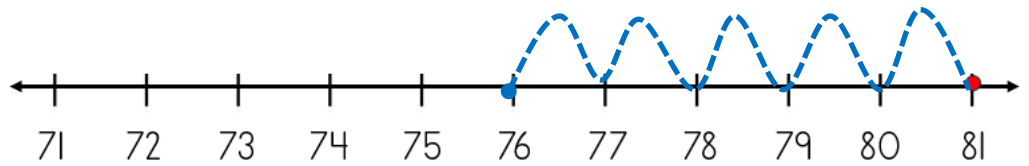
Date



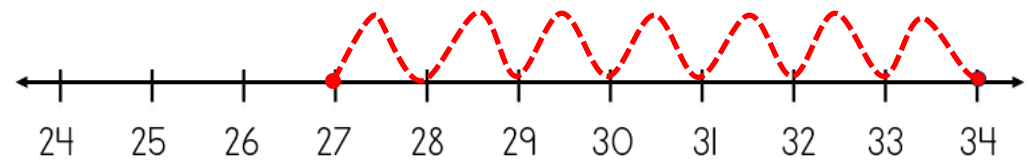
SUBTRACTING ON A NUMBER LINE WITHIN 100

SHEET 3B ANSWERS

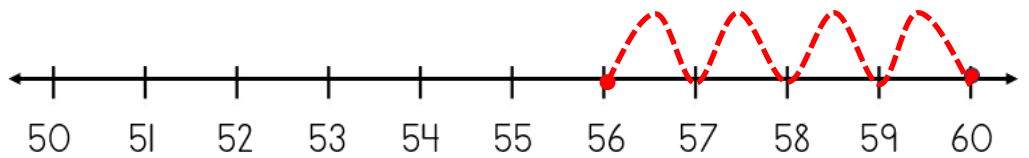
1) $81 - 5 = \underline{76}$



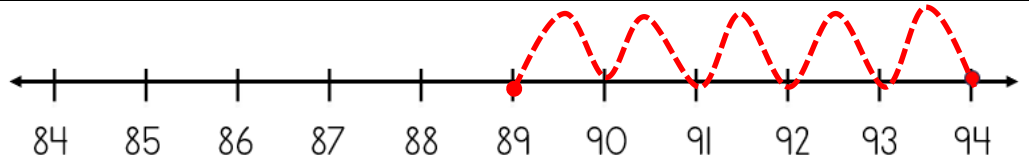
2) $34 - 7 = \underline{27}$



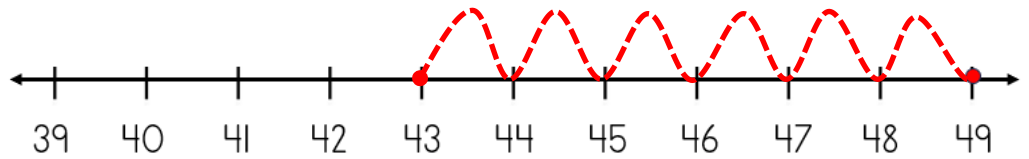
3) $60 - 4 = \underline{56}$



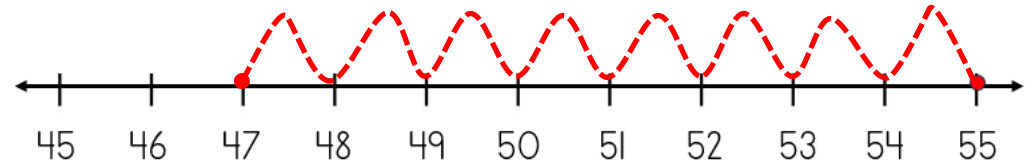
4) $94 - 5 = \underline{89}$



5) $49 - 6 = \underline{43}$



6) $55 - 8 = \underline{47}$



7) $77 - 3 = \underline{74}$



8) $93 - 7 = \underline{86}$

