


Name \_\_\_\_\_

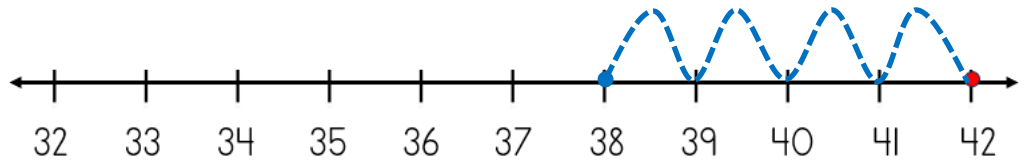
Date \_\_\_\_\_



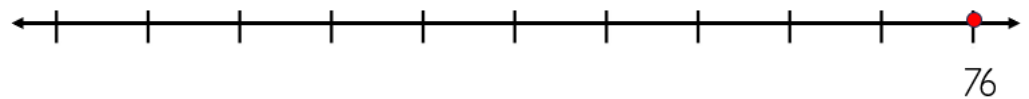
# SUBTRACTING ON A NUMBER LINE WITHIN 100 SHEET 2B

Jump back along the number line to find the answer.

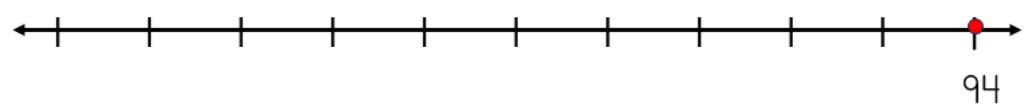
1)  $42 - 4 = \underline{\quad}$



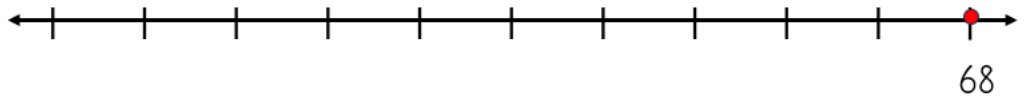
2)  $76 - 3 = \underline{\quad}$



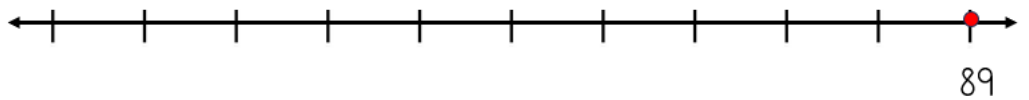
3)  $94 - 6 = \underline{\quad}$



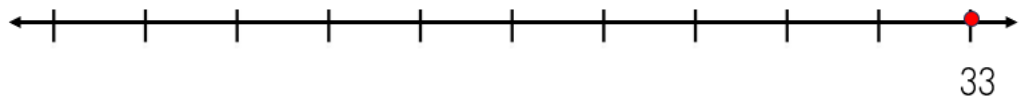
4)  $68 - 5 = \underline{\quad}$



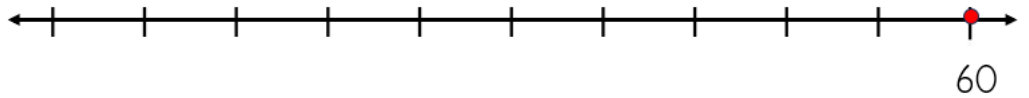
5)  $89 - 2 = \underline{\quad}$



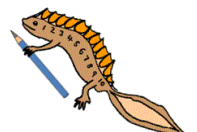
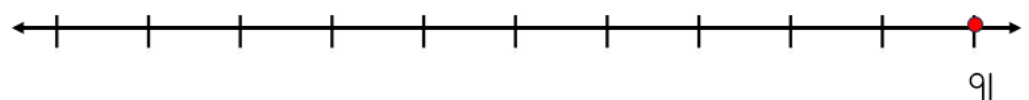
6)  $33 - 5 = \underline{\quad}$



7)  $60 - 4 = \underline{\quad}$



8)  $91 - 3 = \underline{\quad}$



Name

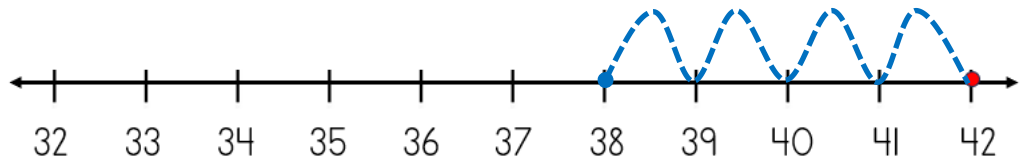
Date



# SUBTRACTING ON A NUMBER LINE WITHIN 100

## SHEET 2B ANSWERS

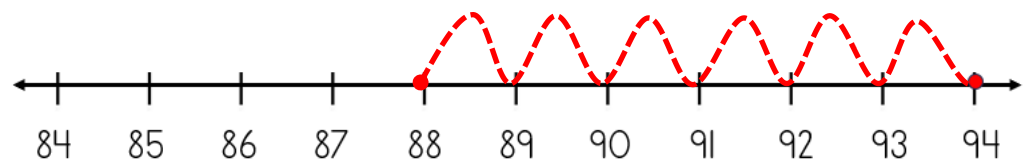
1)  $42 - 4 = \underline{38}$



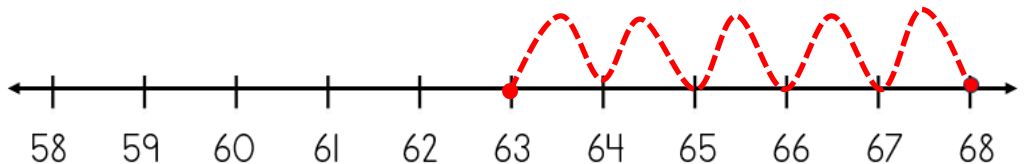
2)  $76 - 3 = \underline{73}$



3)  $94 - 6 = \underline{88}$



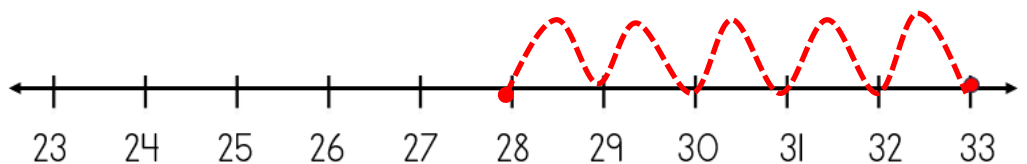
4)  $68 - 5 = \underline{63}$



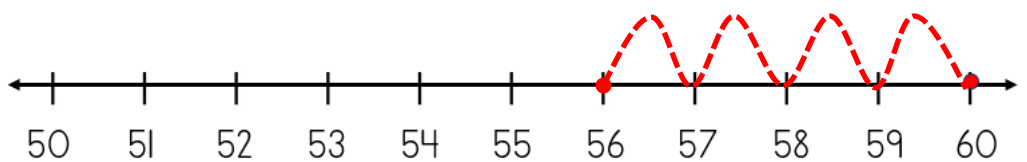
5)  $89 - 2 = \underline{87}$



6)  $33 - 5 = \underline{28}$



7)  $60 - 4 = \underline{56}$



8)  $91 - 3 = \underline{88}$

