


Name _____

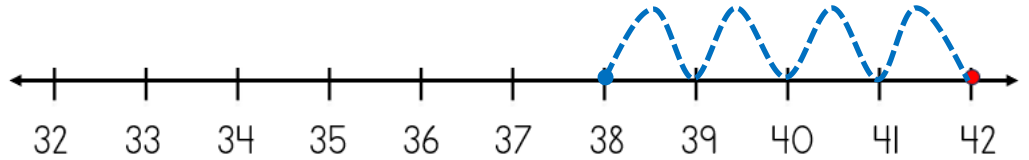
Date _____



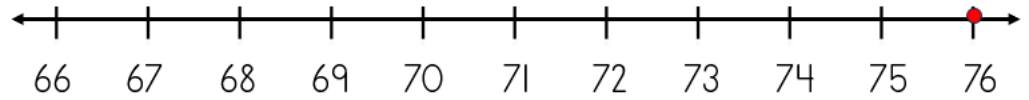
SUBTRACTING ON A NUMBER LINE WITHIN 100 SHEET 2A

Jump back along the number line to find the answer.

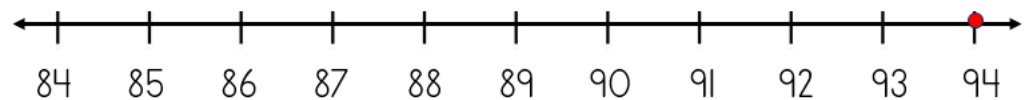
1) $42 - 4 = \underline{\quad}$



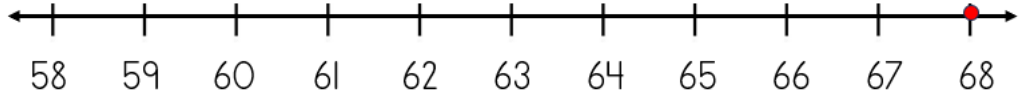
2) $76 - 3 = \underline{\quad}$



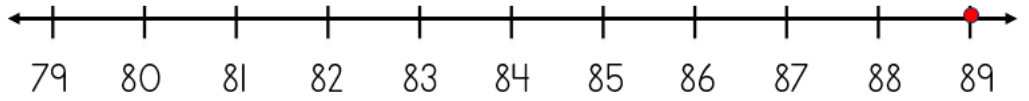
3) $94 - 6 = \underline{\quad}$



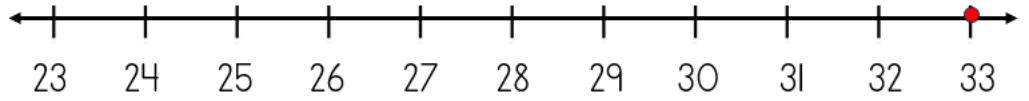
4) $68 - 5 = \underline{\quad}$



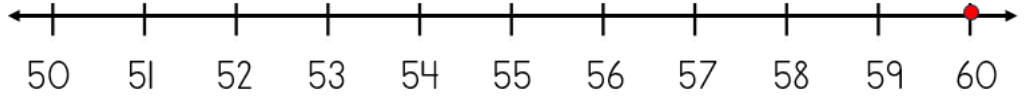
5) $89 - 2 = \underline{\quad}$




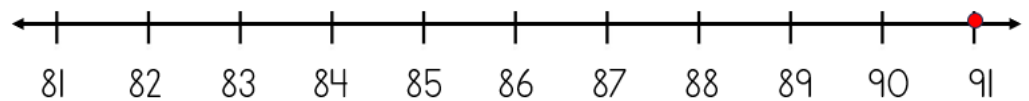
6) $33 - 5 = \underline{\quad}$



7) $60 - 4 = \underline{\quad}$



8) $91 - 3 = \underline{\quad}$



Name

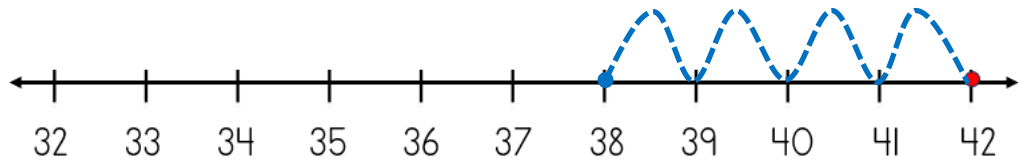
Date



SUBTRACTING ON A NUMBER LINE WITHIN 100

SHEET 2A ANSWERS

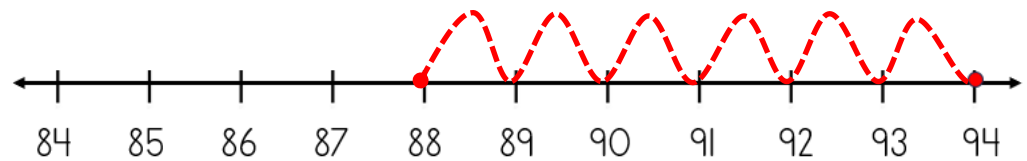
1) $42 - 4 = \underline{38}$



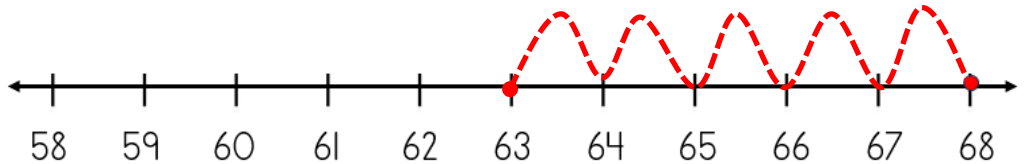
2) $76 - 3 = \underline{73}$



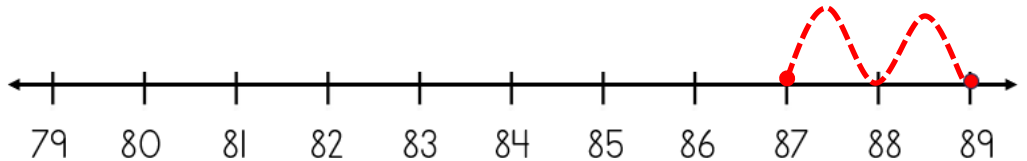
3) $94 - 6 = \underline{88}$



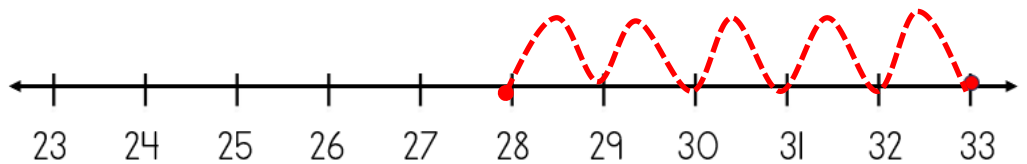
4) $68 - 5 = \underline{63}$



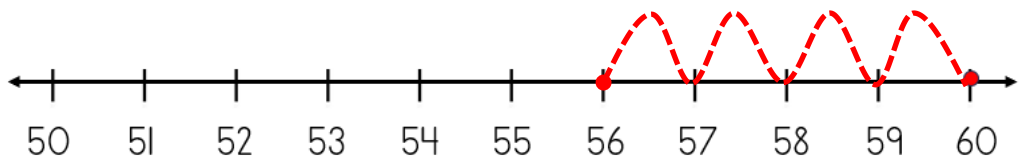
5) $89 - 2 = \underline{87}$



6) $33 - 5 = \underline{28}$



7) $60 - 4 = \underline{56}$



8) $91 - 3 = \underline{88}$

