


Name _____

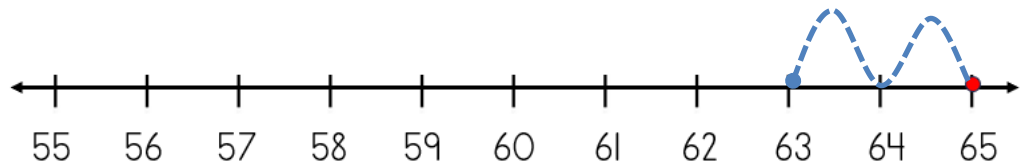
Date _____



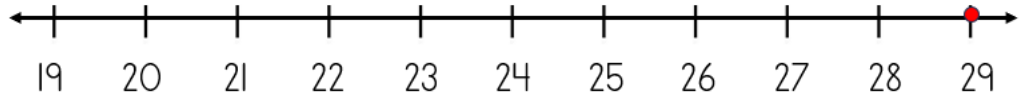
SUBTRACTING ON A NUMBER LINE WITHIN 100 SHEET 1A

Jump back along the number line to find the answer.

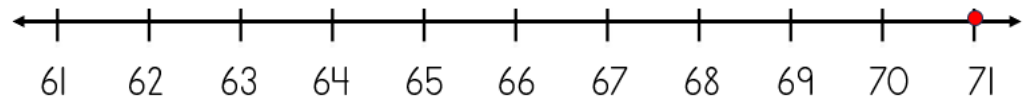
1) $65 - 2 = \underline{\quad}$



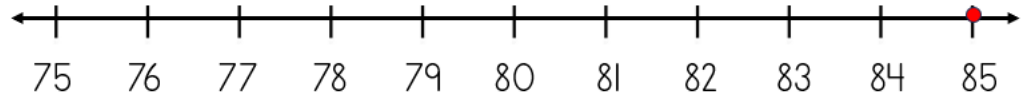
2) $29 - 5 = \underline{\quad}$



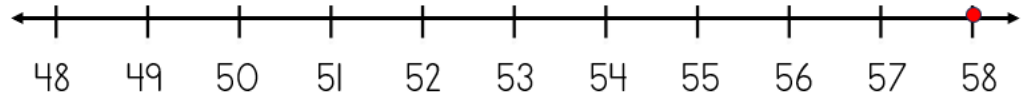
3) $71 - 3 = \underline{\quad}$



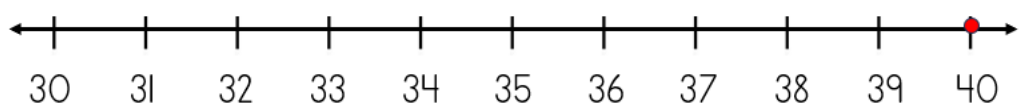
4) $85 - 5 = \underline{\quad}$



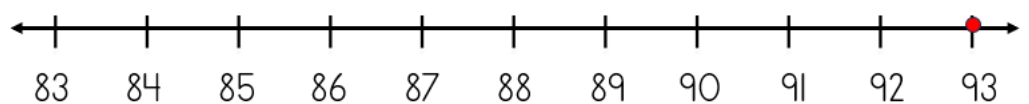
5) $58 - 4 = \underline{\quad}$




6) $40 - 6 = \underline{\quad}$



7) $93 - 2 = \underline{\quad}$



8) $36 - 3 = \underline{\quad}$



Name

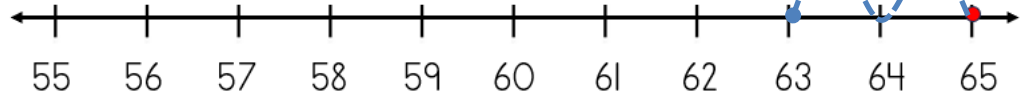
Date



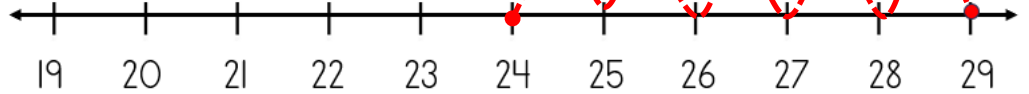
SUBTRACTING ON A NUMBER LINE WITHIN 100

SHEET 1A ANSWERS

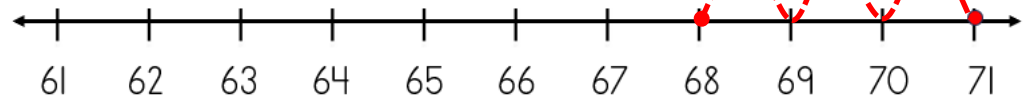
1) $65 - 2 = \underline{63}$



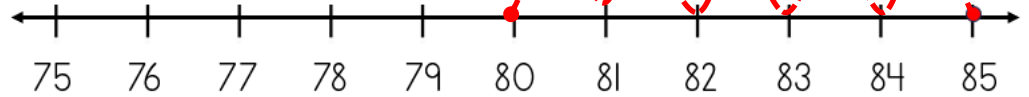
2) $29 - 5 = \underline{24}$



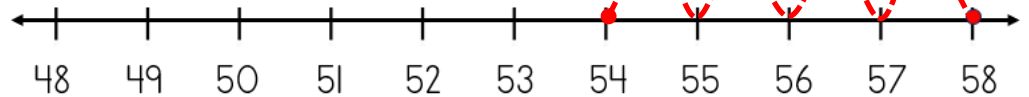
3) $71 - 3 = \underline{68}$



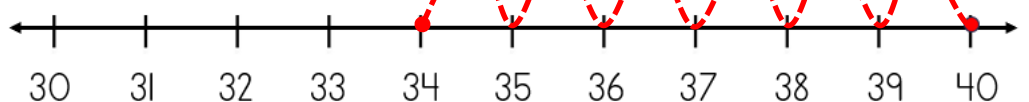
4) $85 - 5 = \underline{80}$



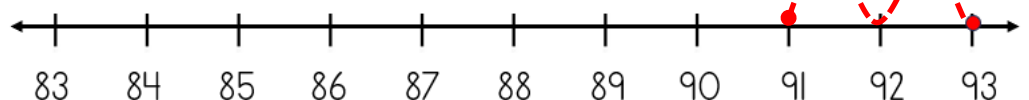
5) $58 - 4 = \underline{54}$



6) $40 - 6 = \underline{34}$



7) $93 - 2 = \underline{91}$



8) $36 - 3 = \underline{33}$

