

Name _____

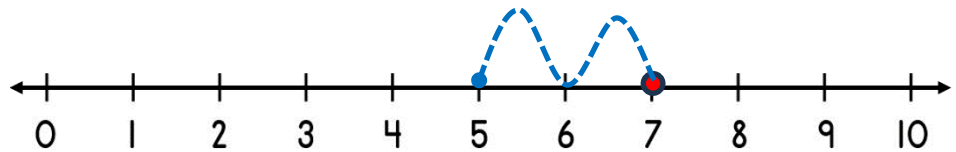
Date _____



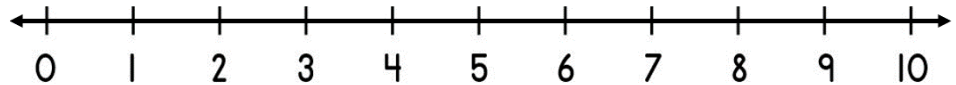
SUBTRACTING ON A NUMBER LINE WITHIN 10 SHEET 4B

Jump back in ones from the starting number to find the missing subtrahend.

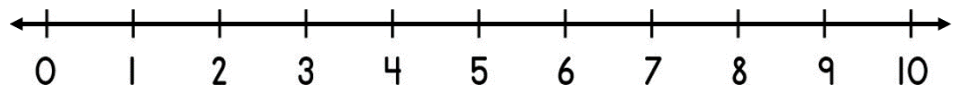
1) $7 - \underline{\quad} = 5$



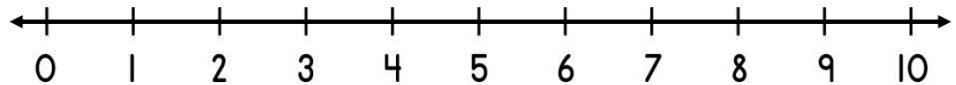
2) $4 - \underline{\quad} = 1$



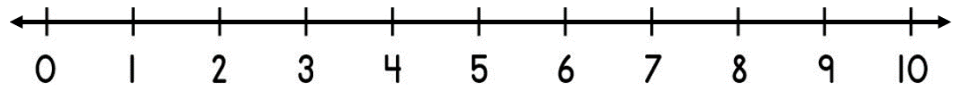
3) $9 - \underline{\quad} = 8$



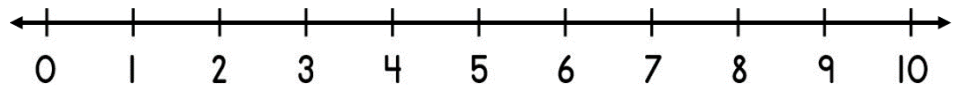
4) $6 - \underline{\quad} = 2$



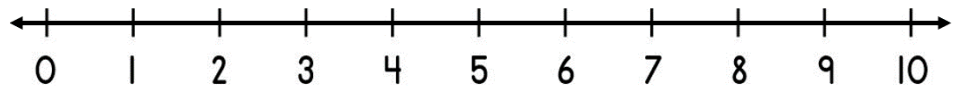
5) $3 - \underline{\quad} = 0$




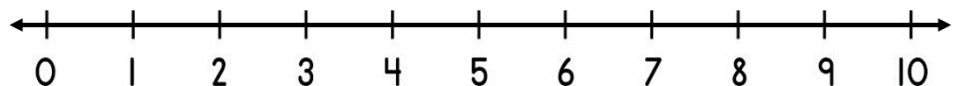
6) $8 - \underline{\quad} = 4$



7) $7 - \underline{\quad} = 2$




8) $10 - \underline{\quad} = 8$



Name

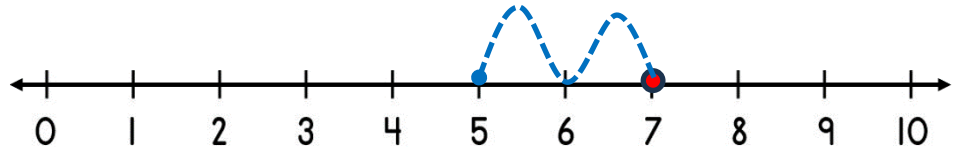
Date



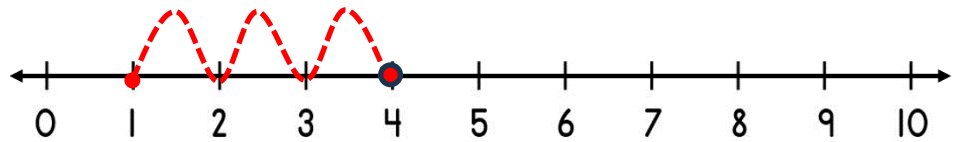
SUBTRACTING ON A NUMBER LINE WITHIN 10

SHEET 4B ANSWERS

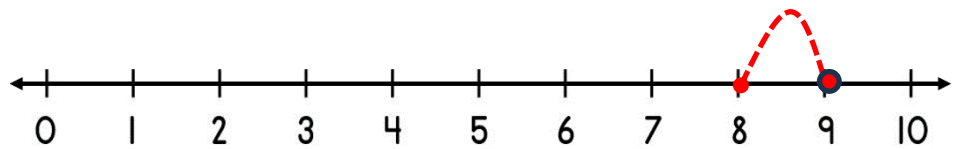
1) $7 - \underline{2} = 5$



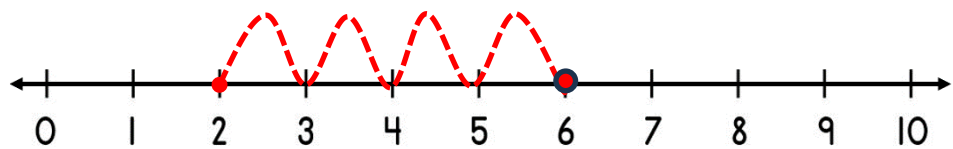
2) $4 - \underline{3} = 1$



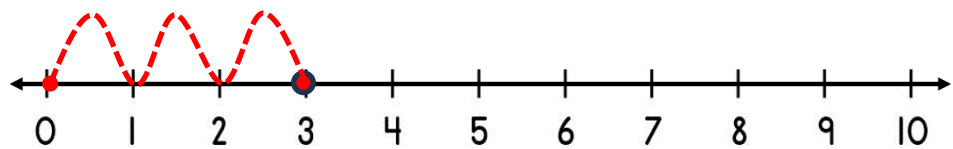
3) $9 - \underline{1} = 8$



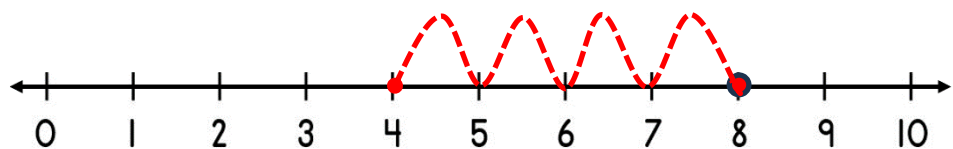
4) $6 - \underline{4} = 2$



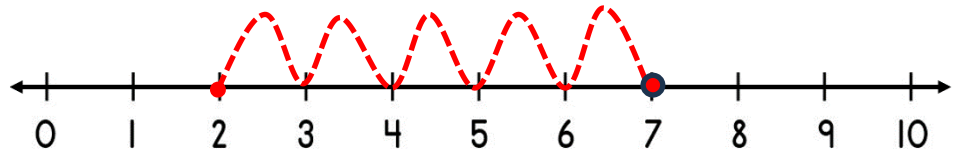
5) $3 - \underline{3} = 0$



6) $8 - \underline{4} = 4$



7) $7 - \underline{5} = 2$



8) $10 - \underline{2} = 8$

