

Name \_\_\_\_\_

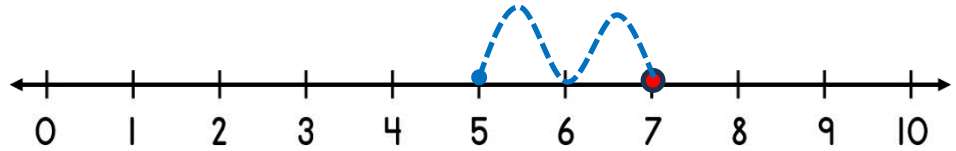
Date \_\_\_\_\_



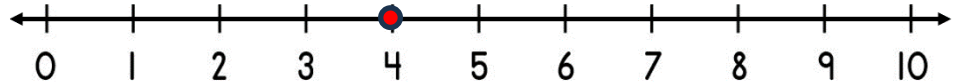
# SUBTRACTING ON A NUMBER LINE WITHIN 10 SHEET 4A

*Jump back in ones from the starting number to find the missing subtrahend.*

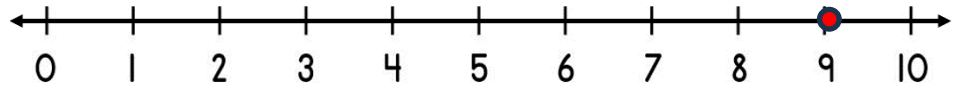
1)  $7 - \underline{\quad} = 5$



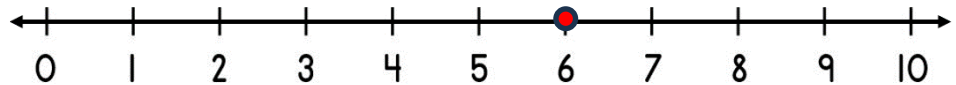
2)  $4 - \underline{\quad} = 1$



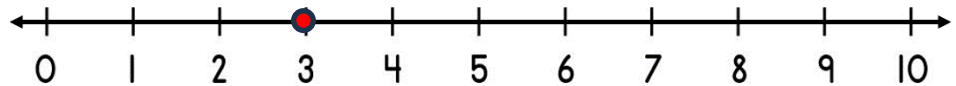
3)  $9 - \underline{\quad} = 8$



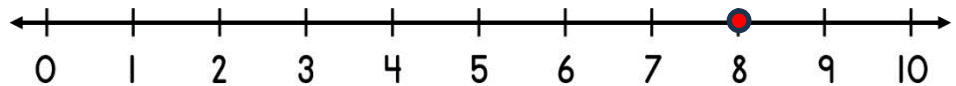
4)  $6 - \underline{\quad} = 2$



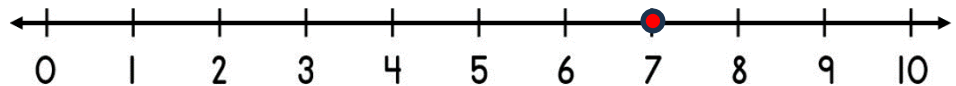
5)  $3 - \underline{\quad} = 0$




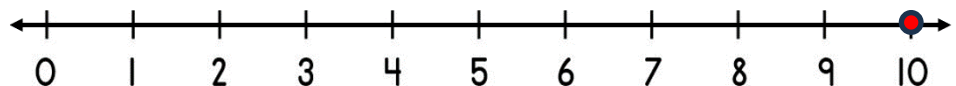
6)  $8 - \underline{\quad} = 4$



7)  $7 - \underline{\quad} = 2$




8)  $10 - \underline{\quad} = 8$



Name

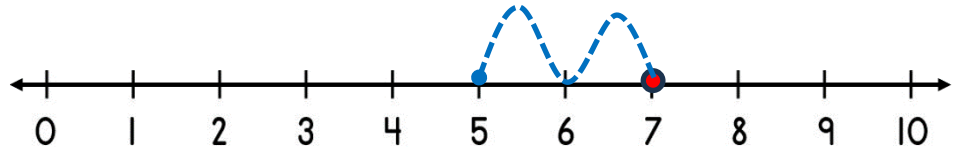
Date



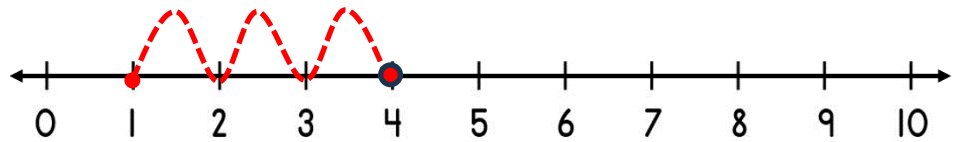
# SUBTRACTING ON A NUMBER LINE WITHIN 10

## SHEET 4A ANSWERS

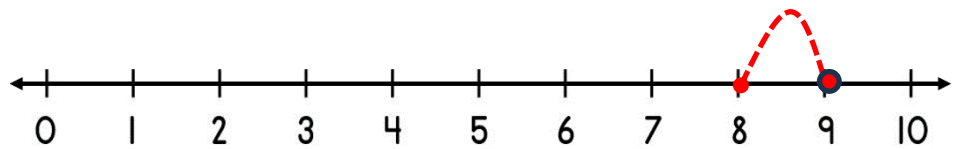
1)  $7 - \underline{2} = 5$



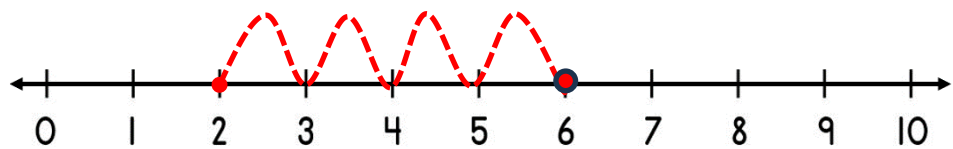
2)  $4 - \underline{3} = 1$



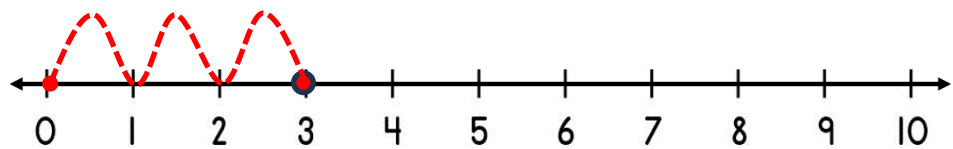
3)  $9 - \underline{1} = 8$



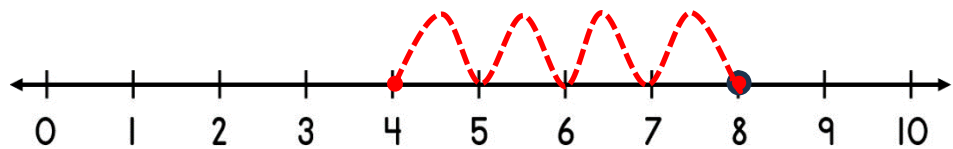
4)  $6 - \underline{4} = 2$



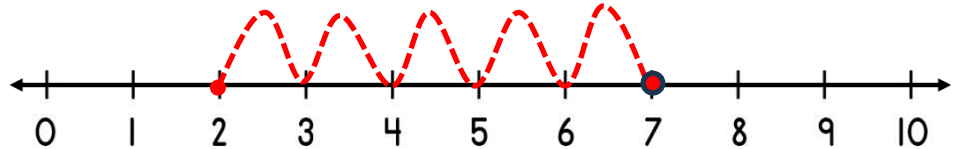
5)  $3 - \underline{3} = 0$



6)  $8 - \underline{4} = 4$



7)  $7 - \underline{5} = 2$



8)  $10 - \underline{2} = 8$

