


Name \_\_\_\_\_

Date \_\_\_\_\_



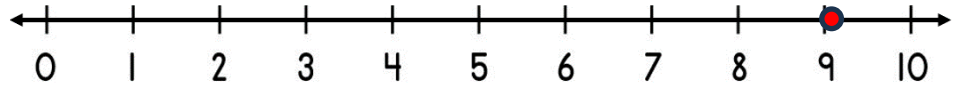
## SUBTRACTING ON A NUMBER LINE WITHIN 10 SHEET 2

*Jump back along the number line to find the answer.*

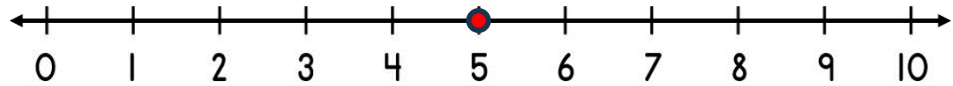
1)  $7 - 1 =$  \_\_\_\_\_



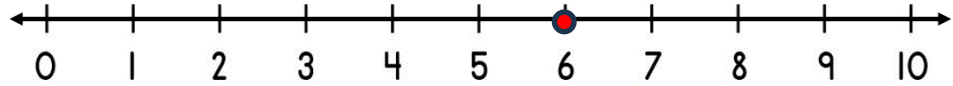
2)  $9 - 2 =$  \_\_\_\_\_



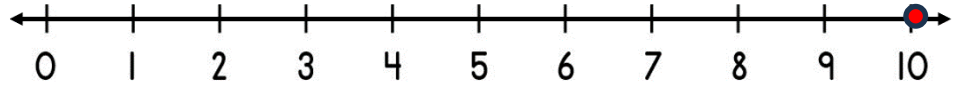
3)  $5 - 4 =$  \_\_\_\_\_



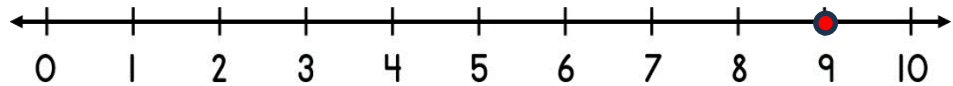
4)  $6 - 3 =$  \_\_\_\_\_



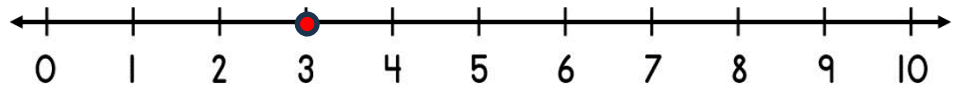
5)  $10 - 2 =$  \_\_\_\_\_




6)  $9 - 4 =$  \_\_\_\_\_



7)  $3 - 3 =$  \_\_\_\_\_




8)  $7 - 5 =$  \_\_\_\_\_



Name

Date



# SUBTRACTING ON A NUMBER LINE WITHIN 10

## SHEET 2 ANSWERS

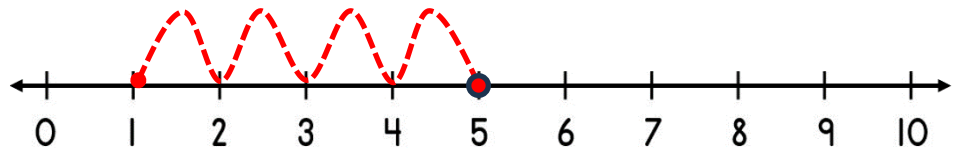
1)  $7 - 1 = \underline{6}$



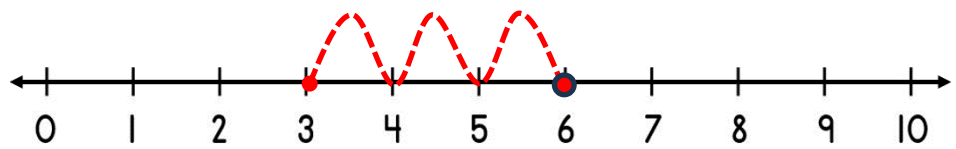
2)  $9 - 2 = \underline{7}$



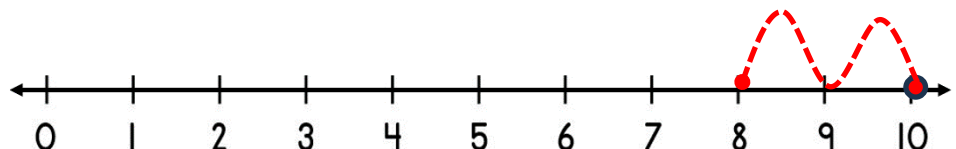
3)  $5 - 4 = \underline{1}$



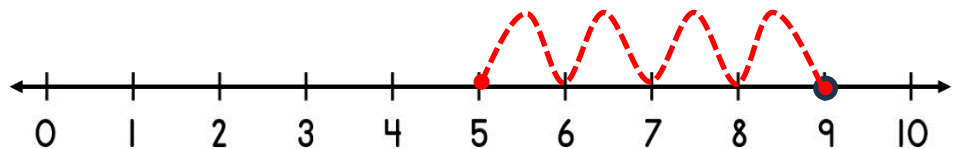
4)  $6 - 3 = \underline{3}$



5)  $10 - 2 = \underline{8}$



6)  $9 - 4 = \underline{5}$



7)  $3 - 3 = \underline{0}$



8)  $7 - 5 = \underline{2}$

