


Name \_\_\_\_\_

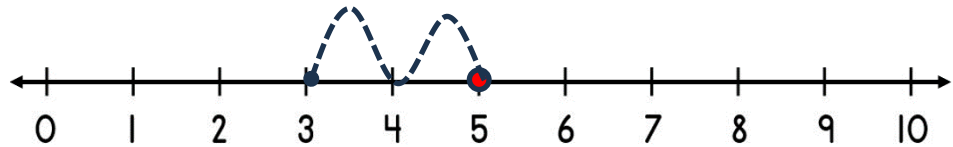
Date \_\_\_\_\_



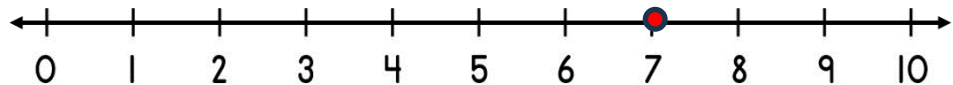
# SUBTRACTING ON A NUMBER LINE WITHIN 10 SHEET 1

*Jump back along the number line to find the answer.*

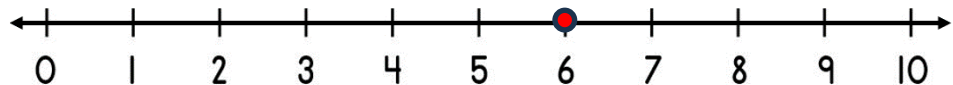
1)  $5 - 2 =$  \_\_\_\_\_



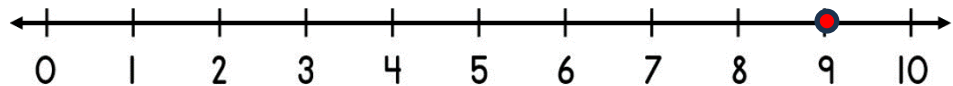
2)  $7 - 1 =$  \_\_\_\_\_



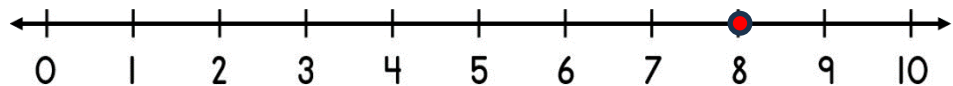
3)  $6 - 3 =$  \_\_\_\_\_



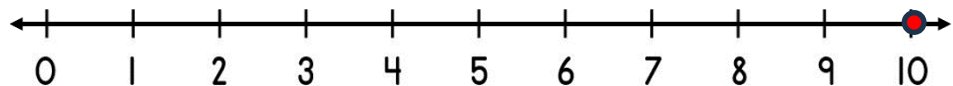
4)  $9 - 2 =$  \_\_\_\_\_



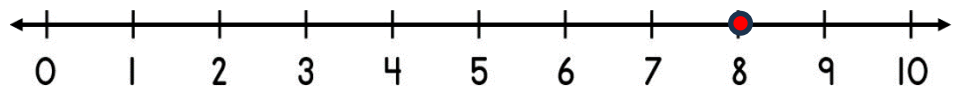
5)  $8 - 4 =$  \_\_\_\_\_




6)  $10 - 3 =$  \_\_\_\_\_



7)  $8 - 2 =$  \_\_\_\_\_




8)  $4 - 4 =$  \_\_\_\_\_



Name

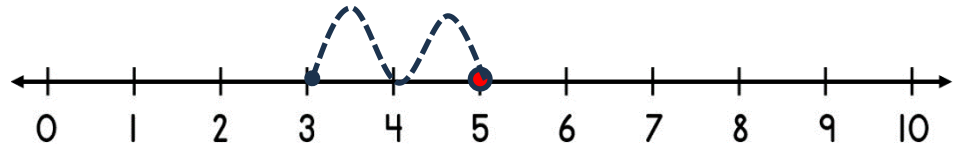
Date



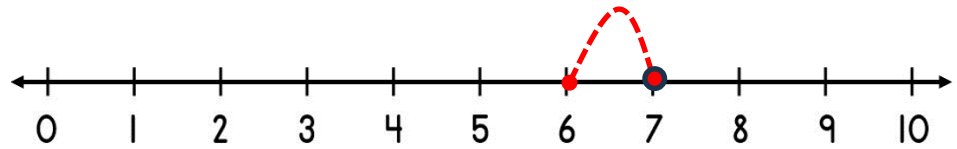
# SUBTRACTING ON A NUMBER LINE WITHIN 10

## SHEET 1 ANSWERS

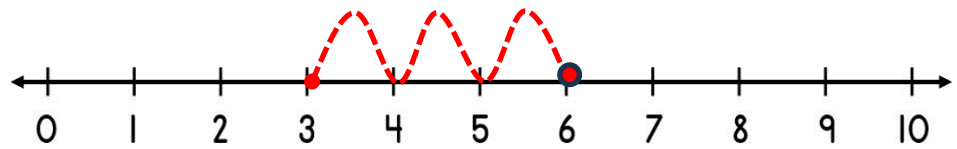
1)  $5 - 2 = \underline{3}$



2)  $7 - 1 = \underline{6}$



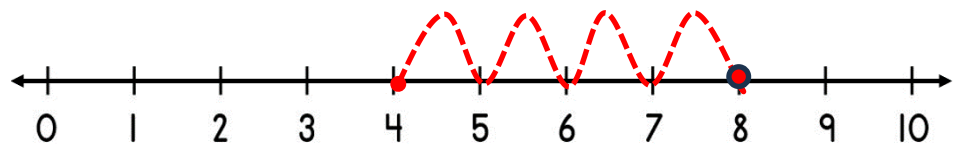
3)  $6 - 3 = \underline{3}$



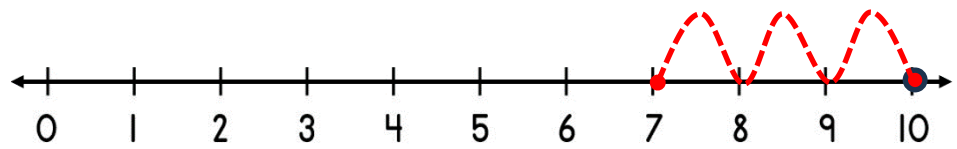
4)  $9 - 2 = \underline{7}$



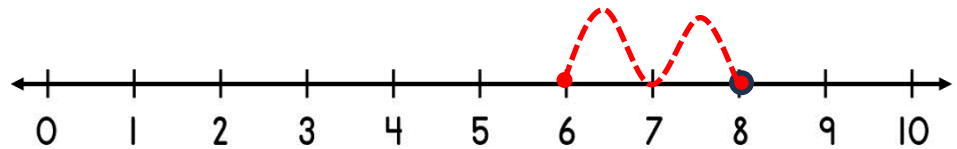
5)  $8 - 4 = \underline{4}$



6)  $10 - 3 = \underline{7}$



7)  $8 - 2 = \underline{6}$



8)  $4 - 4 = \underline{0}$

