


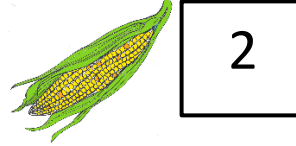

Name

Date



THANKSGIVING PICTURE PUZZLE 1A

Each Thanksgiving picture has a value shown in the boxes below.



Work out the total of each horizontal and vertical line of this puzzle.

				= 10
				= _____
				= _____
				= _____

= _____ = _____ = _____ = _____




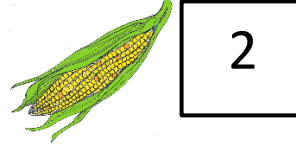

Name

Date



















THANKSGIVING PICTURE PUZZLE 1A ANSWERS

Each Thanksgiving picture has a value shown in the boxes below.



Work out the total of each horizontal and vertical line of this puzzle.

				= 10
				= <u>11</u>
				= <u>11</u>
				= <u>8</u>
= <u>10</u>	= <u>9</u>	= <u>11</u>	= <u>10</u>	

