

Name


Date



THANKSGIVING ARITHMETIC SYMBOL PUZZLE 5B

Each Thanksgiving symbol is worth a different value between 1 and 6 (inclusive).

Use the clues below to find the value of each object and to work out the missing values in the equations.

	+		=	
	-		=	
	÷		=	
	x		=	
	+		=	?
	x		=	?

Value of each object

									
-------------------------------------------------------------------------------------	--	-------------------------------------------------------------------------------------	--	-------------------------------------------------------------------------------------	--	--------------------------------------------------------------------------------------	--	---------------------------------------------------------------------------------------	--

Name



















Date



THANKSGIVING ARITHMETIC SYMBOL PUZZLE 5B ANSWERS

Each Thanksgiving symbol is worth a different value between 1 and 6 (inclusive).

Use the clues below to find the value of each object and to work out the missing values in the equations.

	+		=	
	-		=	
	÷		=	
	x		=	
	+		=	
	x		=	

Value of each object

	1		2		5		6		3
-------------------------------------------------------------------------------------	---	-------------------------------------------------------------------------------------	---	-------------------------------------------------------------------------------------	---	--------------------------------------------------------------------------------------	---	---------------------------------------------------------------------------------------	---