

Name

















Date



THANKSGIVING ARITHMETIC SYMBOL PUZZLE 5A

Each Thanksgiving symbol is worth a different value between 2 and 7 (inclusive).

Use the clues below to find the value of each object and to work out the missing values in the equations.

	\times		$=$	
	$-$		$=$	
	$+$		$=$	
	$-$		$=$	
	\div		$=$	$?$
	$+$		$=$	$?$

Value of each object

									
---	--	---	--	---	--	--	--	---	--

Name

















Date






THANKSGIVING ARITHMETIC SYMBOL PUZZLE 5A ANSWERS

Each Thanksgiving symbol is worth a different value between 2 and 7 (inclusive).

Use the clues below to find the value of each object and to work out the missing values in the equations.

	\times		$=$	
	$-$		$=$	
	$+$		$=$	
	$-$		$=$	
	\div		$=$	
	$+$		$=$	

Value of each object

	4		3		2		7		6
---	---	---	---	---	---	--	---	---	---