

Name

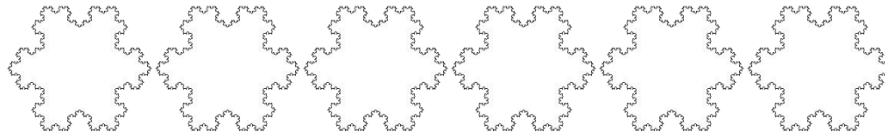
Date



CHRISTMAS FRACTIONS OF OBJECTS 2 UNIT FRACTIONS

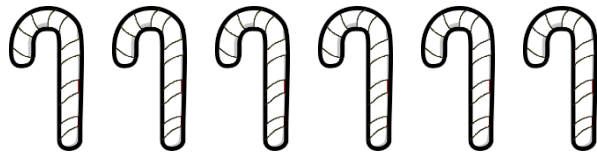
Use your fraction skills to shade in the correct number of each of the Christmas pictures.

1)




Shade $\frac{1}{6}$
gray.

2)



Shade $\frac{1}{3}$
blue.

3)




Shade $\frac{1}{2}$
yellow.

4)



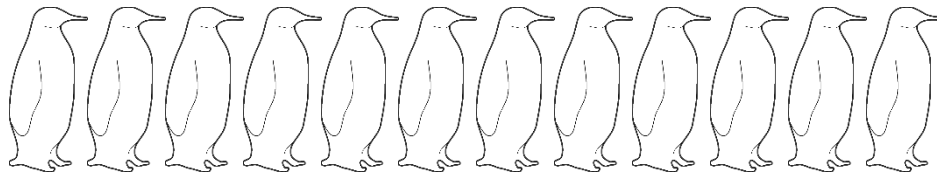
Shade $\frac{1}{5}$
orange.

5)



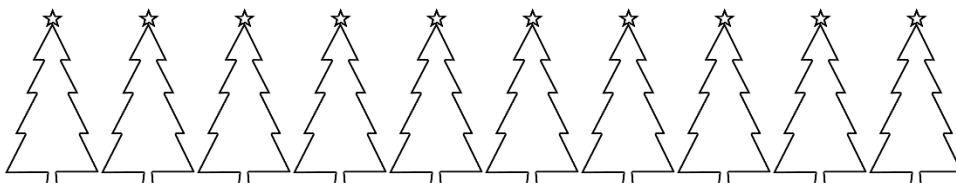
Shade $\frac{1}{4}$
purple.

6)



Shade $\frac{1}{3}$
blue.

7)



Shade $\frac{1}{5}$
green.


Name

Date



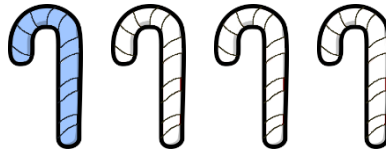
CHRISTMAS FRACTIONS OF OBJECTS 2 UNIT FRACTIONS ANSWERS

1)




Shade $\frac{1}{2}$
gray.

2)



Shade $\frac{1}{4}$
blue.

3)



Shade $\frac{1}{2}$
yellow.

4)




Shade $\frac{1}{4}$
orange.

5)



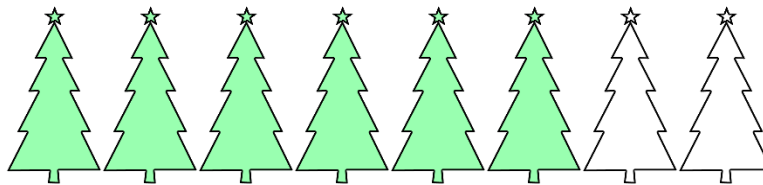
Shade $\frac{3}{4}$
purple.

6)



Shade $\frac{1}{2}$
blue.

7)



Shade $\frac{3}{4}$
green.