

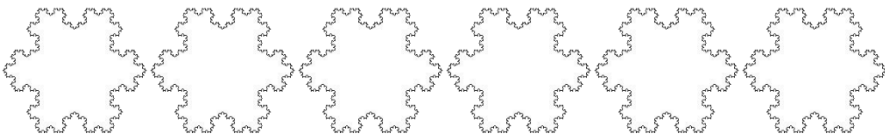
Name

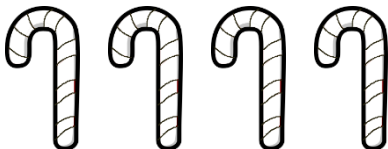
Date




## CHRISTMAS FRACTIONS OF OBJECTS 1 HALVES AND QUARTERS

Use your fraction skills to shade in the correct number of each of the Christmas pictures.


1)  Shade  $\frac{1}{2}$  gray.


2)  Shade  $\frac{1}{4}$  blue.

3)  Shade  $\frac{1}{2}$  yellow.

4)  Shade  $\frac{1}{4}$  orange.

5)  Shade  $\frac{3}{4}$  purple.

6)  Shade  $\frac{1}{2}$  blue.

7)  Shade  $\frac{3}{4}$  green.

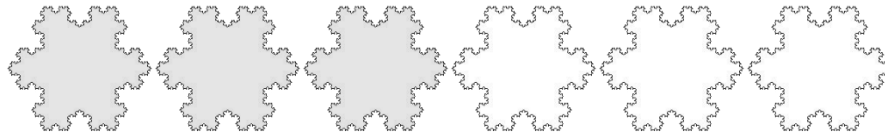
Name

Date



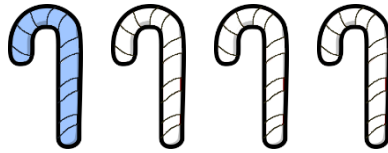
# CHRISTMAS FRACTIONS OF OBJECTS 1 HALVES AND QUARTERS ANSWERS

1)




Shade  $\frac{1}{2}$   
gray.

2)



Shade  $\frac{1}{4}$   
blue.

3)



Shade  $\frac{1}{2}$   
yellow.

4)




Shade  $\frac{1}{4}$   
orange.

5)



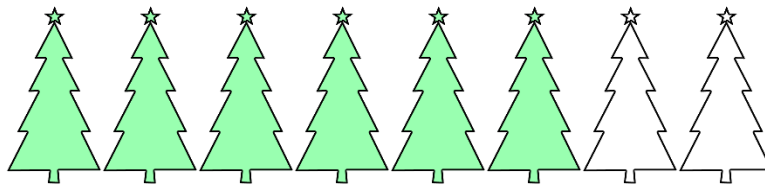
Shade  $\frac{3}{4}$   
purple.

6)



Shade  $\frac{1}{2}$   
blue.

7)



Shade  $\frac{3}{4}$   
green.