



Name

Date



## ODD AND EVEN NUMBERS TO 100 SHEET 4

Shade all the **even** numbers to find out which route the mouse takes to get the cheese.

	61	39	32	26	40	18	27
94	47	35	12	63	81	24	32
38	44	75	70	56	47	29	62
93	6	87	41	0	25	74	28
69	14	53	46	72	49	60	23
16	38	51	4	43	77	82	30
82	35	7	10	39	81	27	54
96	34	35	16	88	29	20	56
17	70	23	19	54	91	22	5
63	24	42	86	34	27	8	


Name

Date



# ODD AND EVEN NUMBERS TO 100 SHEET 4 ANSWERS

Shade all the **even** numbers to find out which route the mouse takes to get the cheese.

	61	39	32	26	40	18	27
94	47	35	12	63	81	24	32
38	44	75	70	56	47	29	62
93	6	87	41	0	25	74	28
69	14	53	46	72	49	60	23
16	38	51	4	43	77	82	30
82	35	7	10	39	81	27	54
96	34	35	16	88	29	20	56
17	70	23	19	54	91	22	5
63	24	42	86	34	27	8	