

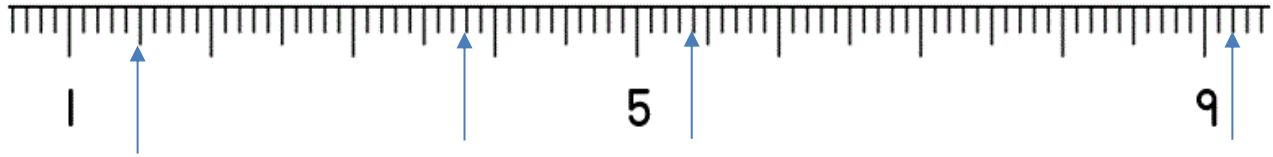
Name

Date



DECIMAL NUMBER LINES TO 1DP SHEET 2B

1) Write the missing decimal values on each of the arrows.



2) Write the missing decimal values on each of the arrows.



3) Draw arrows to correctly place each number on the number line below.

7.9	11.3	14.7	12.5
-----	------	------	------



4) Draw arrows to correctly place each number on the number line below.

15.7	9.8	11.5	17.1
------	-----	------	------



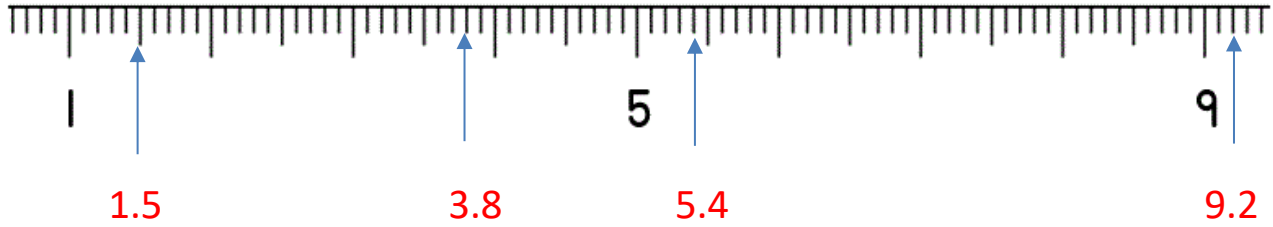
Name

Date

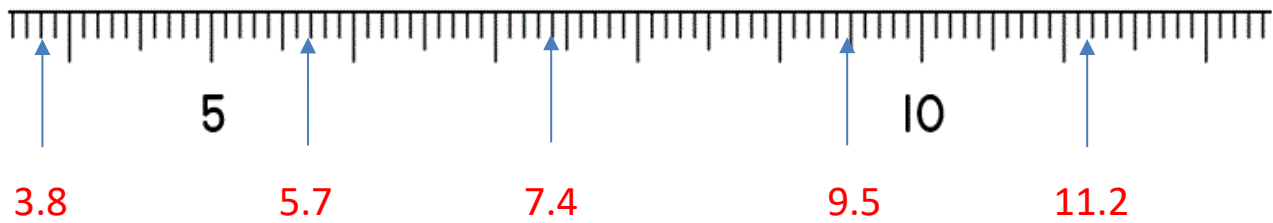


DECIMAL NUMBER LINES TO 1DP SHEET 2B ANSWERS

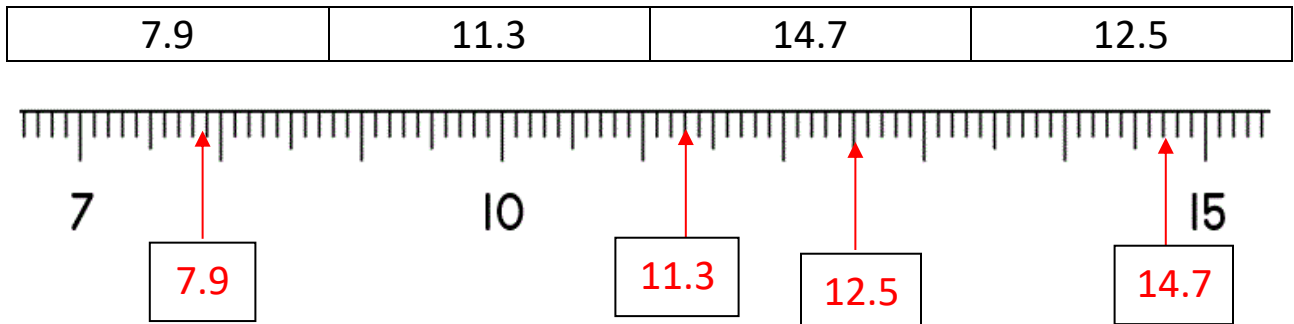
1) Write the missing decimal values on each of the arrows.



2) Write the missing decimal values on each of the arrows.



3) Draw arrows to correctly place each number on the number line below.



4) Draw arrows to correctly place each number on the number line below.

