

Name _____

Date _____



SPOT THE INEQUALITY ON A NUMBER LINE 2

	NUMBER LINE	INEQUALITY FOR x
1)		_____
2)		_____
3)		_____
4)		_____
5)		_____
6)		_____
7)		_____
8)		_____

Name

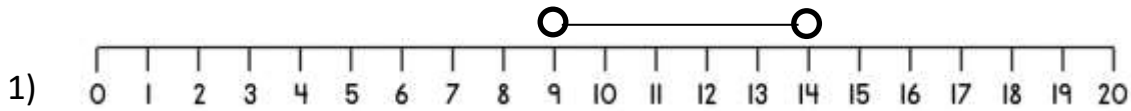
Date



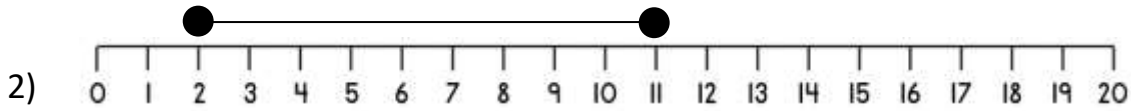
SPOT THE INEQUALITY ON A NUMBER LINE 2 ANSWERS

NUMBER LINE

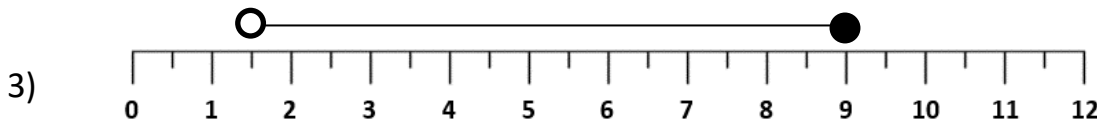
INEQUALITY FOR x



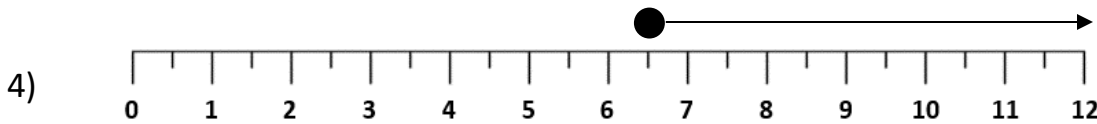
$9 < x < 14$



$2 \leq x \leq 11$



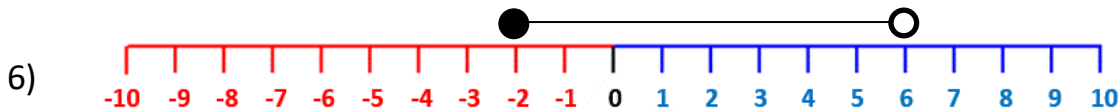
$1.5 < x \leq 9$
or
 $1 \frac{1}{2} < x \leq 9$



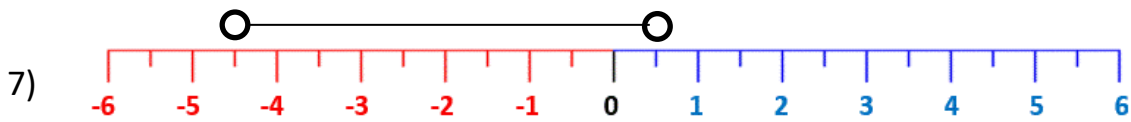
$x \geq 6.5$
or
 $x \geq 6 \frac{1}{2}$



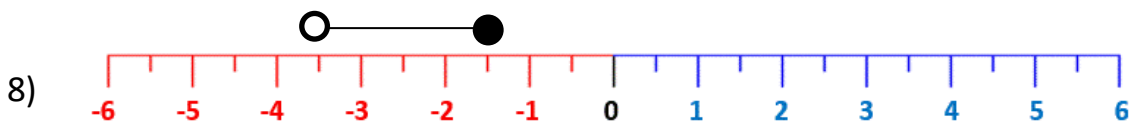
$x < -6$



$-2 \leq x < 6$



$-4.5 < x < 0.5$
or
 $-4 \frac{1}{2} < x < \frac{1}{2}$



$-3.5 < x \leq -1.5$
or
 $-3 \frac{1}{2} < x \leq -1 \frac{1}{2}$