

Name _____

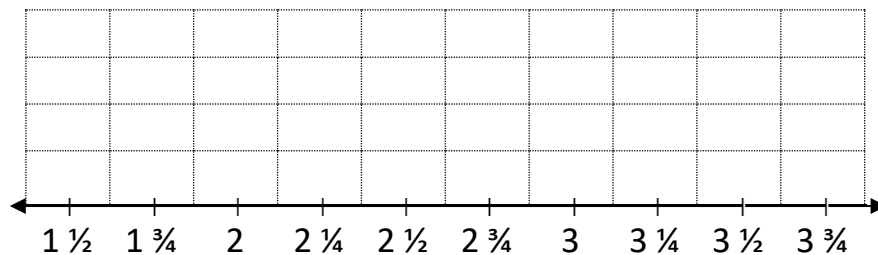



Date _____



CREATING LINE PLOTS SHEET 3:3

- Captain measures the weight of 16 cockatiels. Their weights are shown below.
- *Complete the missing weights and then use line plot to show this data.*

2 $\frac{1}{4}$ oz	_____ OZ	_____ OZ	_____ OZ
_____ OZ	_____ OZ	_____ OZ	_____ OZ
_____ OZ	_____ OZ	_____ OZ	_____ OZ
_____ OZ	_____ OZ	_____ OZ	_____ OZ



Name _____

Date _____



CREATING LINE PLOTS SHEET 3:3 ANSWERS

- Captain measures the weight of 16 cockatiels. Their weights are shown below.
- Complete the missing weights and then use line plot to show this data.

<u>2 1/4</u> oz	<u>3</u> oz	<u>1 3/4</u> oz	<u>3 1/2</u> oz
<u>2 3/4</u> oz	<u>3 3/4</u> oz	<u>1 1/2</u> oz	<u>2 1/4</u> oz
<u>3 1/2</u> oz	<u>2 1/4</u> oz	<u>3 1/4</u> oz	<u>2 3/4</u> oz
<u>2 1/2</u> oz	<u>1 3/4</u> oz	<u>2 1/2</u> oz	<u>3 1/4</u> oz

