

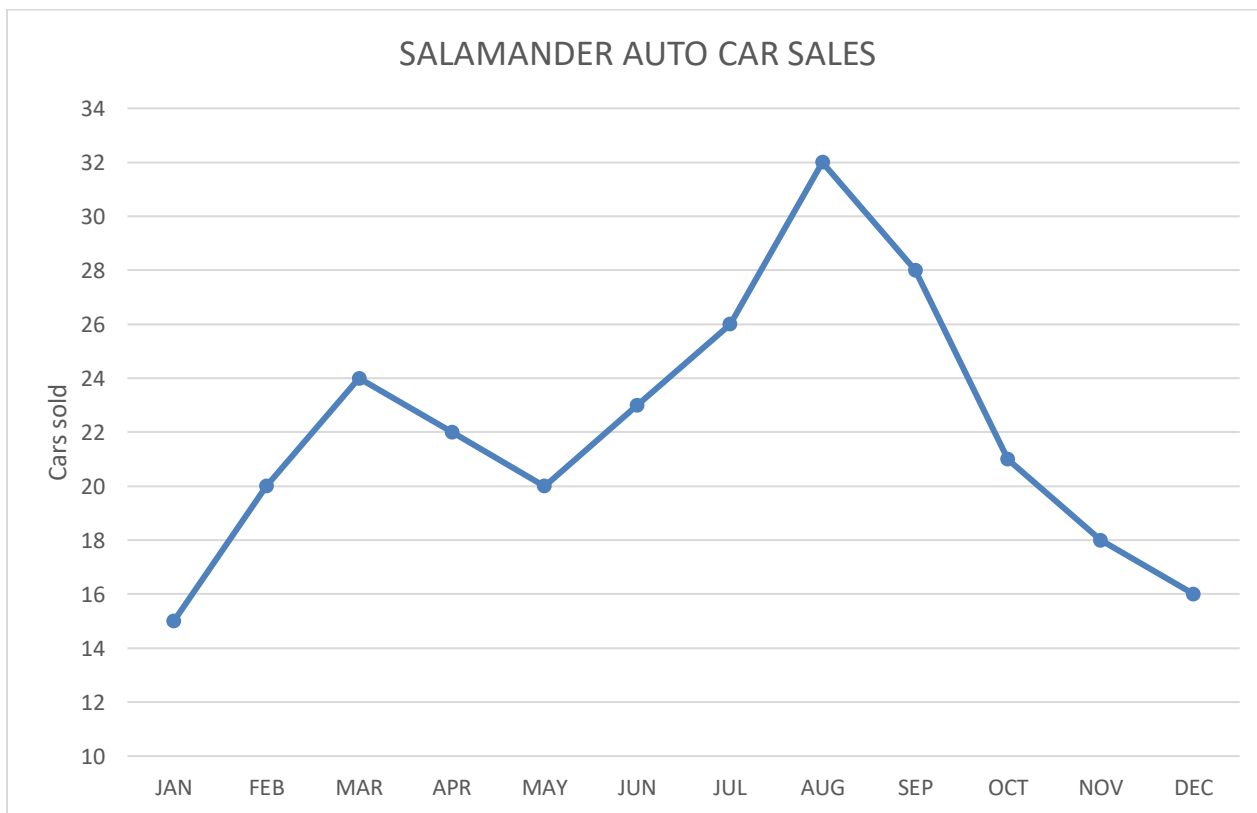
Name _____

Date _____



LINE GRAPH WORKSHEET 4C AUTO SALES

Here is a graph showing the sales of used cars at the Salamander Autos.



Use the line graph to answer the following questions about the data.



- 1) How many cars were sold during May? _____
- 2) How many cars were sold in the first 3 months of the year? _____
- 3) How many more cars were sold in July than May? _____
- 4) Which month had 26 car sales? _____
- 5) Answer **true**, **false** or **can't tell** to each of the statements below:

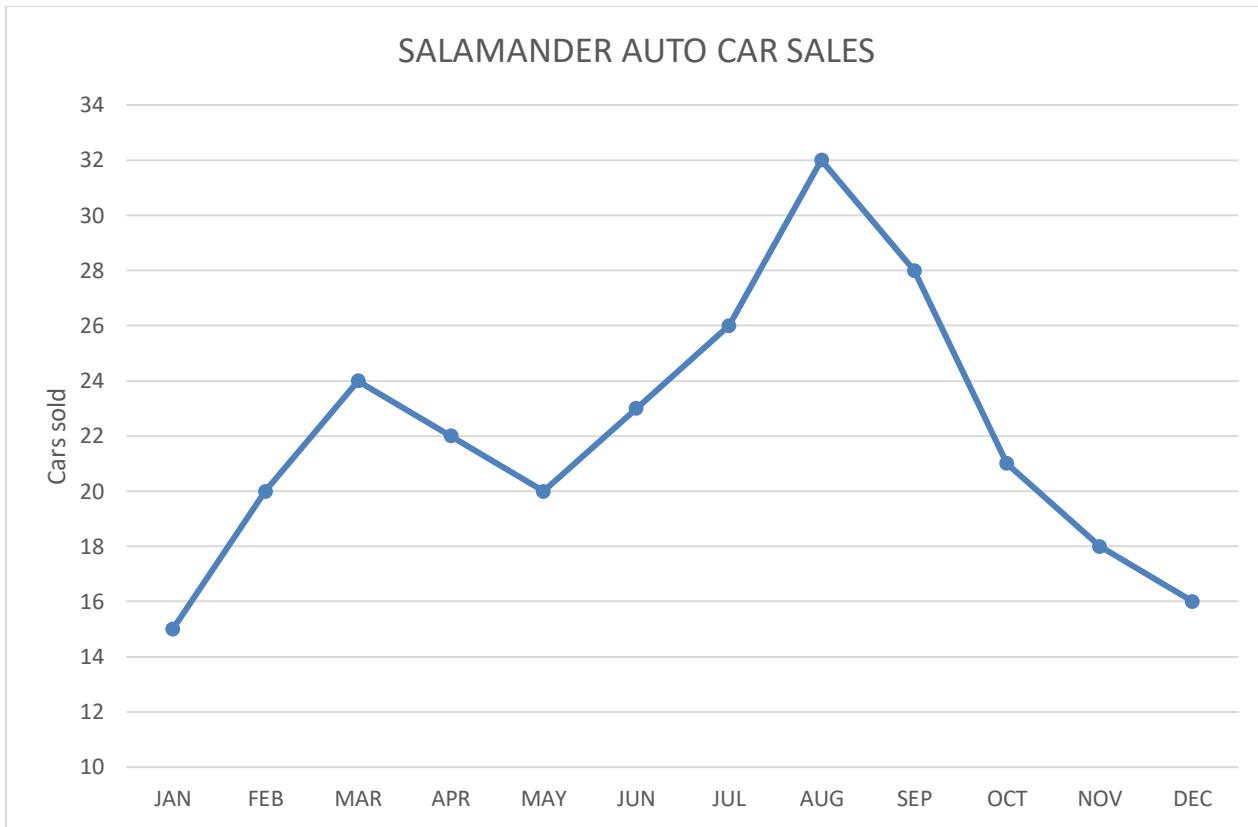
a)	The beginning and end of the year had the lowest number of car sales.	
b)	Car sales increased steadily from March to August.	
c)	August had twice as many sales as December.	
d)	Salamander Autos made the most money in August and September.	
e)	Car sales decreased from August to December.	

Name _____

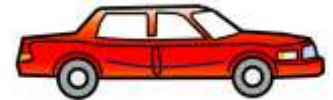
Date _____



LINE GRAPH WORKSHEET 4C CAR SALES ANSWERS



Use the line graph to answer the following questions about the data.



- 1) How many cars were sold during May? 20
- 2) How many cars were sold in the first 3 months of the year? 59
- 3) How many more cars were sold in July than May? 6
- 4) Which month had 26 car sales? July
- 5) Answer **true**, **false** or **can't tell** to each of the statements below:

a)	The beginning and end of the year had the lowest number of car sales.	<u>true</u>
b)	Car sales increased steadily from March to August.	<u>false</u>
c)	August had twice as many sales as December.	<u>true</u>
d)	Salamander Autos made the most money in August and September.	<u>can't tell</u>
e)	Car sales decreased from August to December.	<u>true</u>