

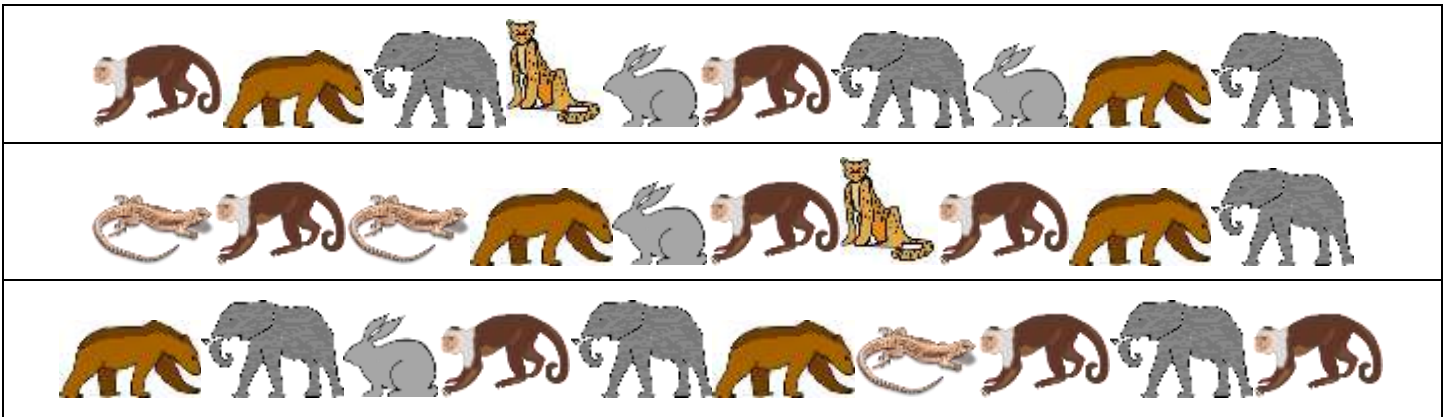
Name







Date



# ANIMAL COUNT AND GRAPH 2A

Count the number of each picture and shade the graph to show the correct amount.



|   |   |   |   |  |   |   |
|---|---|---|---|--|---|---|
| 8 |   |   |   |  |   |   |
| 7 |   |   |   |  |   |   |
| 6 |   |   |   |  |   |   |
| 5 |   |   |   |  |   |   |
| 4 |   |   |   |  |   |   |
| 3 |   |   |   |  |   |   |
| 2 |   |   |   |  |   |   |
| 1 |   |   |   |  |   |   |
|   |  |  |  |  |  |  |

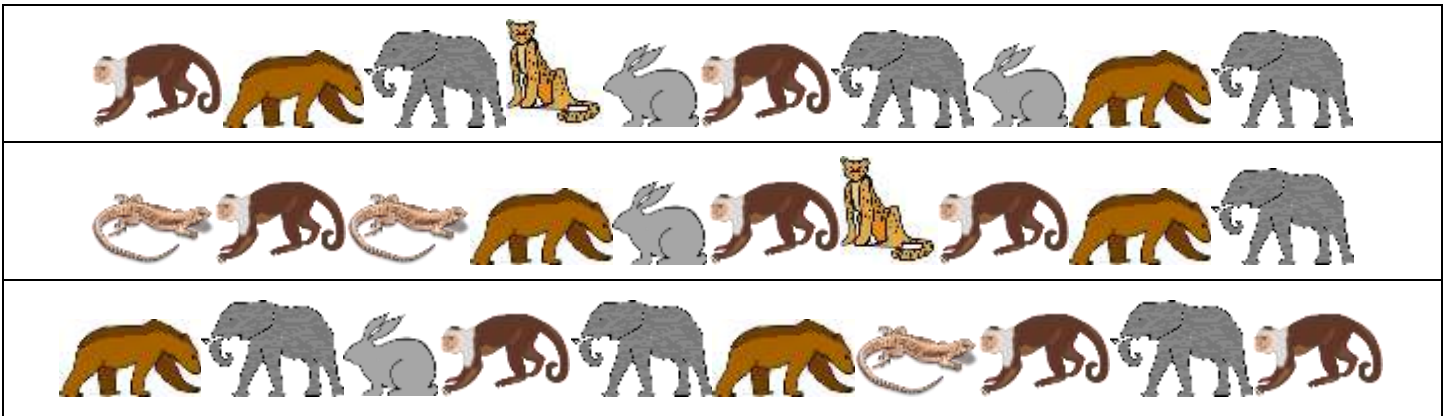
Name

Date



# ANIMAL COUNT AND GRAPH 2A ANSWERS

Count the number of each picture and shade the graph to show the correct amount.



|   |  |  |  |  |  |  |
|---|--|--|--|--|--|--|
| 8 |  |  |  |  |  |  |
| 7 |  |  |  |  |  |  |
| 6 |  |  |  |  |  |  |
| 5 |  |  |  |  |  |  |
| 4 |  |  |  |  |  |  |
| 3 |  |  |  |  |  |  |
| 2 |  |  |  |  |  |  |
| 1 |  |  |  |  |  |  |
|   |  |  |  |  |  |  |