


Name \_\_\_\_\_

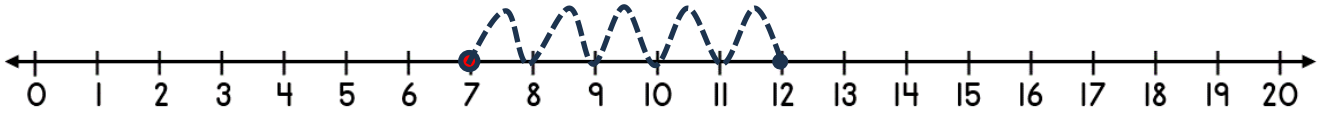
Date \_\_\_\_\_



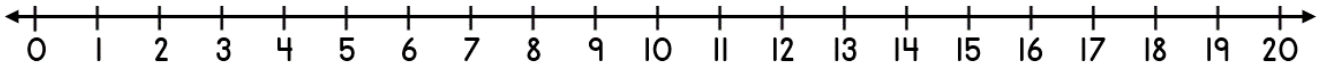
# ADDING ON A NUMBER LINE WITHIN 20 SHEET 4B

*Jump in ones from the starting number to the total to find out how many more.*

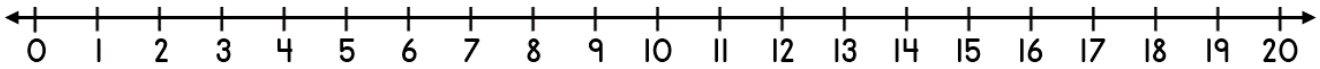
1)  $7 + \underline{\quad} = 12$



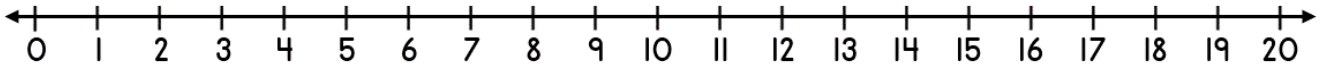
2)  $12 + \underline{\quad} = 14$



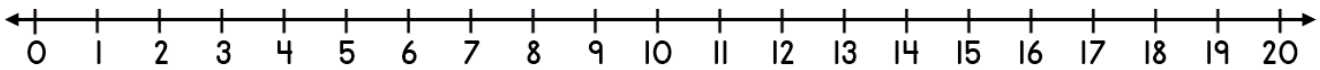
3)  $11 + \underline{\quad} = 15$




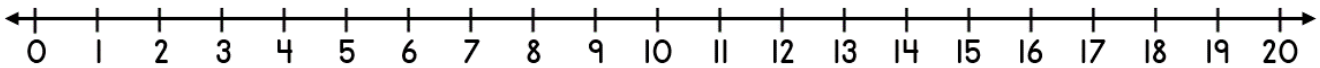
4)  $13 + \underline{\quad} = 16$



5)  $9 + \underline{\quad} = 15$



6)  $16 + \underline{\quad} = 20$



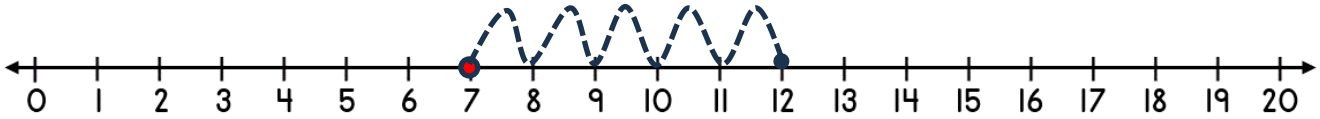
Name

Date

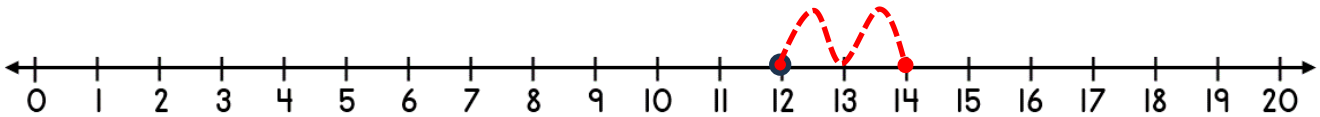


# ADDING ON A NUMBER LINE WITHIN 20 SHEET 4B ANSWERS

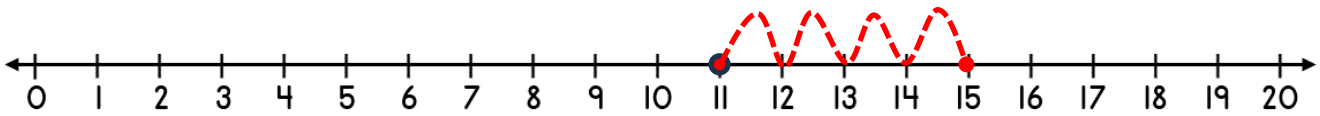
1)  $7 + \underline{5} = 12$



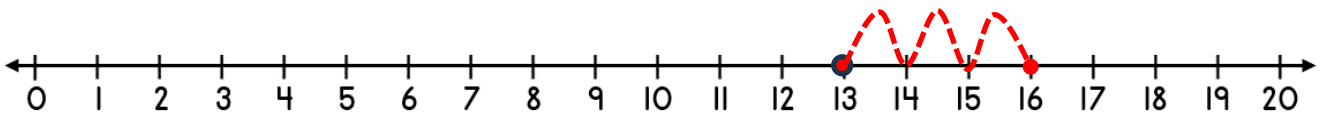
2)  $12 + \underline{2} = 14$



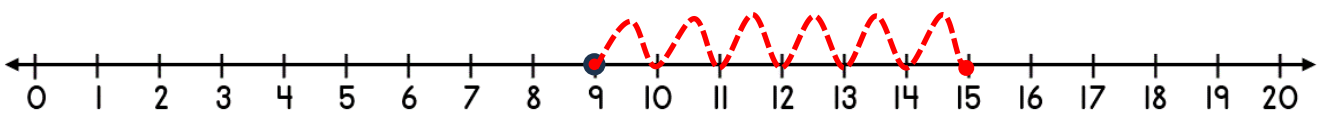
3)  $11 + \underline{4} = 15$



4)  $13 + \underline{3} = 16$



5)  $9 + \underline{6} = 15$



6)  $16 + \underline{4} = 20$

