

Name _____

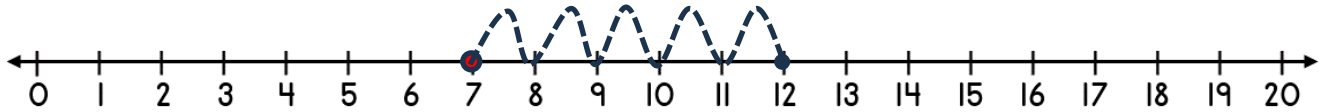
Date _____



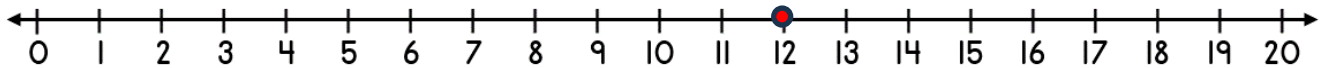
ADDING ON A NUMBER LINE WITHIN 20 SHEET 4A

Jump in ones from the starting number to the total to find out how many more.

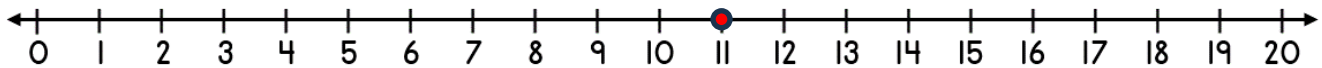
1) $7 + \underline{\quad} = 12$



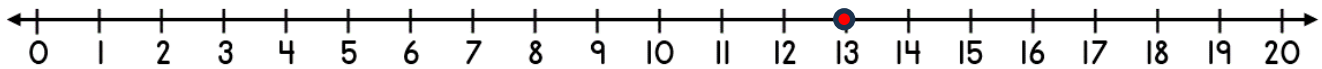
2) $12 + \underline{\quad} = 14$



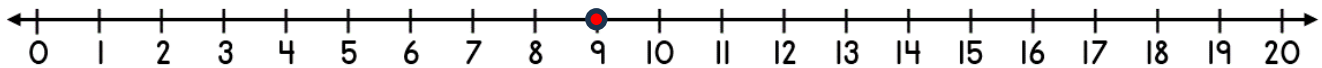
3) $11 + \underline{\quad} = 15$




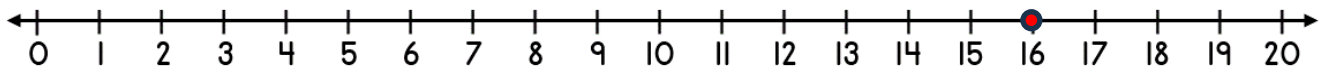
4) $13 + \underline{\quad} = 16$



5) $9 + \underline{\quad} = 15$



6) $16 + \underline{\quad} = 20$



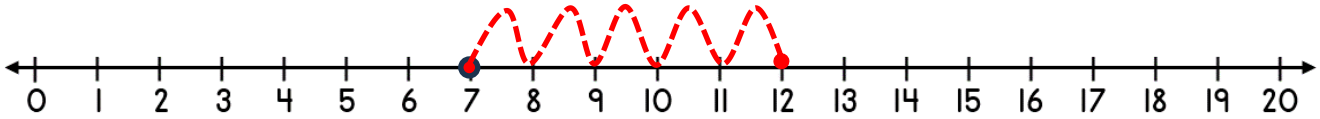
Name

Date

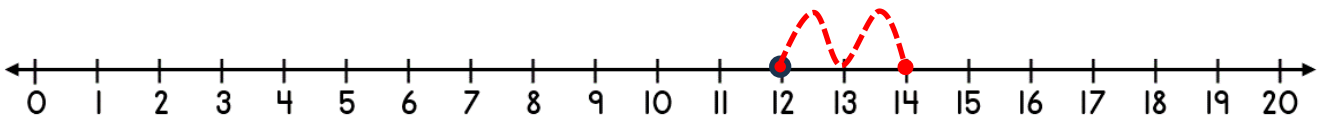


ADDING ON A NUMBER LINE WITHIN 20 SHEET 4A ANSWERS

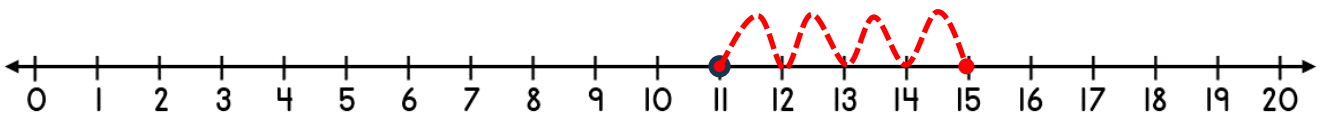
1) $7 + \underline{5} = 12$



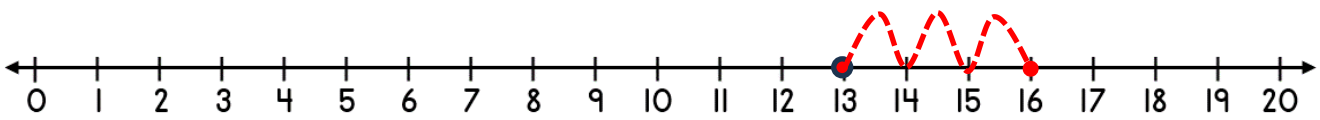
2) $12 + \underline{2} = 14$



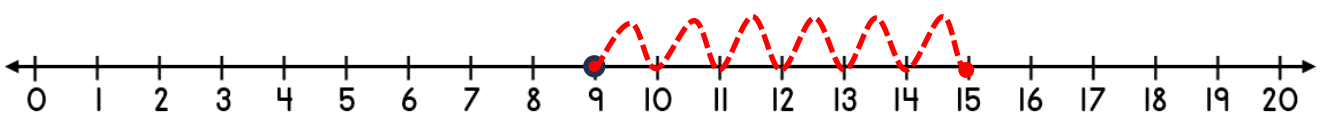
3) $11 + \underline{4} = 15$



4) $13 + \underline{3} = 16$



5) $9 + \underline{6} = 15$



6) $16 + \underline{4} = 20$

