

Name _____

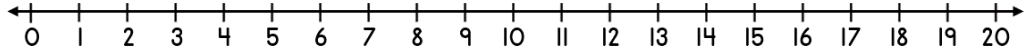
Date _____



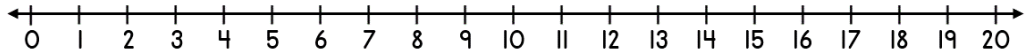
ADDING ON A NUMBER LINE WITHIN 20 SHEET 3B

Use the number lines to help you work out these addition facts.

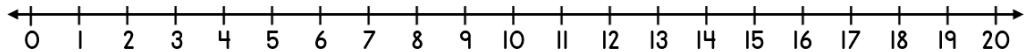
1) $16 + 3 =$ _____



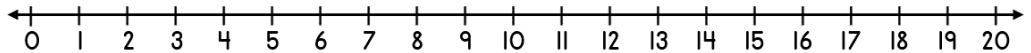
2) $8 + 5 =$ _____



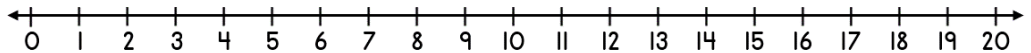
3) $12 + 4 =$ _____



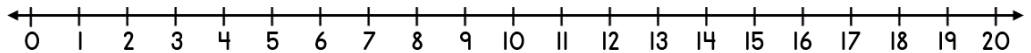
4) $9 + 6 =$ _____



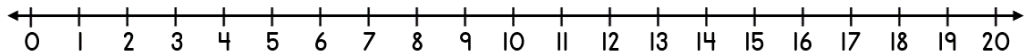
5) $15 + 4 =$ _____




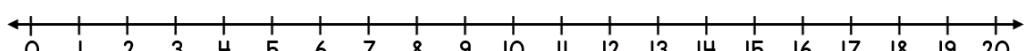
6) $11 + 7 =$ _____



7) $7 + 8 =$ _____



8) $14 + 6 =$ _____



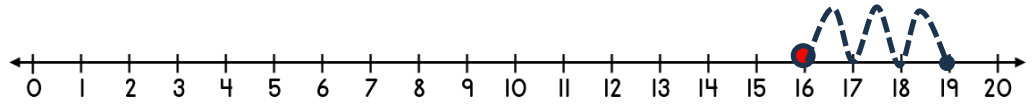
Name

Date

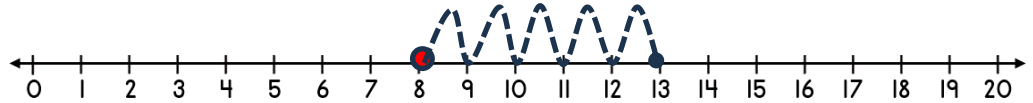


ADDING ON A NUMBER LINE WITHIN 20 SHEET 3B ANSWERS

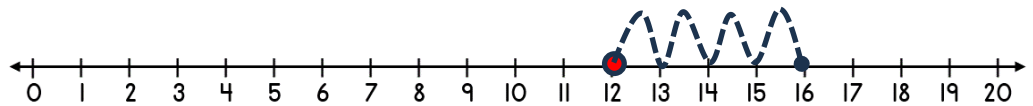
1) $16 + 3 = \underline{19}$



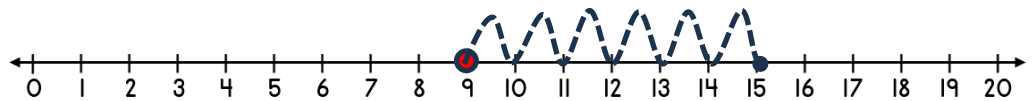
2) $8 + 5 = \underline{13}$



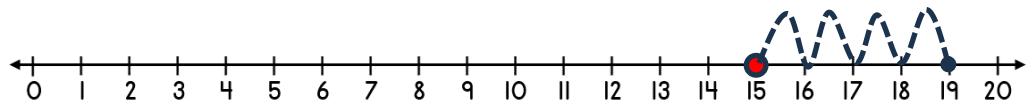
3) $12 + 4 = \underline{16}$



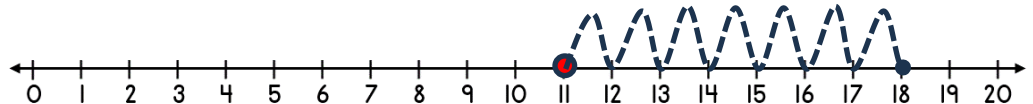
4) $9 + 6 = \underline{15}$



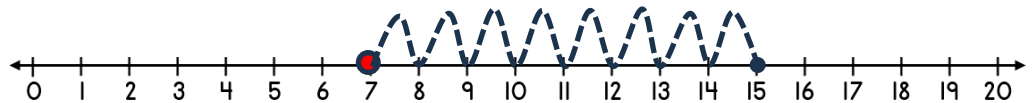
5) $15 + 4 = \underline{19}$



6) $11 + 7 = \underline{18}$



7) $7 + 8 = \underline{15}$



8) $14 + 6 = \underline{20}$

