

Name _____

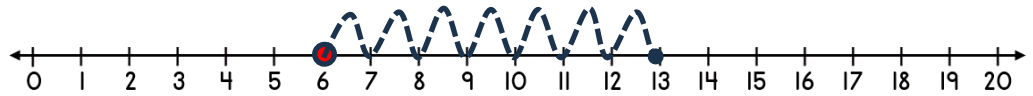
Date _____



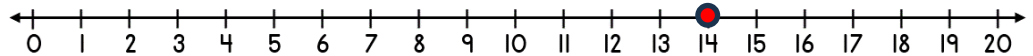
ADDING ON A NUMBER LINE WITHIN 20 SHEET 2A

Jump along the number line to find the answer.

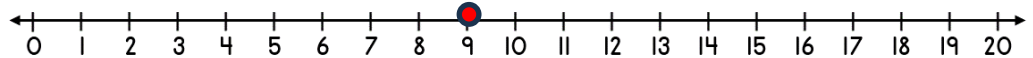
1) $6 + 7 =$ _____



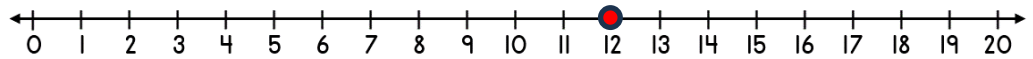
2) $14 + 4 =$ _____



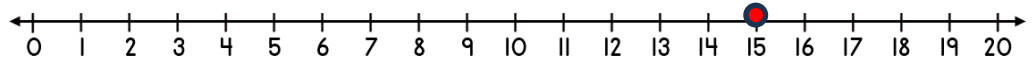
3) $9 + 5 =$ _____



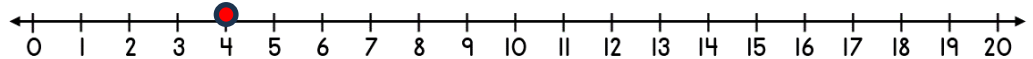
4) $12 + 3 =$ _____



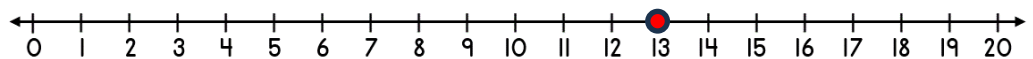
5) $15 + 5 =$ _____




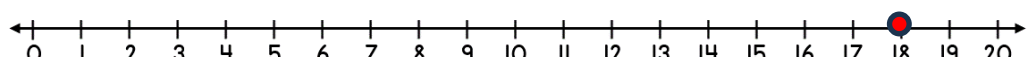
6) $4 + 8 =$ _____



7) $11 + 4 =$ _____



8) $18 + 2 =$ _____



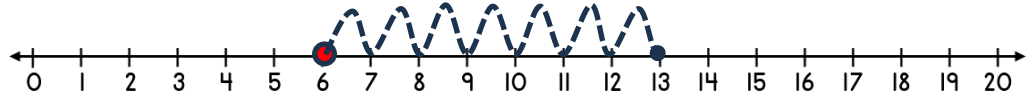
Name _____

Date _____

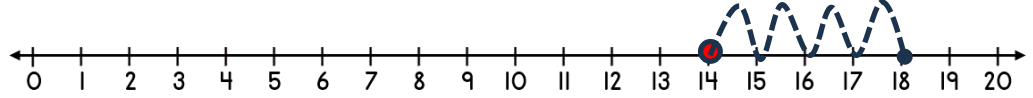


ADDING ON A NUMBER LINE WITHIN 20 SHEET 2A ANSWERS

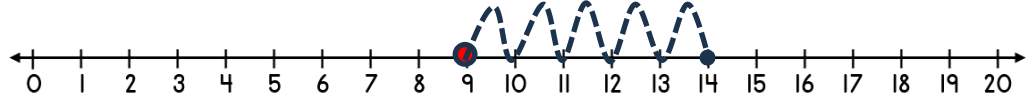
1) $6 + 7 = \underline{13}$



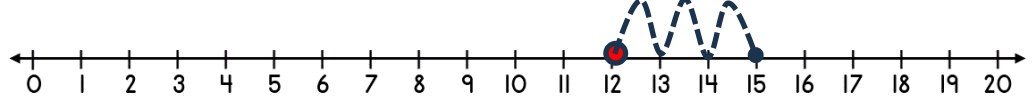
2) $14 + 4 = \underline{18}$



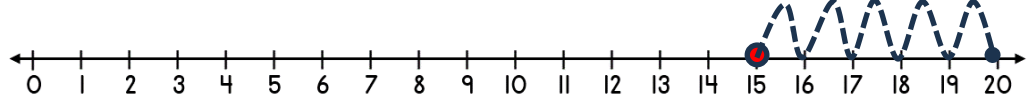
3) $9 + 5 = \underline{14}$



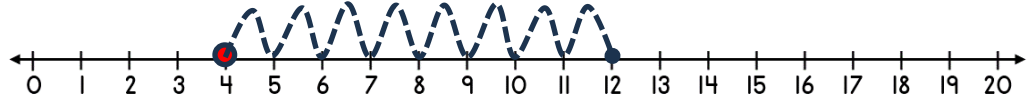
4) $12 + 3 = \underline{15}$



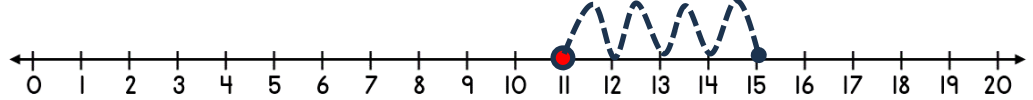
5) $15 + 5 = \underline{20}$



6) $4 + 8 = \underline{12}$



7) $11 + 4 = \underline{15}$



8) $18 + 2 = \underline{20}$

