


Name _____

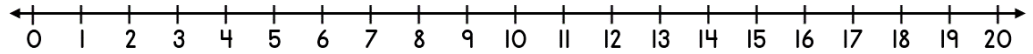
Date _____



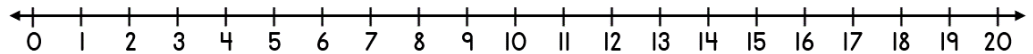
ADDING ON A NUMBER LINE WITHIN 20 SHEET 1B

Use the number lines to help you work out these addition facts.

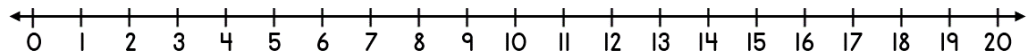
1) $7 + 4 =$ _____



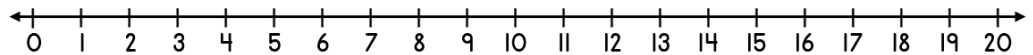
2) $12 + 3 =$ _____



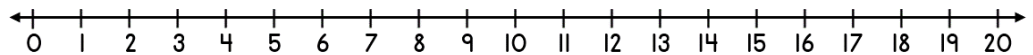
3) $11 + 2 =$ _____



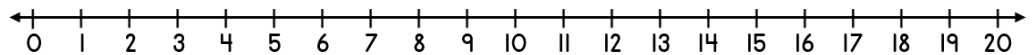
4) $16 + 1 =$ _____



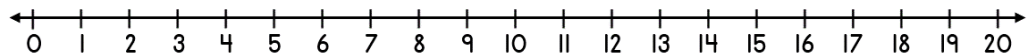
5) $9 + 2 =$ _____




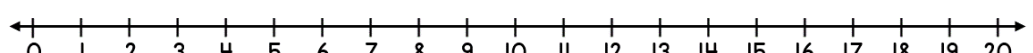
6) $7 + 5 =$ _____



7) $14 + 3 =$ _____



8) $17 + 2 =$ _____



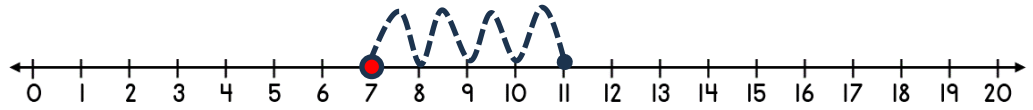
Name

Date

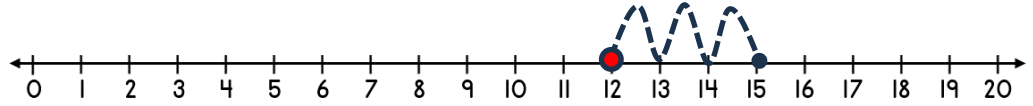


ADDING ON A NUMBER LINE WITHIN 20 SHEET 1B ANSWERS

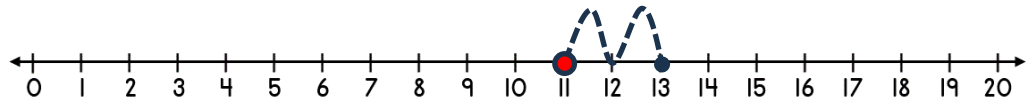
1) $7 + 4 = \underline{11}$



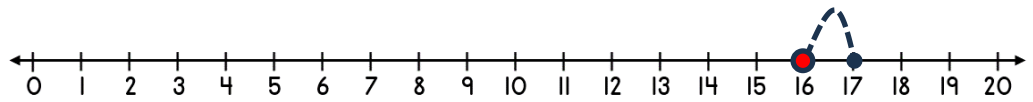
2) $12 + 3 = \underline{15}$



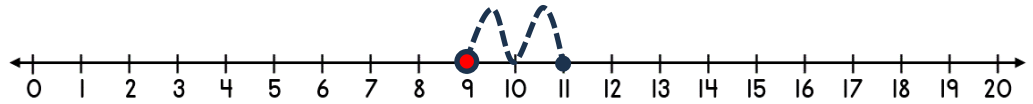
3) $11 + 2 = \underline{13}$



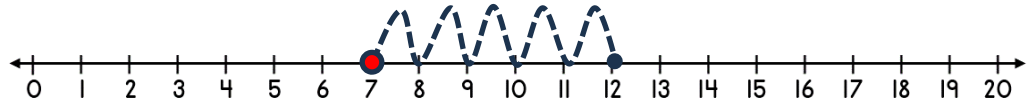
4) $16 + 1 = \underline{17}$



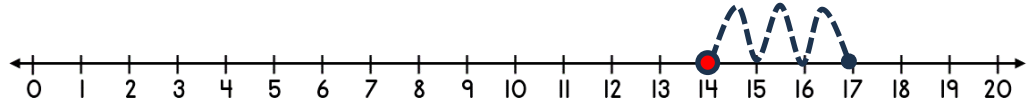
5) $9 + 2 = \underline{11}$



6) $7 + 5 = \underline{12}$



7) $14 + 3 = \underline{17}$



8) $17 + 2 = \underline{19}$

