


Name \_\_\_\_\_

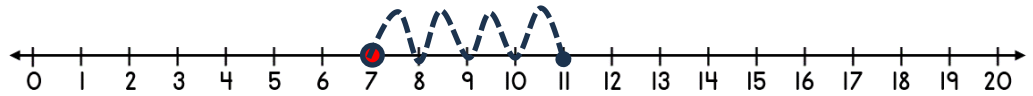
Date \_\_\_\_\_



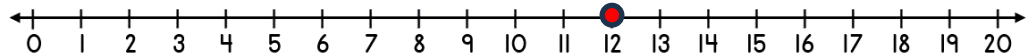
# ADDING ON A NUMBER LINE WITHIN 20 SHEET 1A

*Jump along the number line to find the answer.*

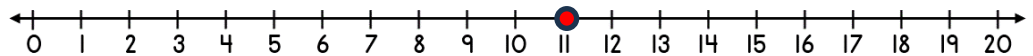
1)  $7 + 4 =$  \_\_\_\_\_



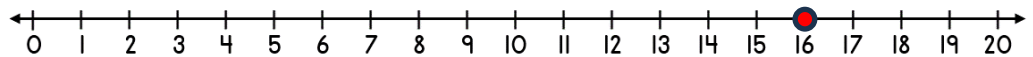
2)  $12 + 3 =$  \_\_\_\_\_



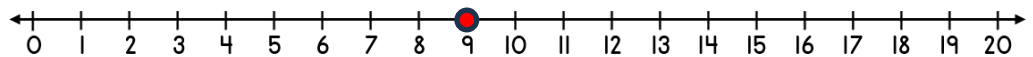
3)  $11 + 2 =$  \_\_\_\_\_



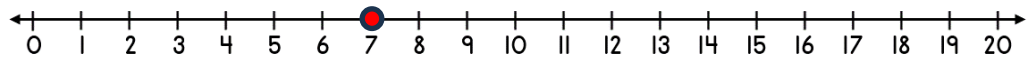
4)  $16 + 1 =$  \_\_\_\_\_



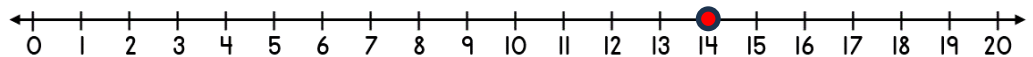
5)  $9 + 2 =$  \_\_\_\_\_




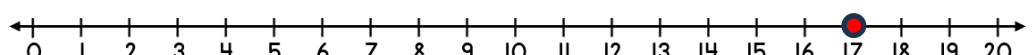
6)  $7 + 5 =$  \_\_\_\_\_



7)  $14 + 3 =$  \_\_\_\_\_



8)  $17 + 2 =$  \_\_\_\_\_



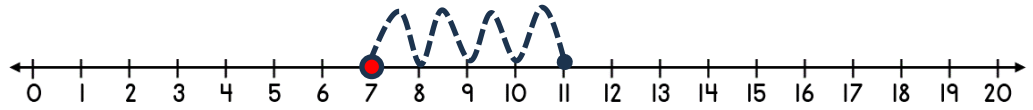
Name

Date

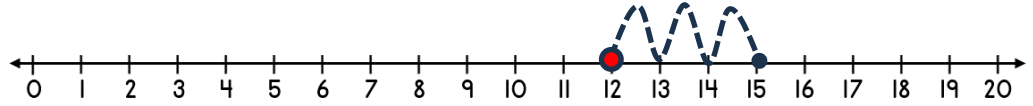


# ADDING ON A NUMBER LINE WITHIN 20 SHEET 1A ANSWERS

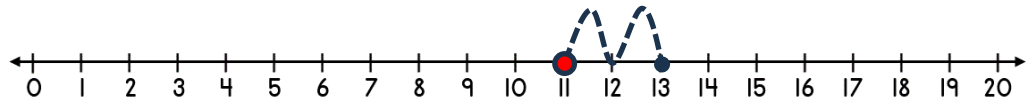
1)  $7 + 4 = \underline{11}$



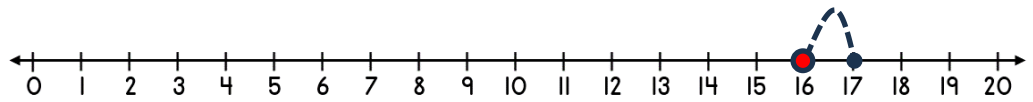
2)  $12 + 3 = \underline{15}$



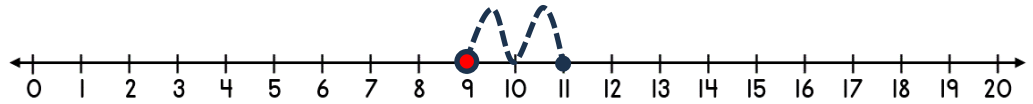
3)  $11 + 2 = \underline{13}$



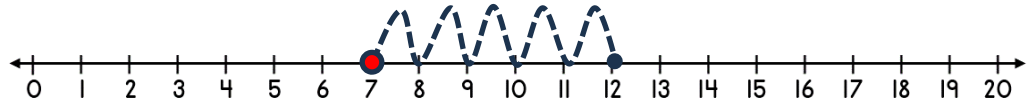
4)  $16 + 1 = \underline{17}$



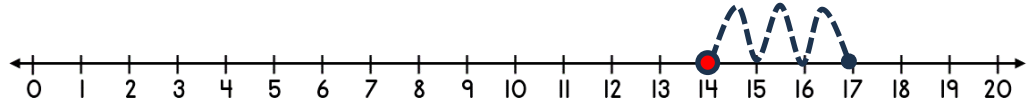
5)  $9 + 2 = \underline{11}$



6)  $7 + 5 = \underline{12}$



7)  $14 + 3 = \underline{17}$



8)  $17 + 2 = \underline{19}$

