


Name _____

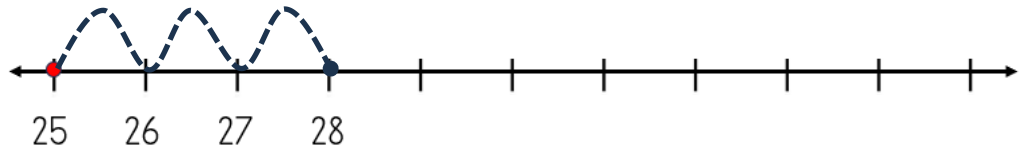
Date _____



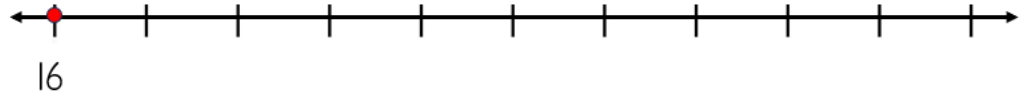
ADDING ON A NUMBER LINE WITHIN 100 SHEET 4B

Jump in ones from the starting number to the total to find out how many more.

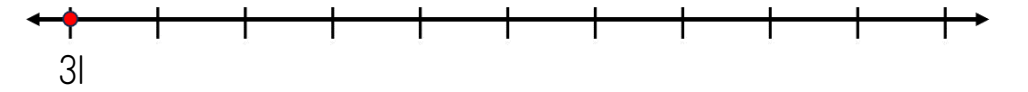
1) $25 + \underline{\quad} = 28$



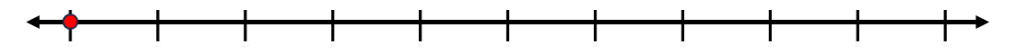
2) $16 + \underline{\quad} = 21$



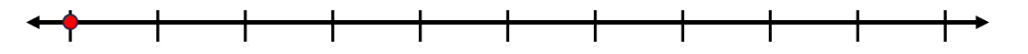
3) $31 + \underline{\quad} = 35$



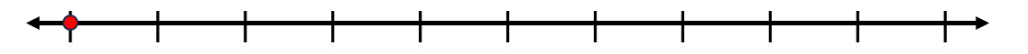
4) $46 + \underline{\quad} = 52$



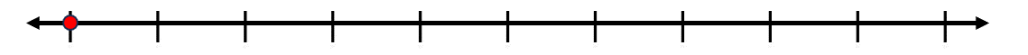
5) $52 + \underline{\quad} = 54$




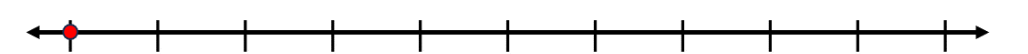
6) $61 + \underline{\quad} = 68$



7) $19 + \underline{\quad} = 24$



8) $27 + \underline{\quad} = 33$



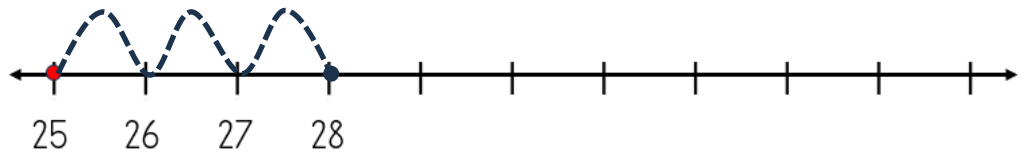
Name

Date

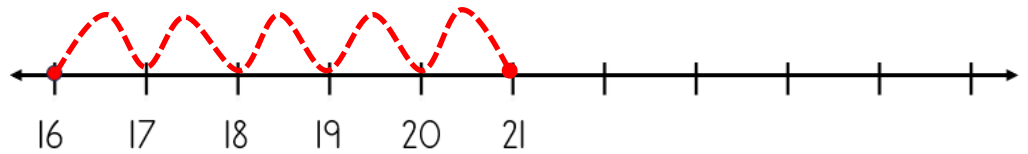


ADDING ON A NUMBER LINE WITHIN 100 SHEET 4B ANSWERS

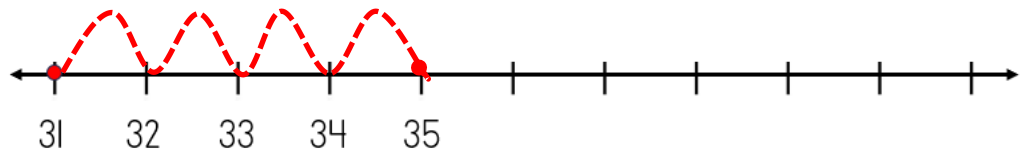
1) $25 + \underline{3} = 28$



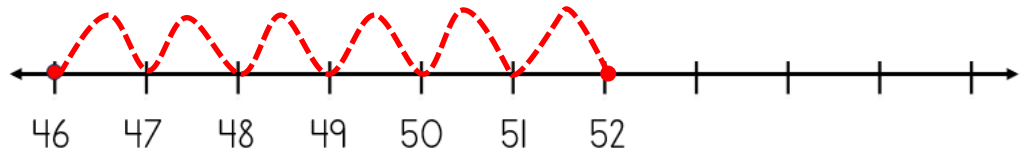
2) $16 + \underline{5} = 21$



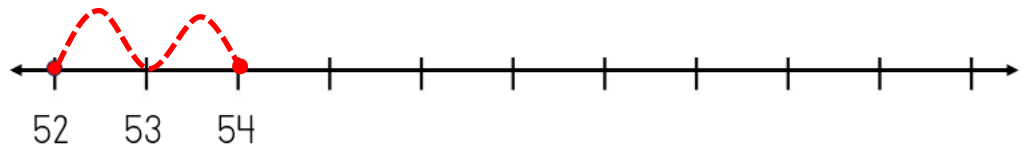
3) $31 + \underline{4} = 35$



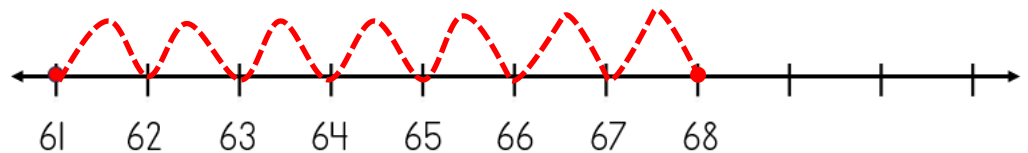
4) $46 + \underline{6} = 52$



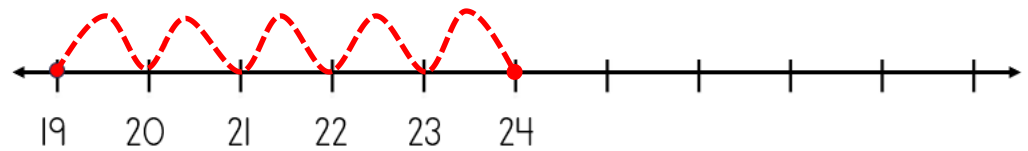
5) $52 + \underline{2} = 54$



6) $61 + \underline{7} = 68$



7) $19 + \underline{5} = 24$



8) $27 + \underline{6} = 33$

