


Name _____

Date _____



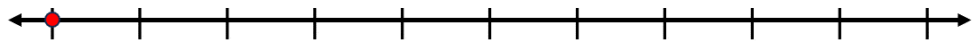
ADDING ON A NUMBER LINE WITHIN 100 SHEET 3B

Use the number lines to help you work out these addition facts.

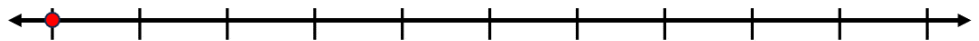
1) $58 + 3 = \underline{\quad}$



2) $29 + 6 = \underline{\quad}$



3) $91 + 4 = \underline{\quad}$



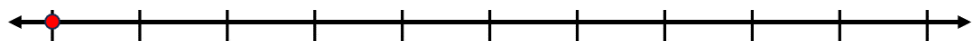
4) $36 + 7 = \underline{\quad}$



5) $43 + 8 = \underline{\quad}$




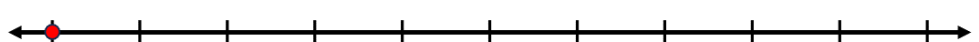
6) $79 + 2 = \underline{\quad}$



7) $52 + 6 = \underline{\quad}$



8) $64 + 9 = \underline{\quad}$



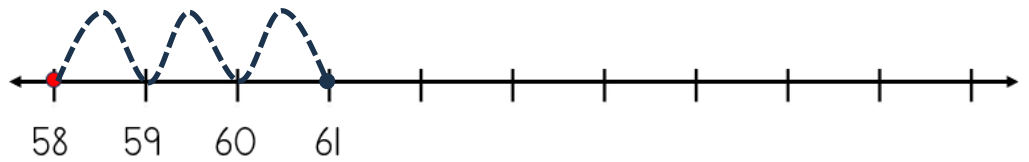
Name

Date

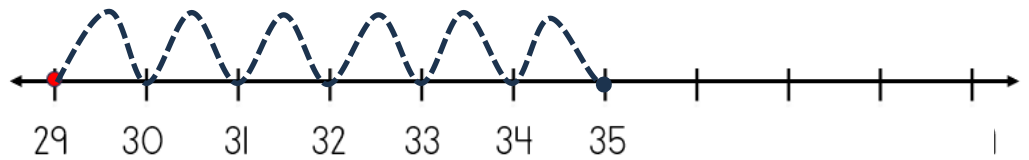


ADDING ON A NUMBER LINE WITHIN 100 SHEET 3B ANSWERS

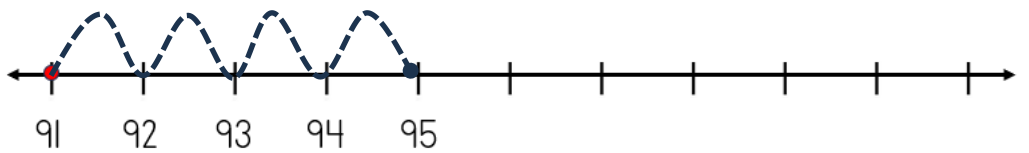
1) $58 + 3 = \underline{61}$



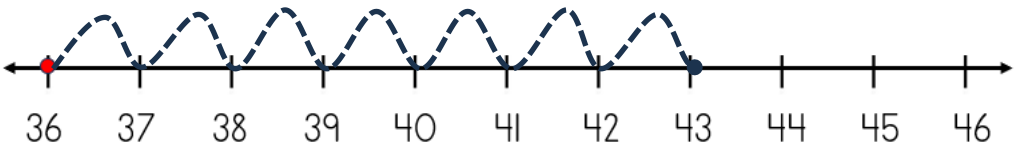
2) $29 + 6 = \underline{35}$



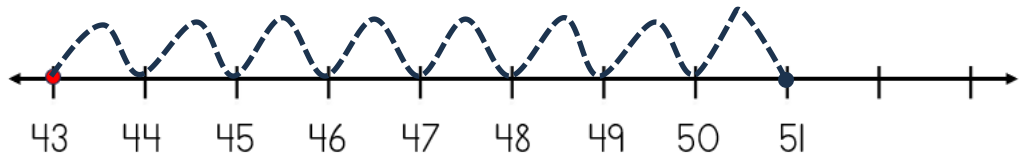
3) $91 + 4 = \underline{95}$



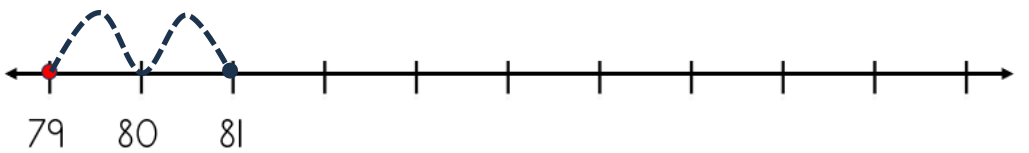
4) $36 + 7 = \underline{43}$



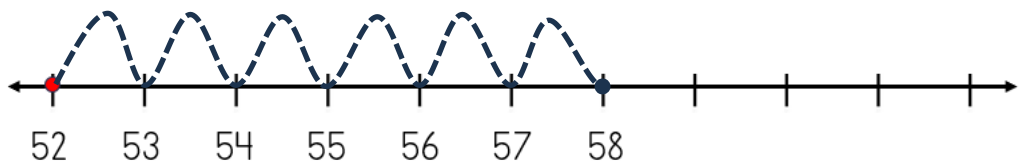
5) $43 + 8 = \underline{51}$



6) $79 + 2 = \underline{81}$



7) $52 + 6 = \underline{58}$



8) $64 + 9 = \underline{73}$

