


Name _____

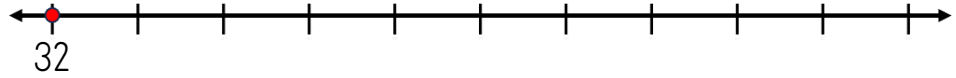
Date _____



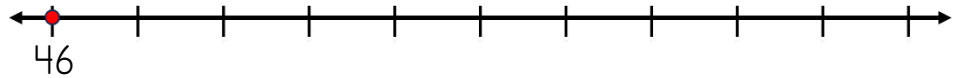
ADDING ON A NUMBER LINE WITHIN 100 SHEET 2B

Use the number lines to help you work out these addition facts.

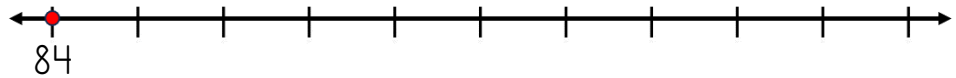
1) $32 + 6 = \underline{\quad}$



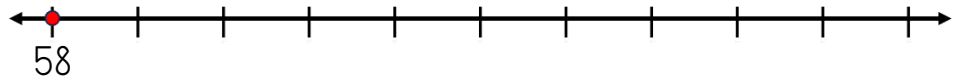
2) $46 + 5 = \underline{\quad}$



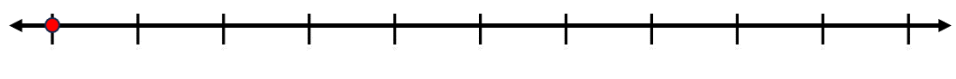
3) $84 + 3 = \underline{\quad}$



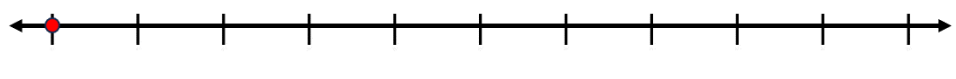
4) $58 + 4 = \underline{\quad}$



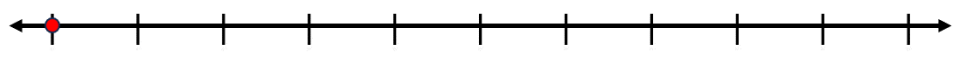
5) $79 + 2 = \underline{\quad}$




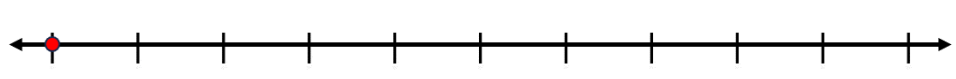
6) $37 + 5 = \underline{\quad}$



7) $88 + 7 = \underline{\quad}$



8) $64 + 6 = \underline{\quad}$



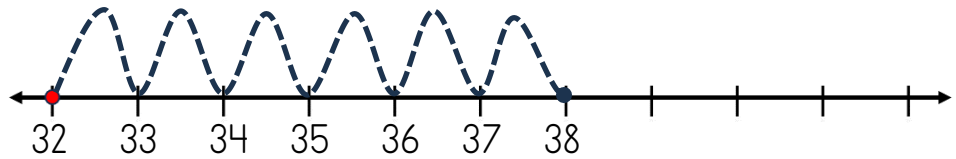
Name

Date

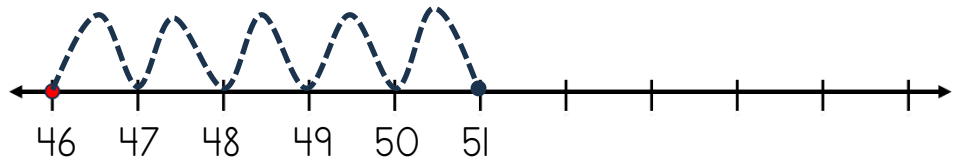


ADDING ON A NUMBER LINE WITHIN 100 SHEET 2B ANSWERS

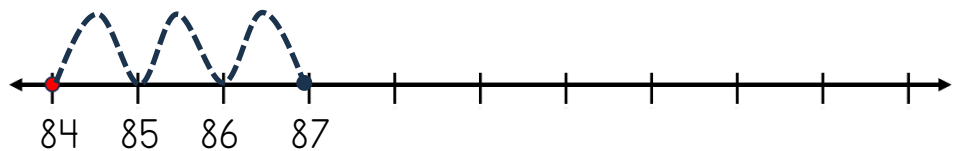
1) $32 + 6 = \underline{38}$



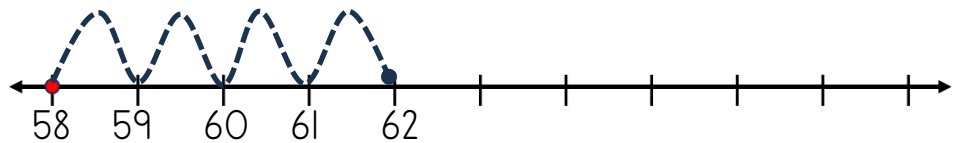
2) $46 + 5 = \underline{51}$



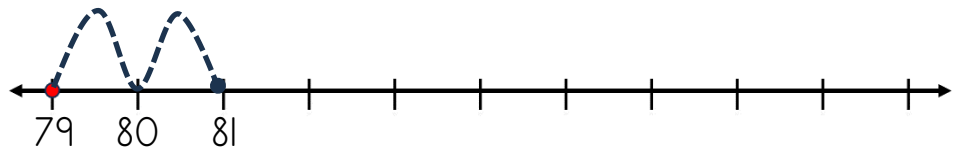
3) $84 + 3 = \underline{87}$



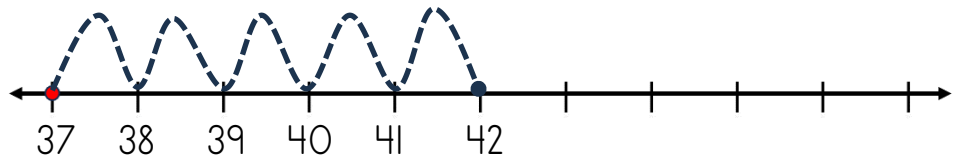
4) $58 + 4 = \underline{62}$



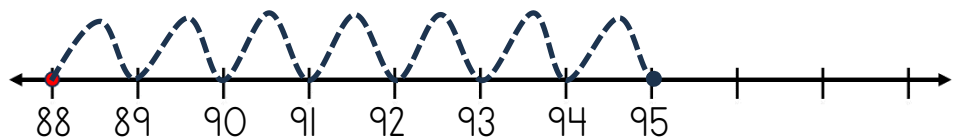
5) $79 + 2 = \underline{81}$



6) $37 + 5 = \underline{42}$



7) $88 + 7 = \underline{95}$



8) $64 + 6 = \underline{70}$

