


Name _____

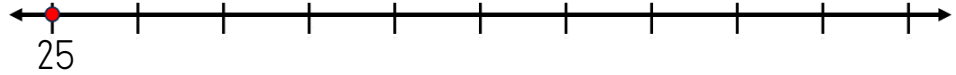
Date _____



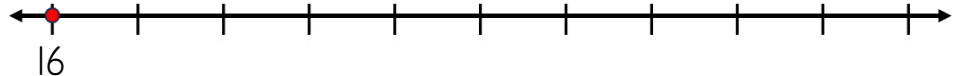
ADDING ON A NUMBER LINE WITHIN 100 SHEET 1B

Use the number lines to help you work out these addition facts.

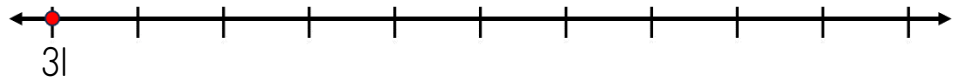
1) $25 + 3 = \underline{\quad}$



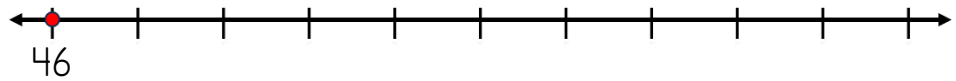
2) $16 + 5 = \underline{\quad}$



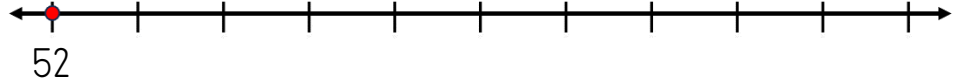
3) $31 + 3 = \underline{\quad}$



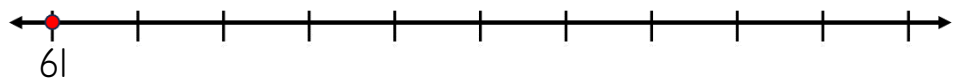
4) $46 + 1 = \underline{\quad}$



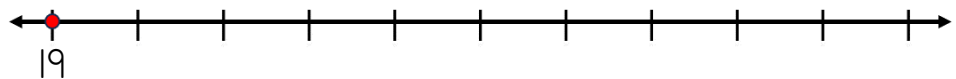
5) $52 + 2 = \underline{\quad}$




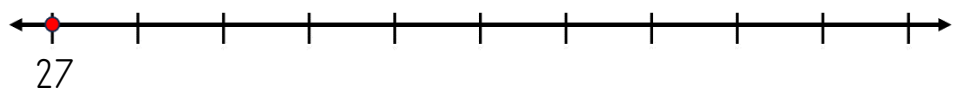
6) $61 + 5 = \underline{\quad}$



7) $19 + 4 = \underline{\quad}$



8) $27 + 3 = \underline{\quad}$



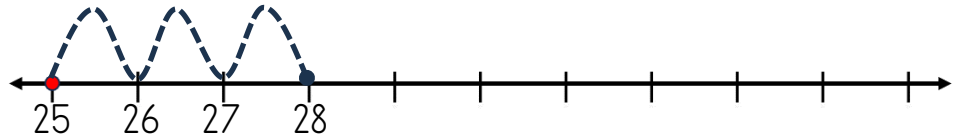
Name

Date

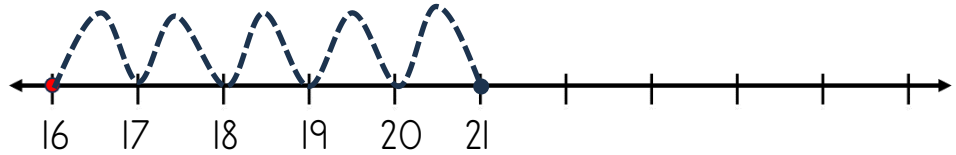


ADDING ON A NUMBER LINE WITHIN 100 SHEET 1B ANSWERS

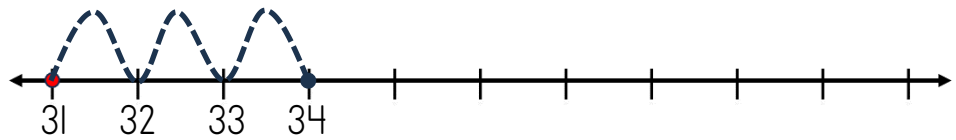
1) $25 + 3 = \underline{28}$



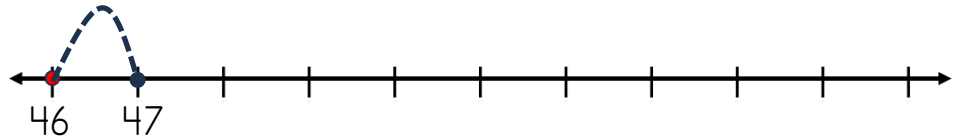
2) $16 + 5 = \underline{21}$



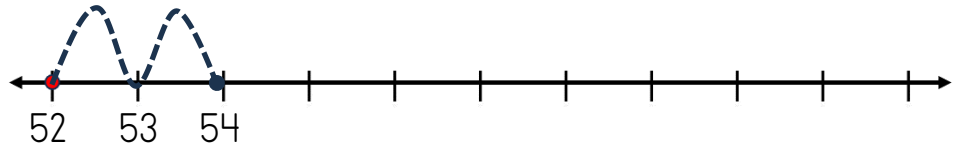
3) $31 + 3 = \underline{34}$



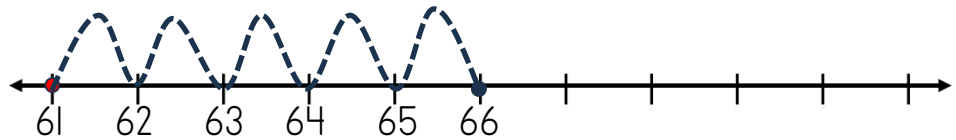
4) $46 + 1 = \underline{47}$



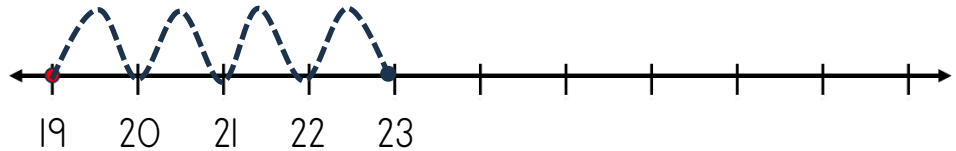
5) $52 + 2 = \underline{54}$



6) $61 + 5 = \underline{66}$



7) $19 + 4 = \underline{23}$



8) $27 + 3 = \underline{30}$

