

Name \_\_\_\_\_

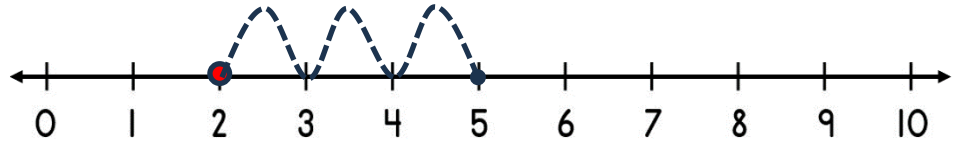
Date \_\_\_\_\_



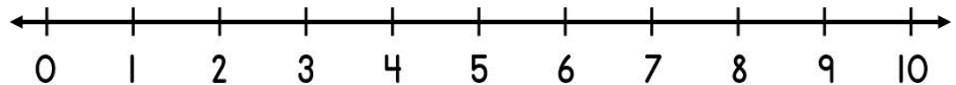
## ADDING ON A NUMBER LINE WITHIN 10 SHEET 4B

*Jump in ones from the starting number to the total to find out how many more.*

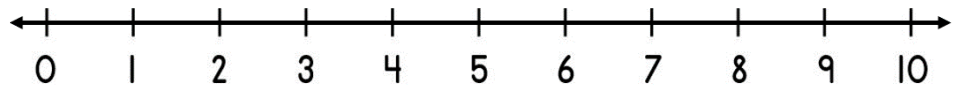
1)  $2 + \underline{\quad} = 5$



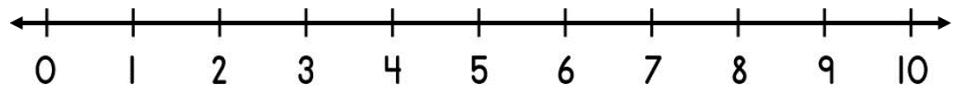
2)  $4 + \underline{\quad} = 6$



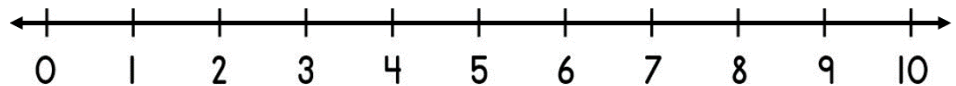
3)  $6 + \underline{\quad} = 7$



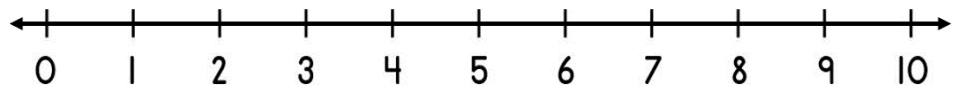
4)  $5 + \underline{\quad} = 8$



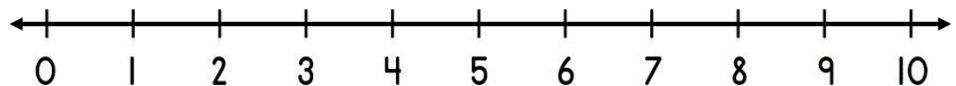
5)  $1 + \underline{\quad} = 5$




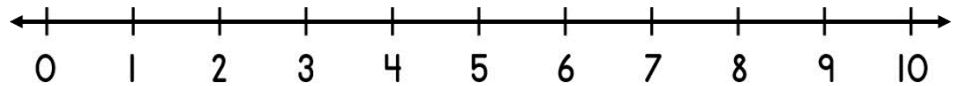
6)  $8 + \underline{\quad} = 10$



7)  $3 + \underline{\quad} = 7$



8)  $4 + \underline{\quad} = 9$



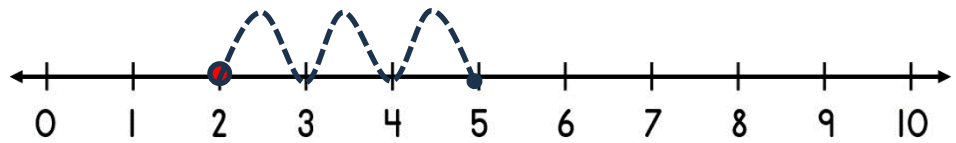
Name

Date

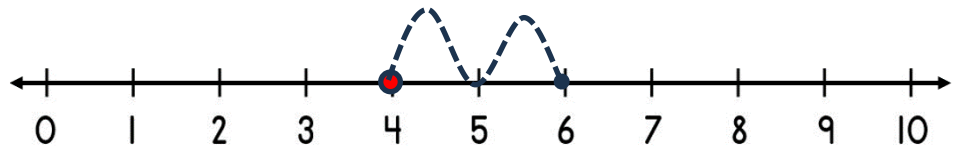


# ADDING ON A NUMBER LINE WITHIN 10 SHEET 4B ANSWERS

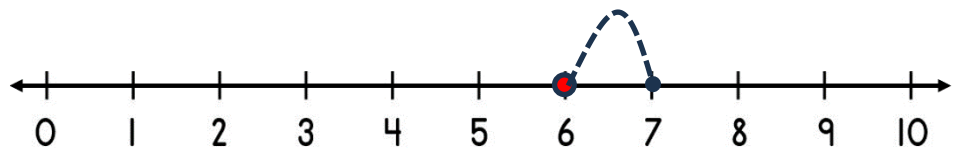
1)  $2 + \underline{3} = 5$



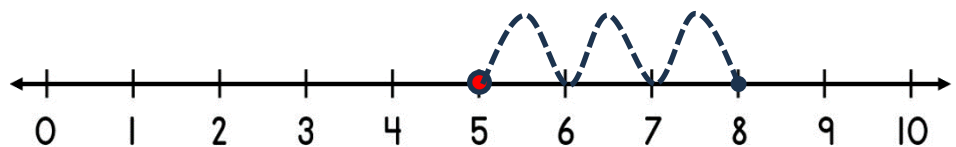
2)  $4 + \underline{2} = 6$



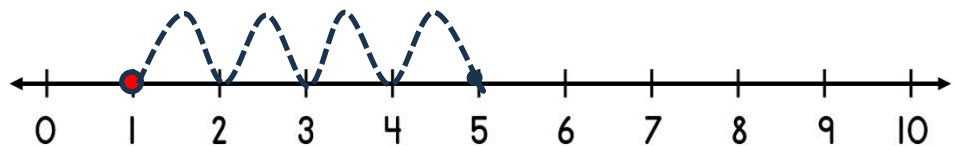
3)  $6 + \underline{1} = 7$



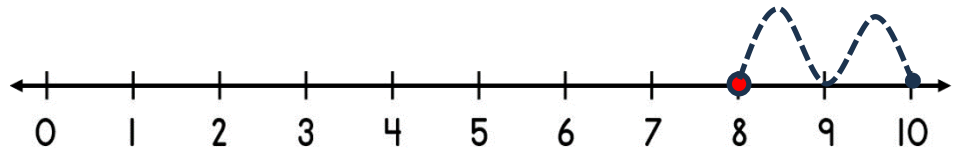
4)  $5 + \underline{3} = 8$



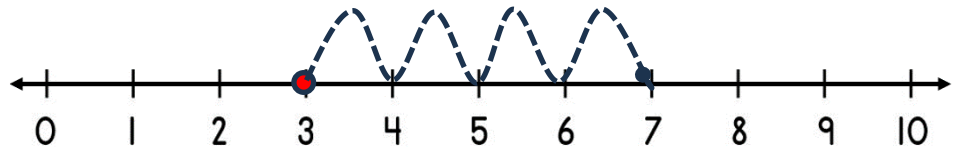
5)  $1 + \underline{4} = 5$



6)  $8 + \underline{2} = 10$



7)  $3 + \underline{4} = 7$



8)  $4 + \underline{5} = 9$

