


Name _____

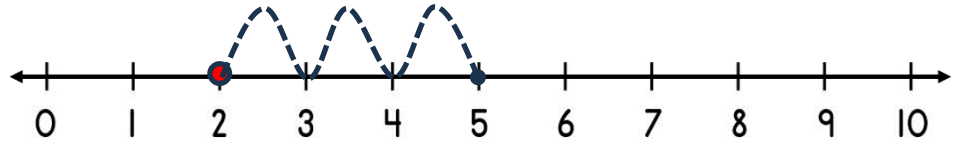
Date _____



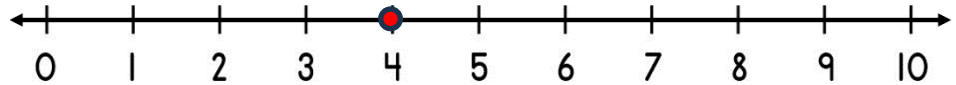
ADDING ON A NUMBER LINE WITHIN 10 SHEET 4A

Jump in ones from the starting number to the total to find out how many more.

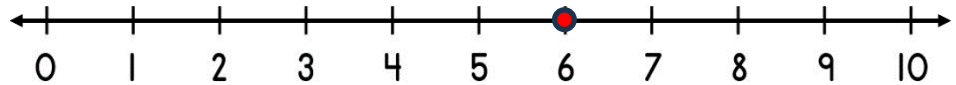
1) $2 + \underline{\quad} = 5$



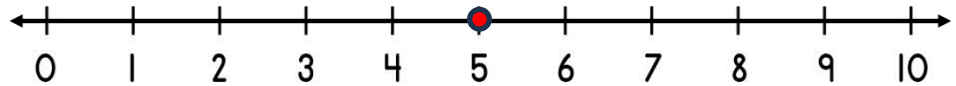
2) $4 + \underline{\quad} = 6$



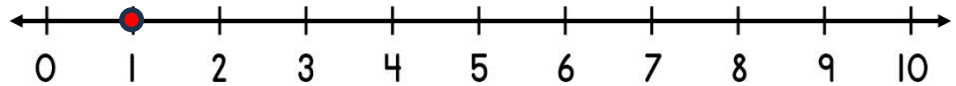
3) $6 + \underline{\quad} = 7$



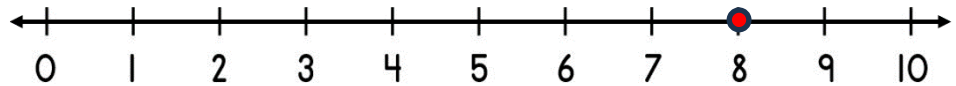
4) $5 + \underline{\quad} = 8$



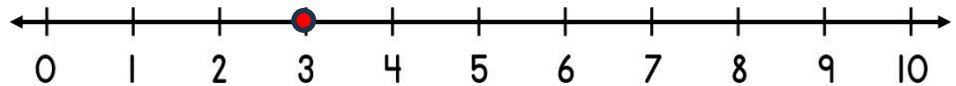
5) $1 + \underline{\quad} = 5$




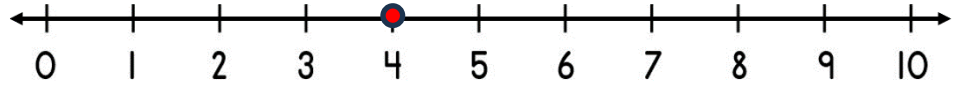
6) $8 + \underline{\quad} = 10$



7) $3 + \underline{\quad} = 7$



8) $4 + \underline{\quad} = 9$



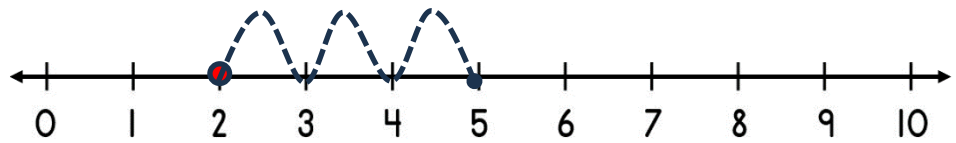
Name

Date

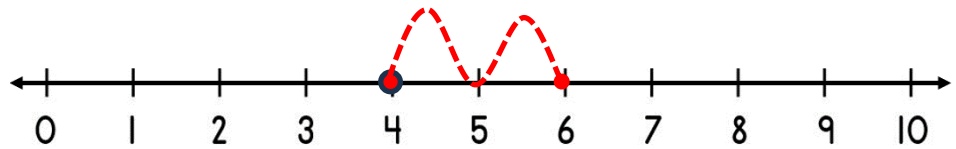


ADDING ON A NUMBER LINE WITHIN 10 SHEET 4A ANSWERS

1) $2 + \underline{3} = 5$



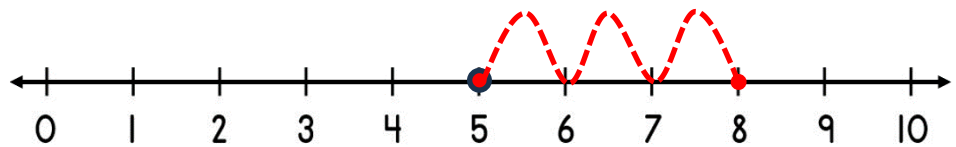
2) $4 + \underline{2} = 6$



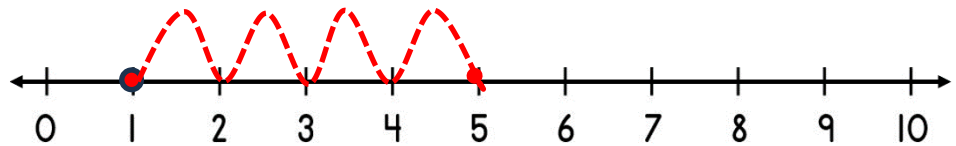
3) $6 + \underline{1} = 7$



4) $5 + \underline{3} = 8$



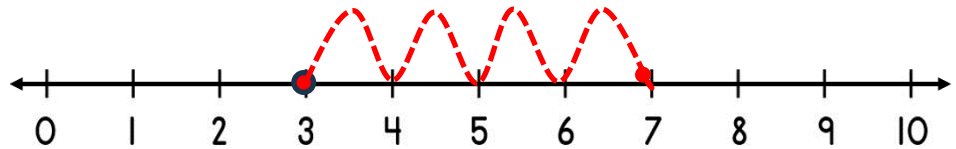
5) $1 + \underline{4} = 5$



6) $8 + \underline{2} = 10$



7) $3 + \underline{4} = 7$



8) $4 + \underline{5} = 9$

