

Name _____

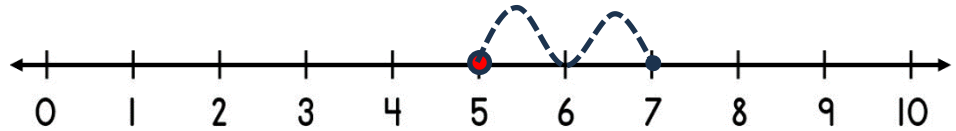
Date _____



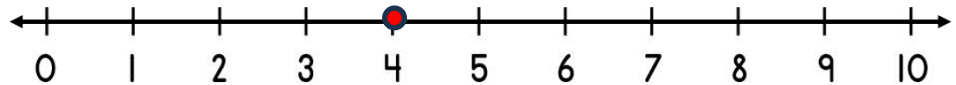
ADDING ON A NUMBER LINE WITHIN 10 SHEET 3A

Jump along the number line to find the answer.

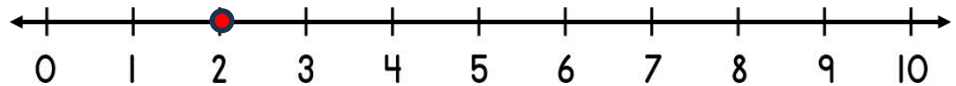
1) $5 + 2 =$ _____



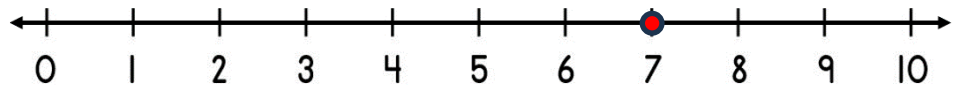
2) $4 + 3 =$ _____



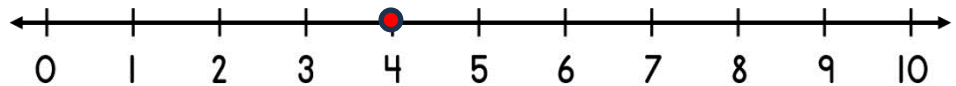
3) $2 + 6 =$ _____



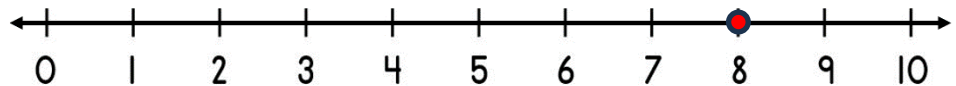
4) $7 + 3 =$ _____



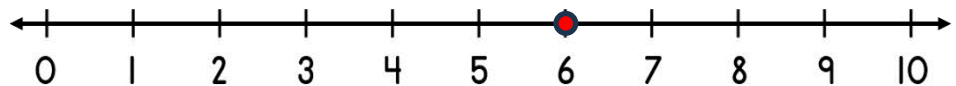
5) $4 + 5 =$ _____




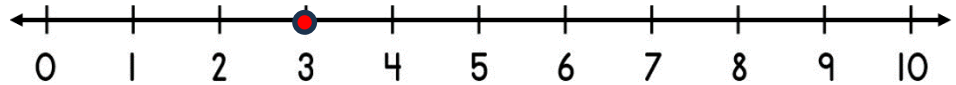
6) $8 + 1 =$ _____



7) $6 + 4 =$ _____




8) $3 + 6 =$ _____



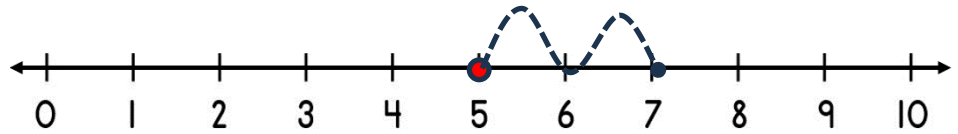
Name

Date

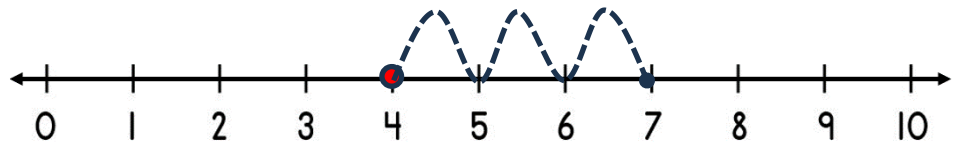


ADDING ON A NUMBER LINE WITHIN 10 SHEET 3A ANSWERS

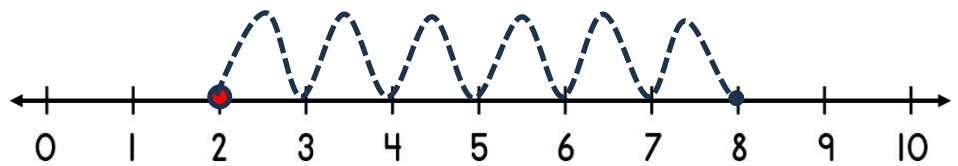
1) $5 + 2 = \underline{7}$



2) $4 + 3 = \underline{7}$



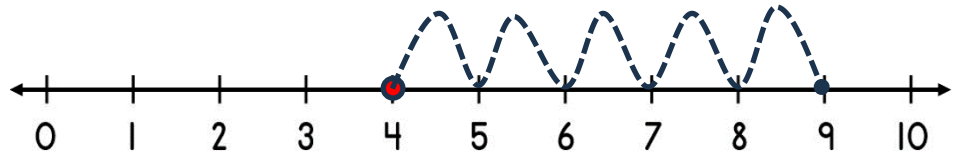
3) $2 + 6 = \underline{8}$



4) $7 + 3 = \underline{10}$



5) $4 + 5 = \underline{9}$



6) $8 + 1 = \underline{9}$



7) $6 + 4 = \underline{10}$



8) $3 + 6 = \underline{9}$

