


Name _____

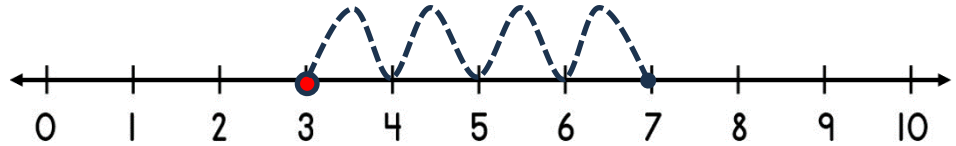
Date _____



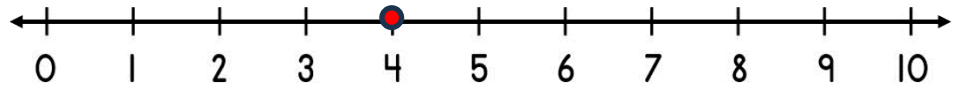
ADDING ON A NUMBER LINE WITHIN 10 SHEET 2A

Jump along the number line to find the answer.

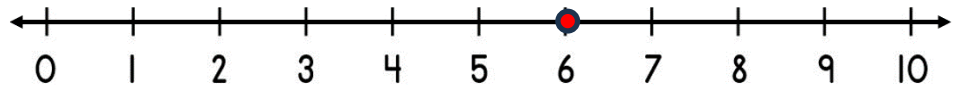
1) $3 + 4 =$ _____



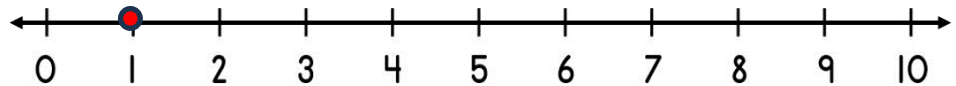
2) $4 + 2 =$ _____



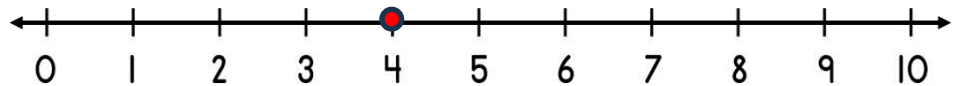
3) $6 + 3 =$ _____



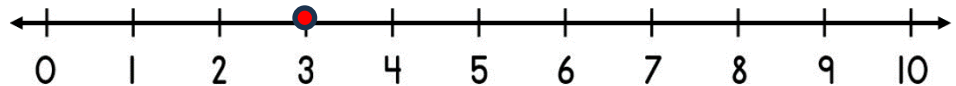
4) $1 + 5 =$ _____



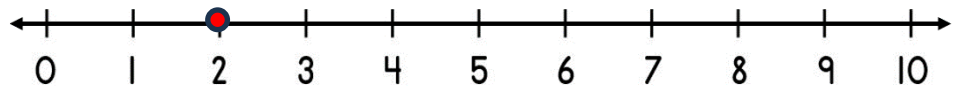
5) $4 + 4 =$ _____




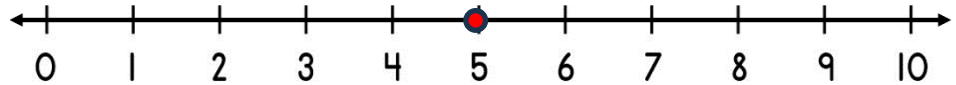
6) $3 + 5 =$ _____



7) $2 + 7 =$ _____



8) $5 + 5 =$ _____



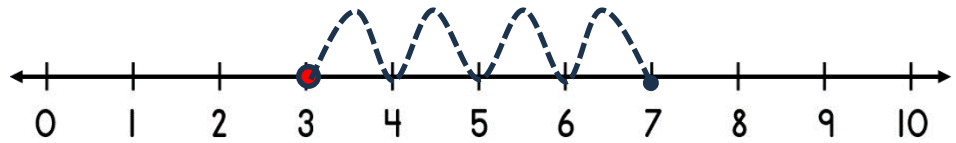
Name

Date

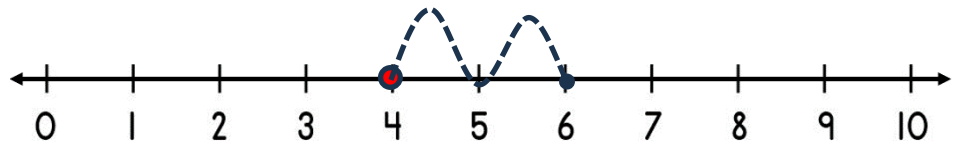


ADDING ON A NUMBER LINE WITHIN 10 SHEET 2A ANSWERS

1) $3 + 4 = \underline{7}$



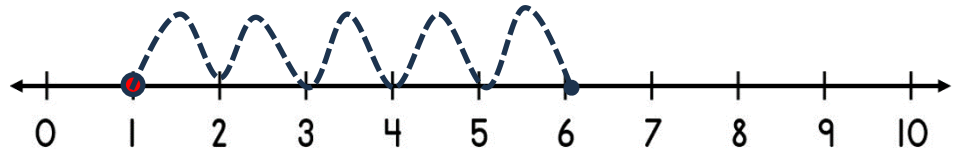
2) $4 + 2 = \underline{6}$



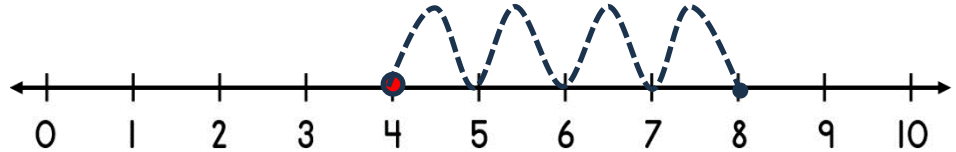
3) $6 + 3 = \underline{9}$



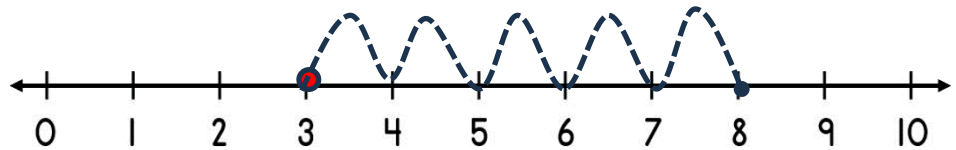
4) $1 + 5 = \underline{6}$



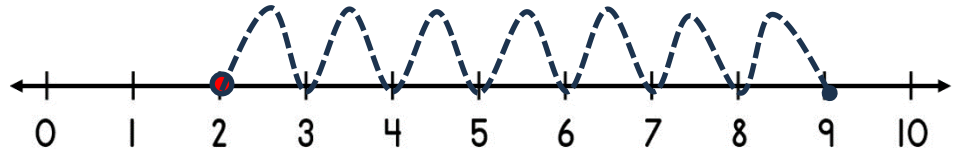
5) $4 + 4 = \underline{8}$



6) $3 + 5 = \underline{8}$



7) $2 + 7 = \underline{9}$



8) $5 + 5 = \underline{10}$

