

Name \_\_\_\_\_

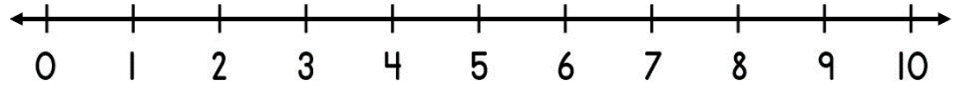
Date \_\_\_\_\_



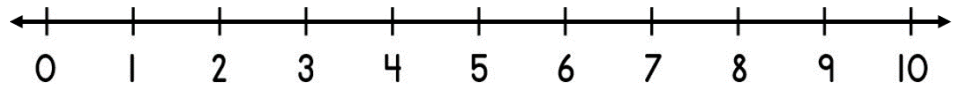
# ADDING ON A NUMBER LINE WITHIN 10 SHEET 1B

Use the number lines to help you work out these addition facts.

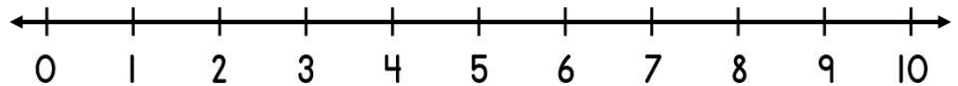
1)  $5 + 2 =$  \_\_\_\_\_



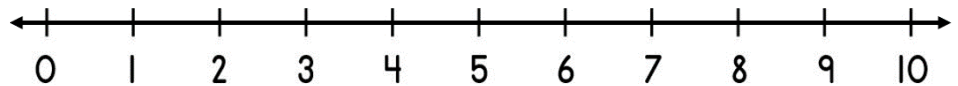
2)  $2 + 3 =$  \_\_\_\_\_



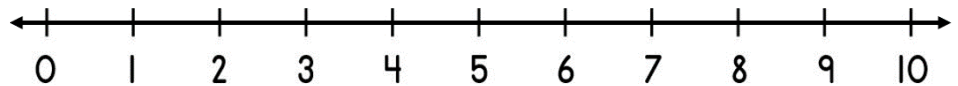
3)  $3 + 3 =$  \_\_\_\_\_



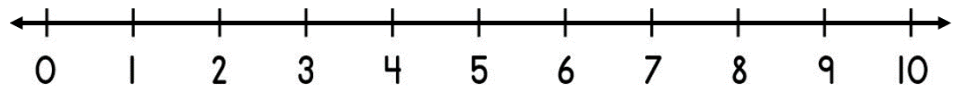
4)  $6 + 1 =$  \_\_\_\_\_



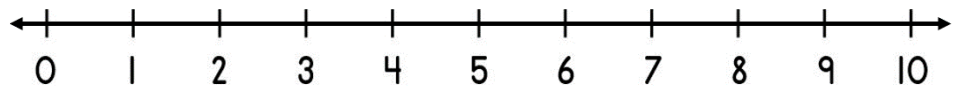
5)  $5 + 3 =$  \_\_\_\_\_




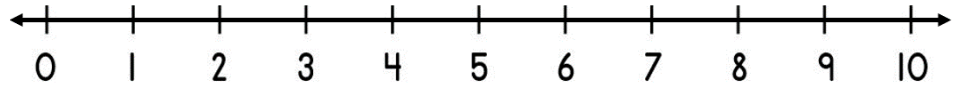
6)  $2 + 5 =$  \_\_\_\_\_



7)  $6 + 4 =$  \_\_\_\_\_




8)  $7 + 2 =$  \_\_\_\_\_



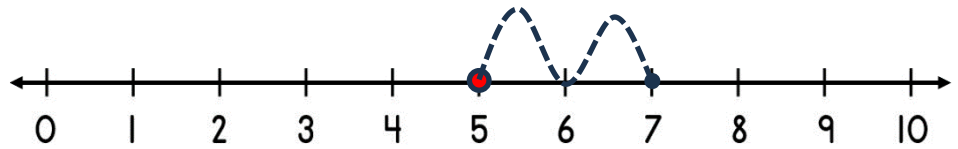
Name

Date

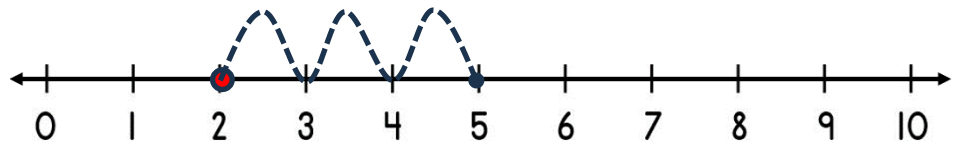


# ADDING ON A NUMBER LINE WITHIN 10 SHEET 1B ANSWERS

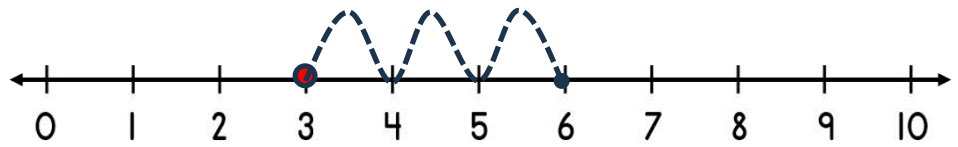
1)  $5 + 2 = \underline{7}$



2)  $2 + 3 = \underline{5}$



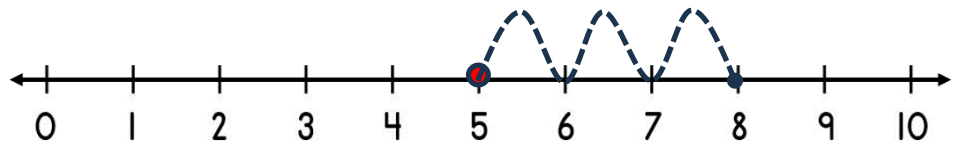
3)  $3 + 3 = \underline{6}$



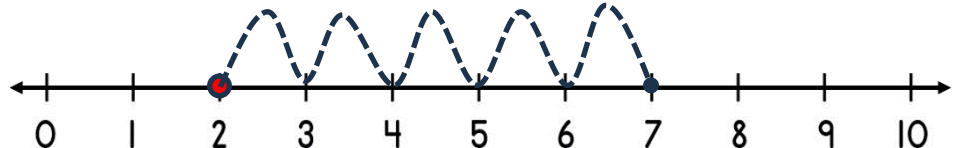
4)  $6 + 1 = \underline{7}$



5)  $5 + 3 = \underline{8}$



6)  $2 + 5 = \underline{7}$



7)  $6 + 4 = \underline{10}$



8)  $7 + 2 = \underline{9}$

