

Name \_\_\_\_\_

Date \_\_\_\_\_

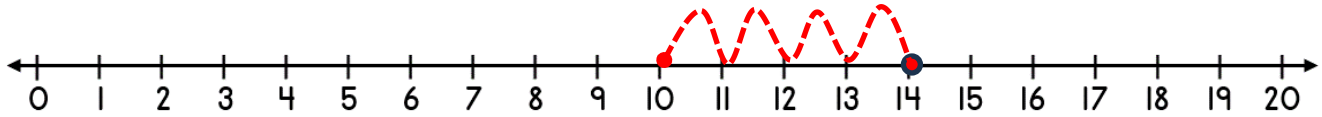


# NUMBER LINE ADDITION & SUBTRACTION WITHIN 20

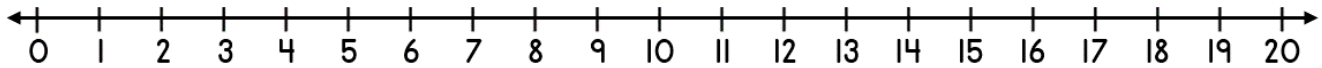
## SHEET 4B

*Jump on or back in ones from the starting number to find the missing addend or subtrahend.*

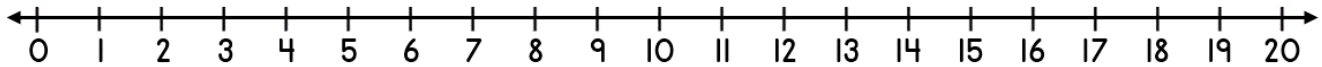
1)  $14 - \underline{\quad} = 10$



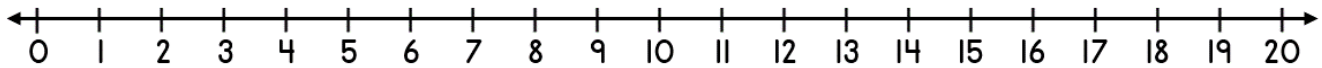
2)  $12 + \underline{\quad} = 18$



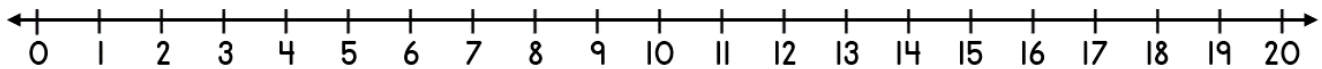
3)  $13 - \underline{\quad} = 6$




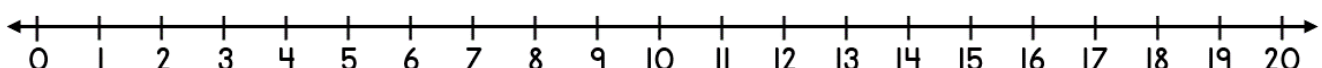
4)  $9 + \underline{\quad} = 14$



5)  $20 - \underline{\quad} = 14$



6)  $12 + \underline{\quad} = 20$



Name

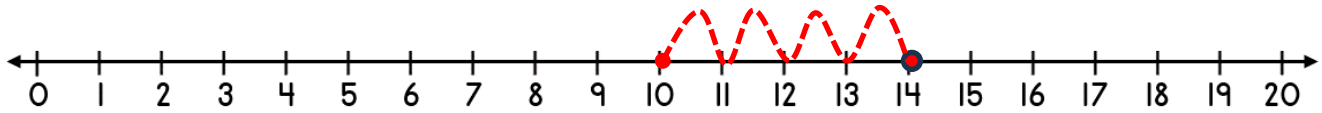
Date



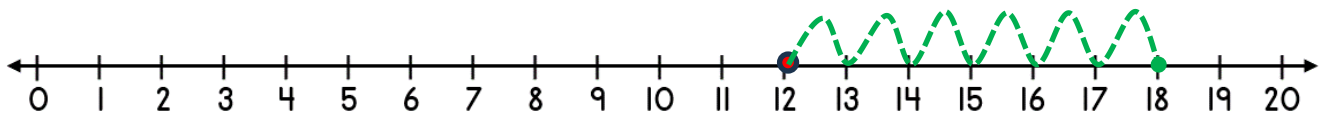
# NUMBER LINE ADDITION & SUBTRACTION WITHIN 20

## SHEET 4B ANSWERS

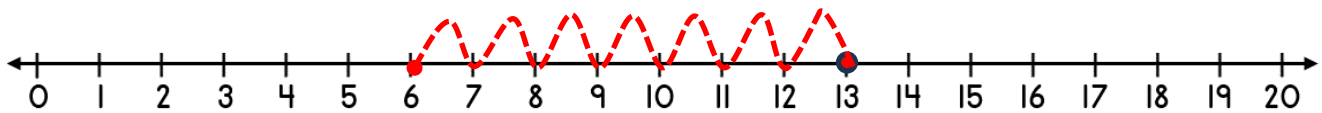
1)  $14 - \underline{4} = 10$



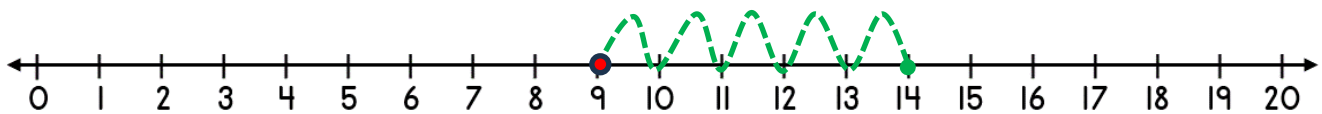
2)  $12 + \underline{6} = 18$



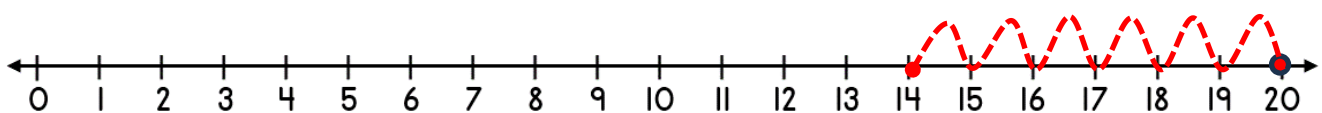
3)  $13 - \underline{7} = 6$



4)  $9 + \underline{5} = 14$



5)  $20 - \underline{6} = 14$



6)  $12 + \underline{8} = 20$

