

Name _____

Date _____

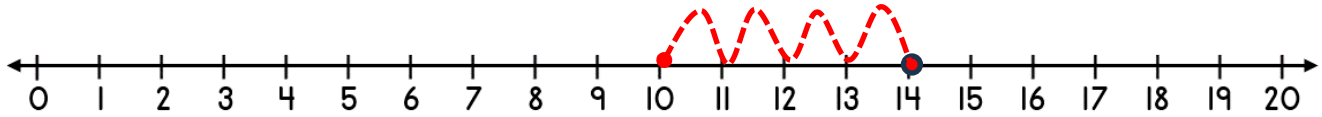


NUMBER LINE ADDITION & SUBTRACTION WITHIN 20

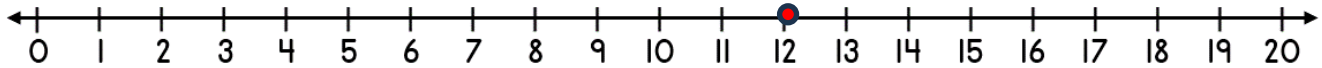
SHEET 4A

Jump on or back in ones from the starting number to find the missing addend or subtrahend.

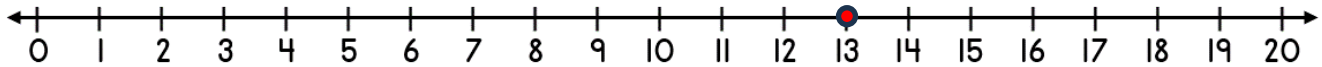
1) $14 - \underline{\quad} = 10$



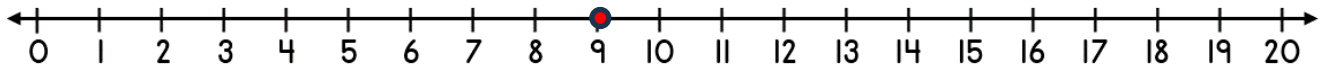
2) $12 + \underline{\quad} = 18$



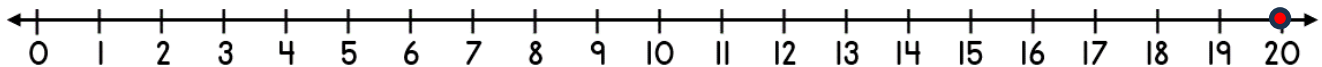
3) $13 - \underline{\quad} = 6$




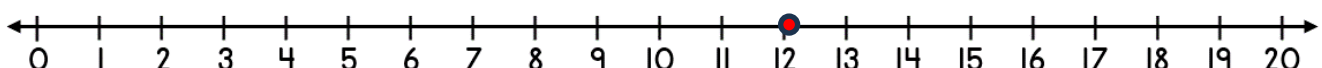
4) $9 + \underline{\quad} = 14$



5) $20 - \underline{\quad} = 14$




6) $12 + \underline{\quad} = 20$



Name

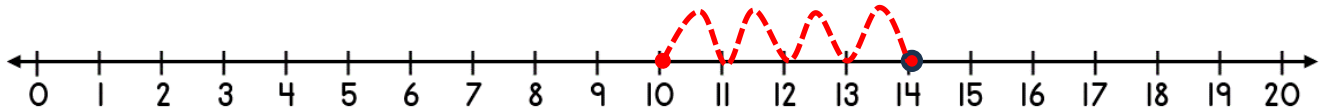
Date



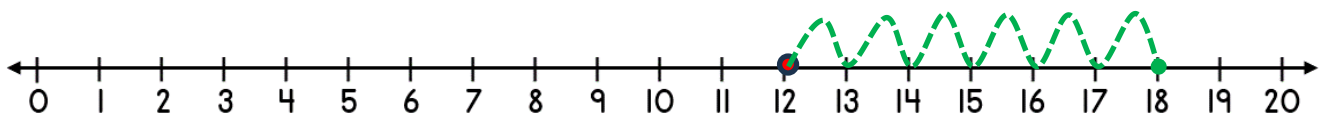
NUMBER LINE ADDITION & SUBTRACTION WITHIN 20

SHEET 4A ANSWERS

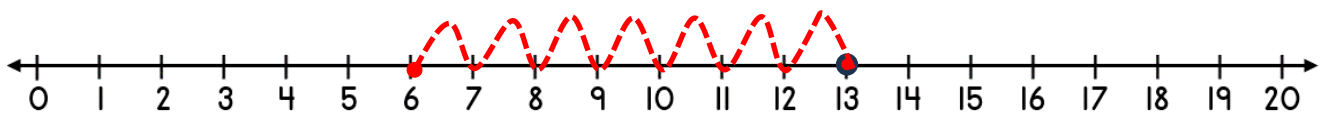
1) $14 - \underline{4} = 10$



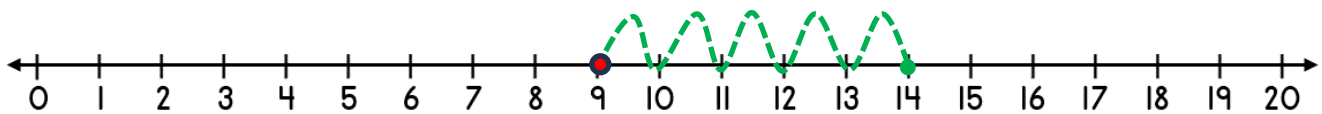
2) $12 + \underline{6} = 18$



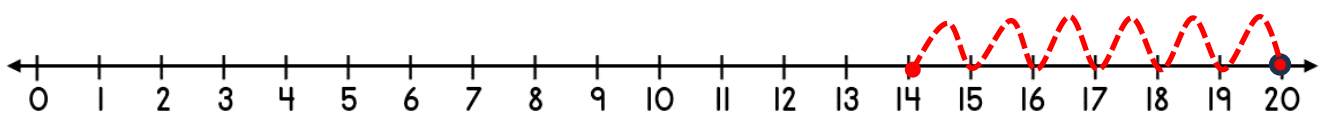
3) $13 - \underline{7} = 6$



4) $9 + \underline{5} = 14$



5) $20 - \underline{6} = 14$



6) $12 + \underline{8} = 20$

