

Name _____

Date _____

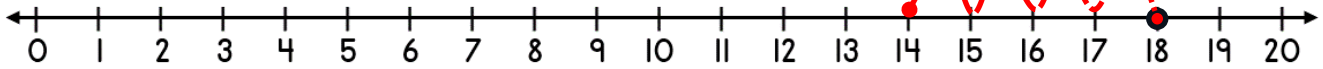


NUMBER LINE ADDITION & SUBTRACTION WITHIN 20

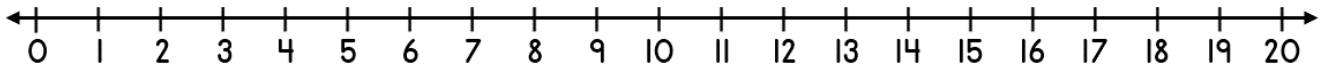
SHEET 3

Jump on or back in ones from the starting number to find the answer.

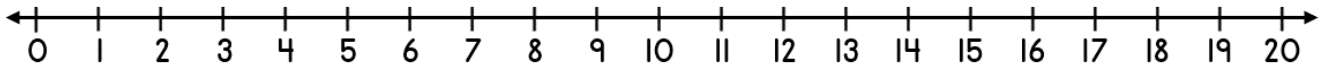
1) $18 - 4 =$ _____



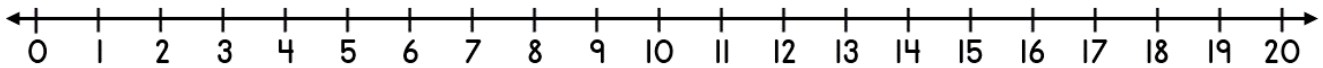
2) $12 + 6 =$ _____



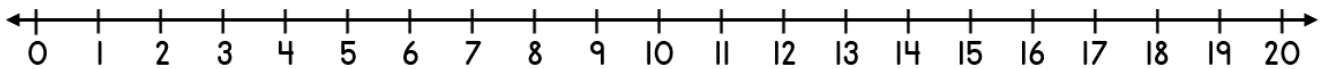
3) $19 - 7 =$ _____




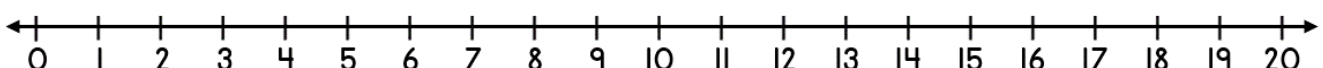
4) $14 - 5 =$ _____



5) $9 + 8 =$ _____



6) $13 + 7 =$ _____



Name

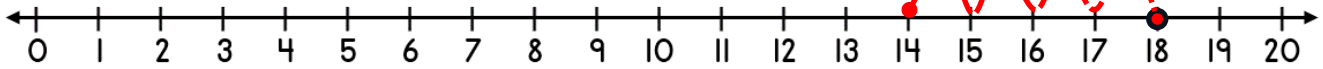
Date



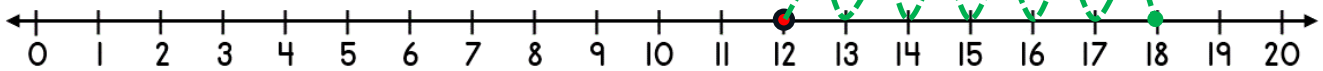
NUMBER LINE ADDITION & SUBTRACTION WITHIN 20

SHEET 3 ANSWERS

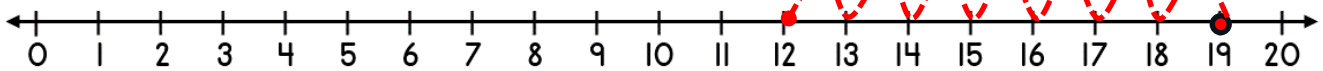
1) $18 - 4 = \underline{14}$



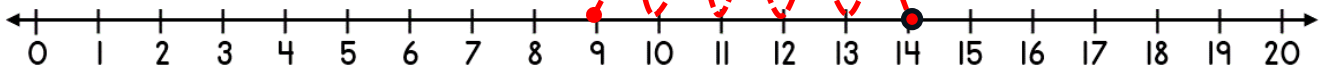
2) $12 + 6 = \underline{18}$



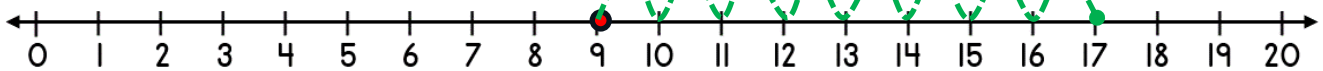
3) $19 - 7 = \underline{12}$



4) $14 - 5 = \underline{9}$



5) $9 + 8 = \underline{17}$



6) $13 + 7 = \underline{20}$

