

Name _____

Date _____

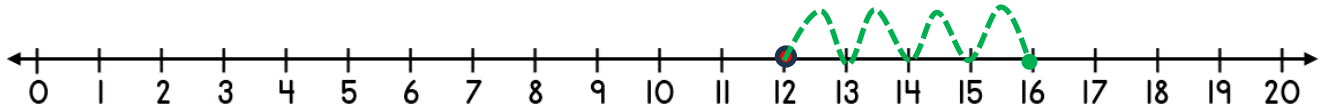


NUMBER LINE ADDITION & SUBTRACTION WITHIN 20

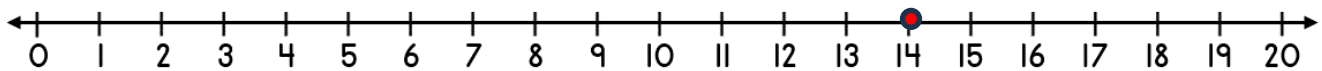
SHEET 2

Jump on or back along the number line to find the answer.

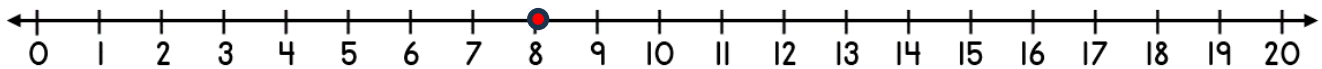
1) $12 + 4 =$ _____



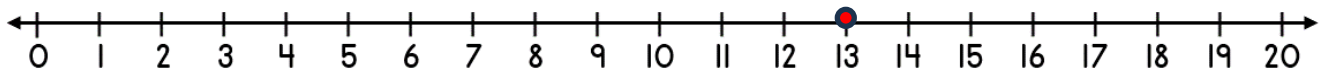
2) $14 - 5 =$ _____



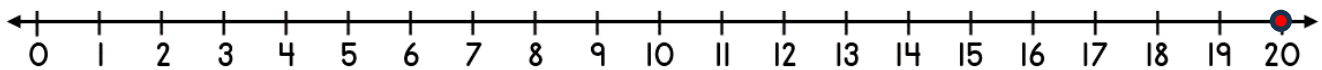
3) $8 + 7 =$ _____




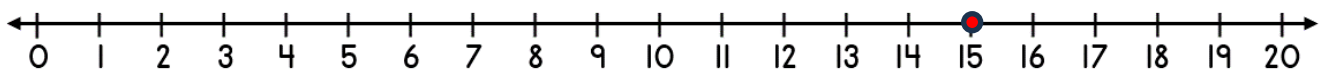
4) $13 + 5 =$ _____



5) $20 - 4 =$ _____




6) $15 - 6 =$ _____



Name

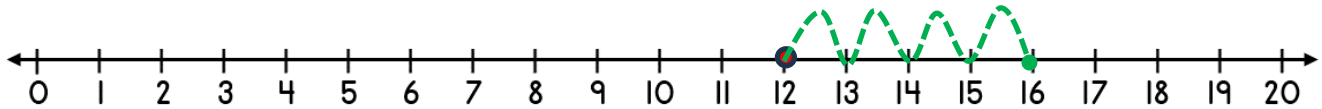
Date



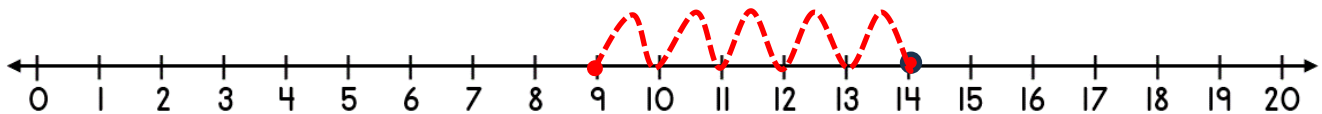
NUMBER LINE ADDITION & SUBTRACTION WITHIN 20

SHEET 2 ANSWERS

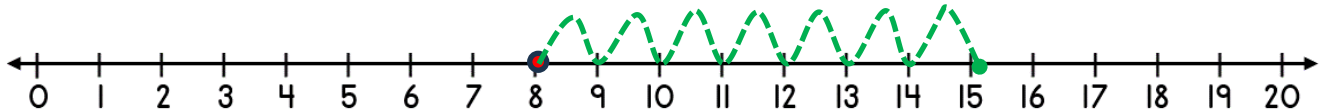
1) $12 + 4 = \underline{16}$



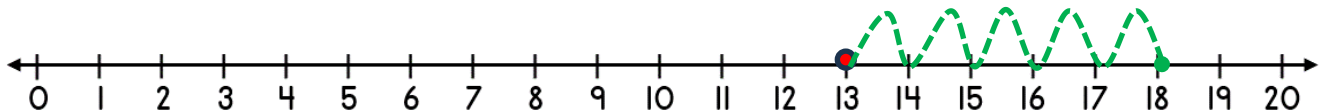
2) $14 - 5 = \underline{9}$



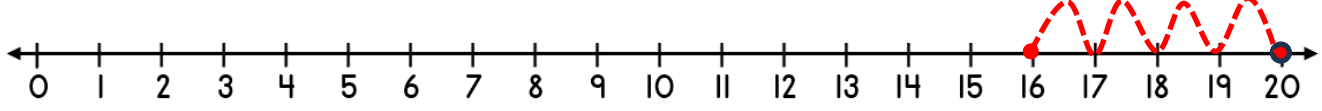
3) $8 + 7 = \underline{15}$



4) $13 + 5 = \underline{18}$



5) $20 - 4 = \underline{16}$



6) $15 - 6 = \underline{9}$

