

Name _____

Date _____

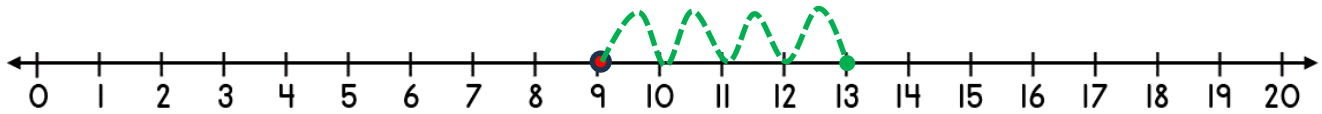


NUMBER LINE ADDITION & SUBTRACTION WITHIN 20

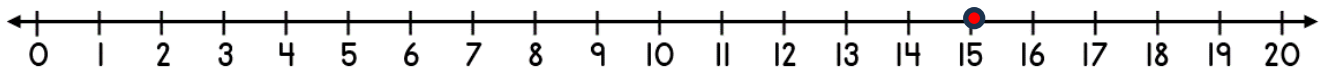
SHEET 1

Jump on or back along the number line to find the answer.

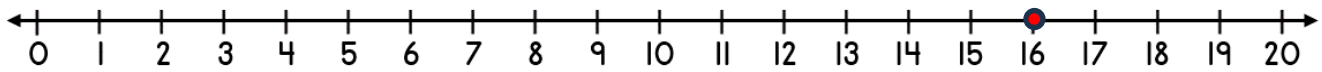
1) $9 + 4 =$ _____



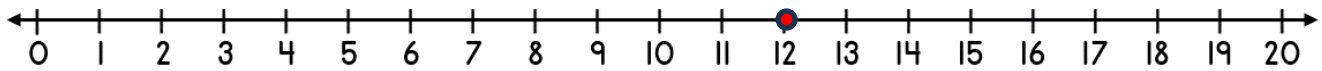
2) $15 - 3 =$ _____



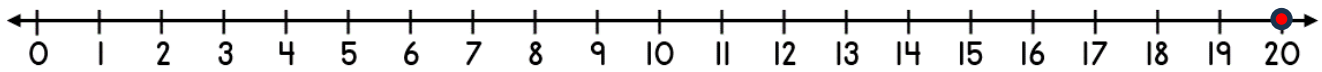
3) $16 + 3 =$ _____




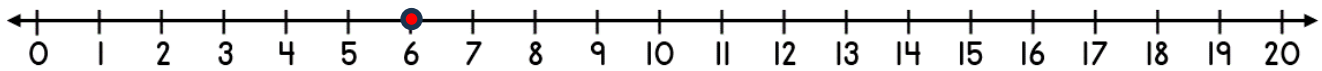
4) $12 - 2 =$ _____



5) $20 - 5 =$ _____



6) $6 + 7 =$ _____



Name

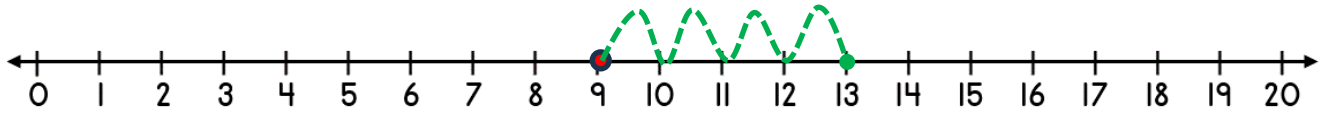
Date



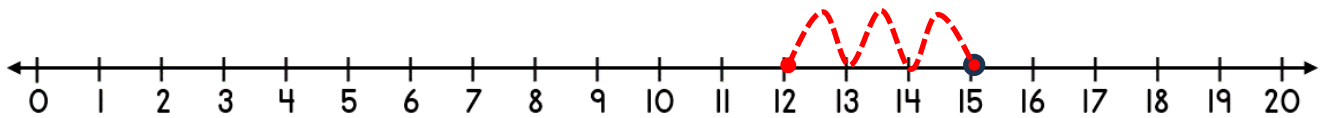
NUMBER LINE ADDITION & SUBTRACTION WITHIN 20

SHEET 1 ANSWERS

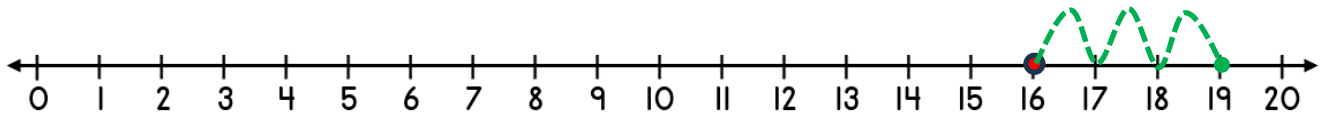
1) $9 + 4 = \underline{13}$



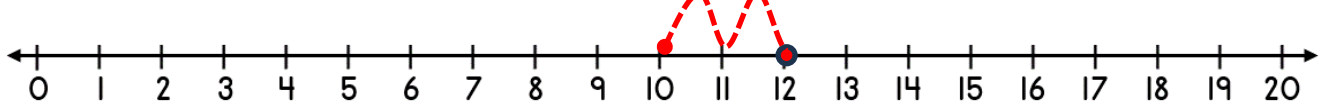
2) $15 - 3 = \underline{12}$



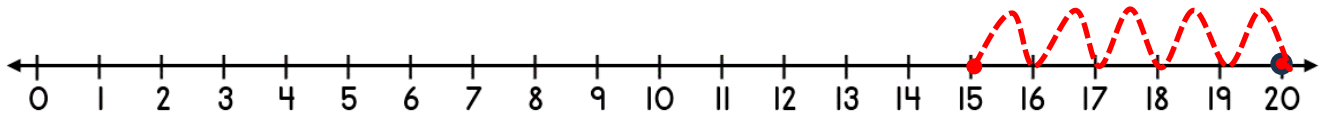
3) $16 + 3 = \underline{19}$



4) $12 - 2 = \underline{10}$



5) $20 - 5 = \underline{15}$



6) $6 + 7 = \underline{13}$

