

Name _____

Date _____

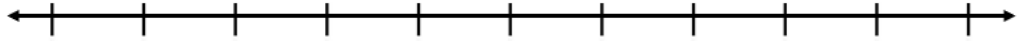


NUMBER LINE ADDITION & SUBTRACTION WITHIN 100

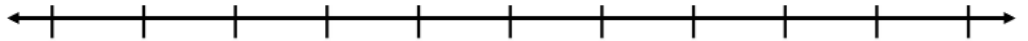
SHEET 4B

Jump on or back in ones from the starting number to find the missing addend or subtrahend.

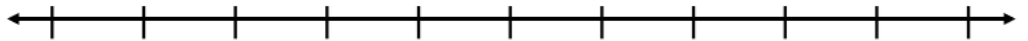
1) $67 - \underline{\quad} = 62$



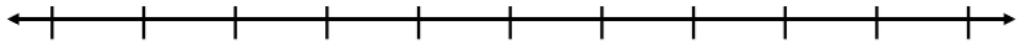
2) $49 + \underline{\quad} = 52$



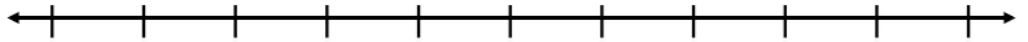
3) $81 - \underline{\quad} = 77$



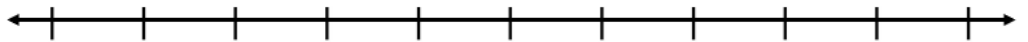
4) $24 + \underline{\quad} = 31$



5) $93 - \underline{\quad} = 87$




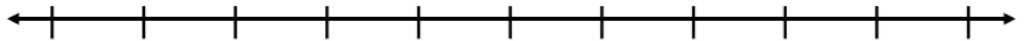
6) $33 + \underline{\quad} = 38$



7) $66 + \underline{\quad} = 75$



8) $92 - \underline{\quad} = 84$



Name

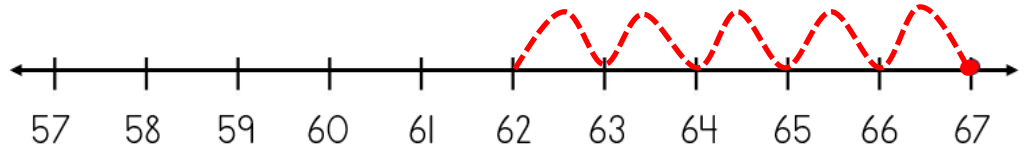
Date



NUMBER LINE ADDITION & SUBTRACTION WITHIN 20

SHEET 4B ANSWERS

1) $67 - \underline{5} = 62$



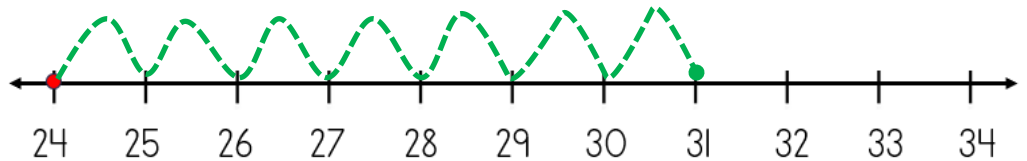
2) $49 + \underline{3} = 52$



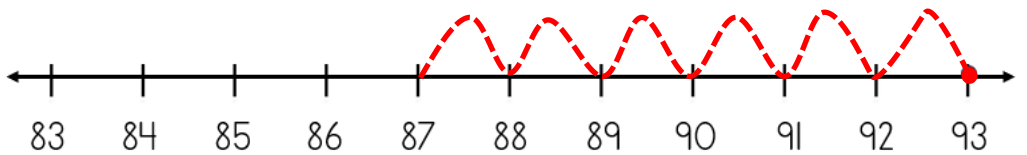
3) $81 - \underline{4} = 77$



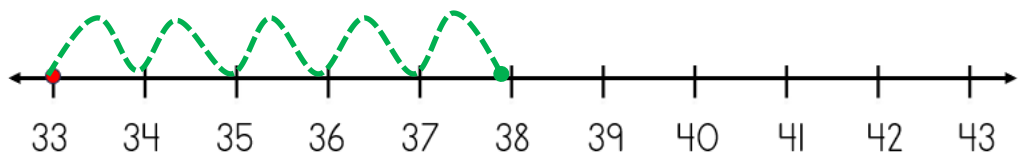
4) $24 + \underline{7} = 31$



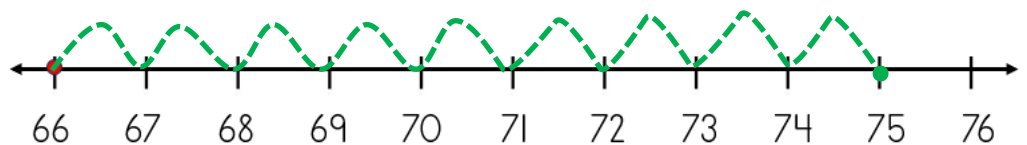
5) $93 - \underline{6} = 87$



6) $33 + \underline{5} = 38$



7) $66 + \underline{9} = 75$



8) $92 - \underline{8} = 84$

