

Name \_\_\_\_\_

Date \_\_\_\_\_

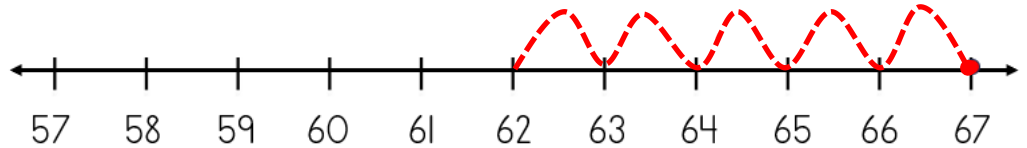


# NUMBER LINE ADDITION & SUBTRACTION WITHIN 100

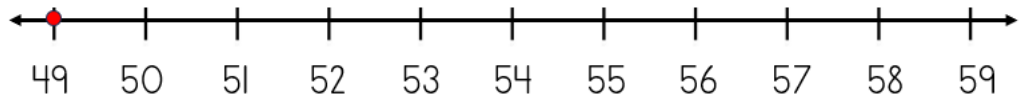
## SHEET 4A

*Jump on or back in ones from the starting number to find the missing addend or subtrahend.*

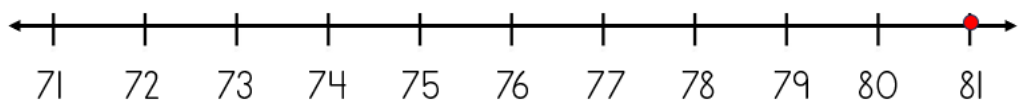
1)  $67 - \underline{\quad} = 62$



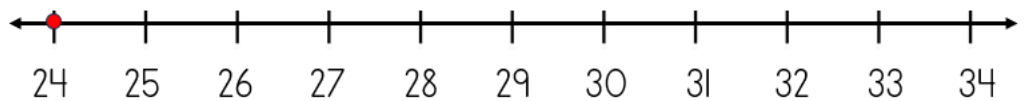
2)  $49 + \underline{\quad} = 52$



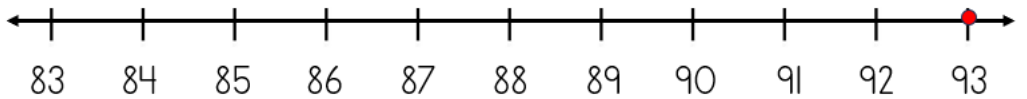
3)  $81 - \underline{\quad} = 77$



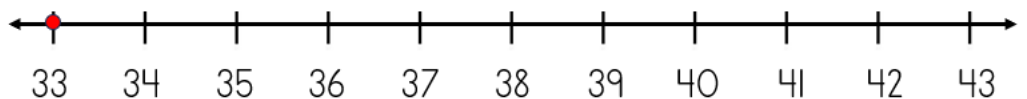
4)  $24 + \underline{\quad} = 31$



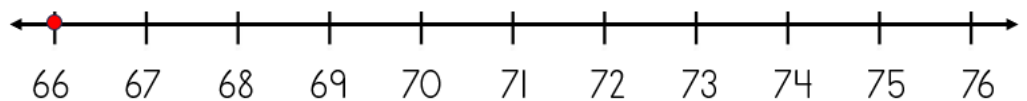
5)  $93 - \underline{\quad} = 87$




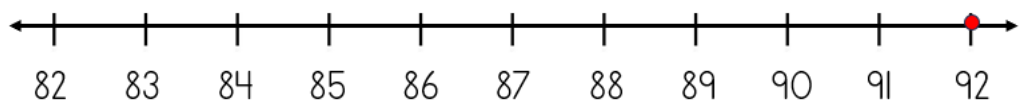
6)  $33 + \underline{\quad} = 38$



7)  $66 + \underline{\quad} = 75$



8)  $92 - \underline{\quad} = 84$



Name

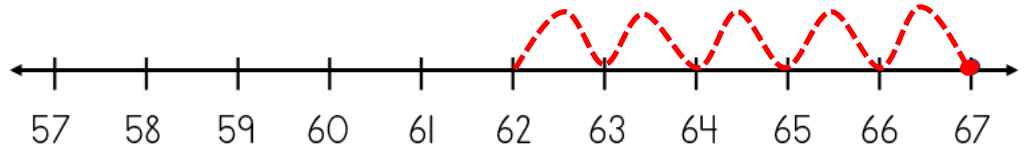
Date



# NUMBER LINE ADDITION & SUBTRACTION WITHIN 20

## SHEET 4A ANSWERS

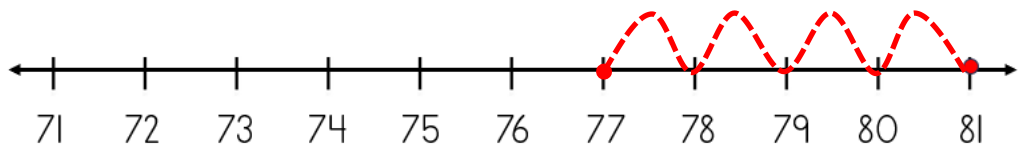
1)  $67 - \underline{5} = 62$



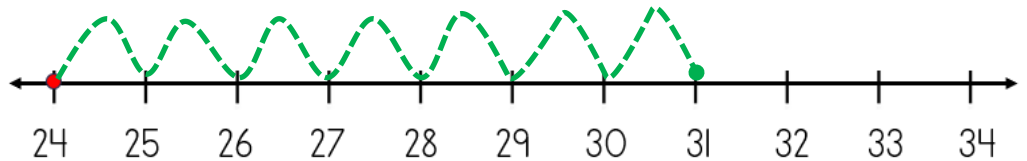
2)  $49 + \underline{3} = 52$



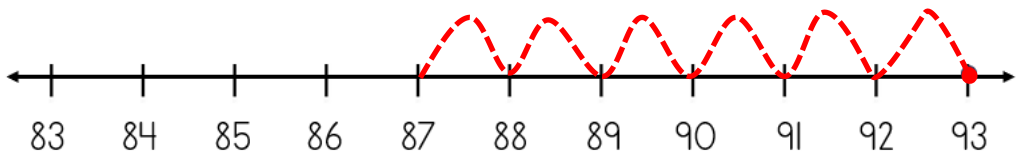
3)  $81 - \underline{4} = 77$



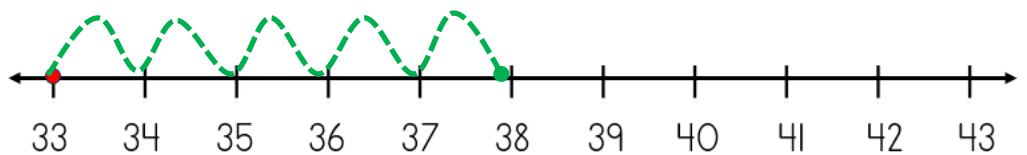
4)  $24 + \underline{7} = 31$



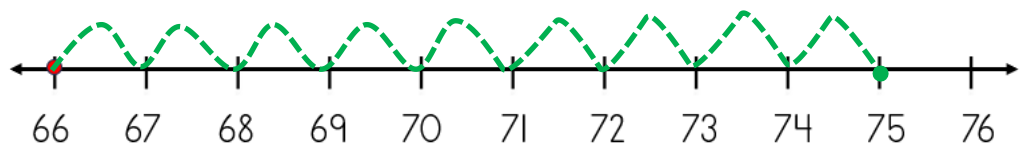
5)  $93 - \underline{6} = 87$



6)  $33 + \underline{5} = 38$



7)  $66 + \underline{9} = 75$



8)  $92 - \underline{8} = 84$

