


Name _____

Date _____

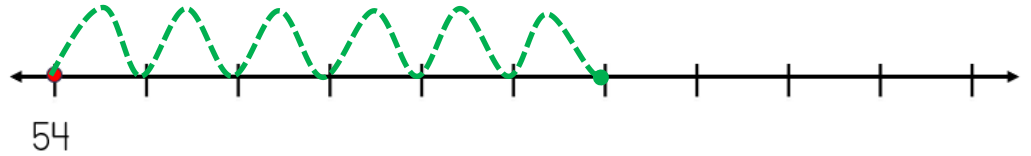


NUMBER LINE ADDITION & SUBTRACTION WITHIN 100

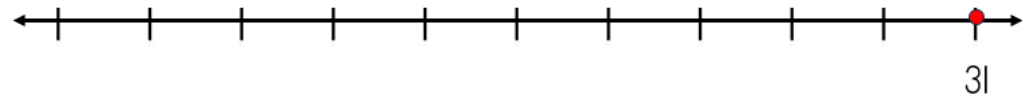
SHEET 3B

Jump on or back along the number line to find the answer.

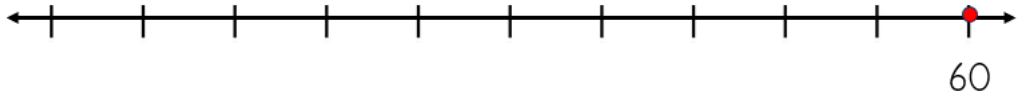
1) $54 + 6 = \underline{\quad}$



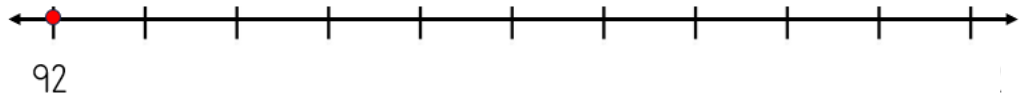
2) $31 - 5 = \underline{\quad}$



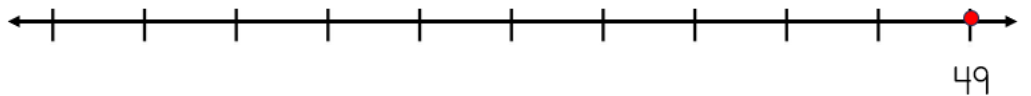
3) $60 - 4 = \underline{\quad}$



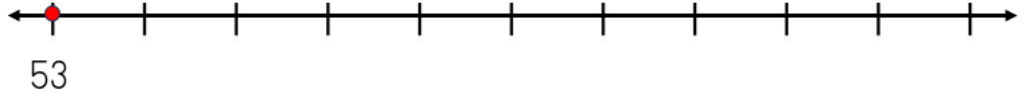
4) $92 + 5 = \underline{\quad}$



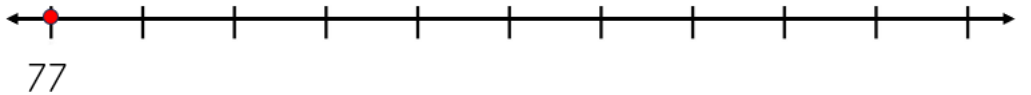
5) $49 - 7 = \underline{\quad}$




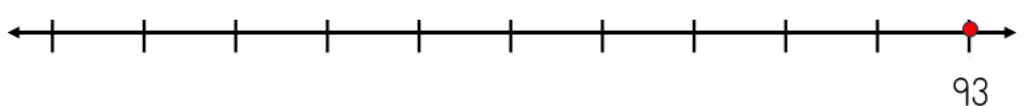
6) $53 + 8 = \underline{\quad}$



7) $77 + 3 = \underline{\quad}$



8) $93 - 6 = \underline{\quad}$



Name

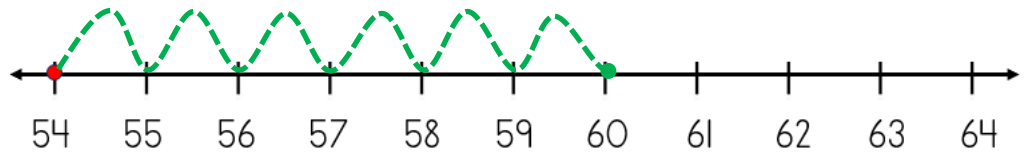
Date



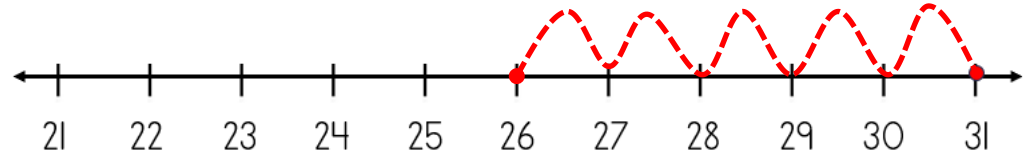
NUMBER LINE ADDITION & SUBTRACTION WITHIN 100

SHEET 3B ANSWERS

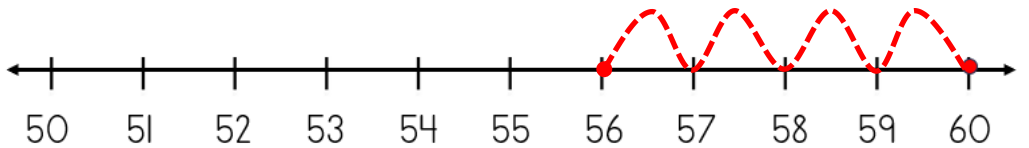
1) $54 + 6 = \underline{60}$



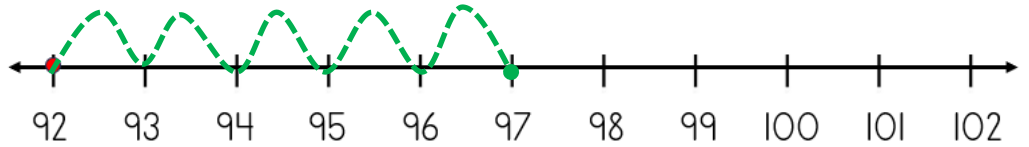
2) $31 - 5 = \underline{26}$



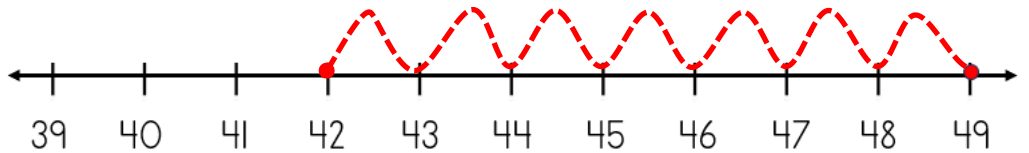
3) $60 - 4 = \underline{56}$



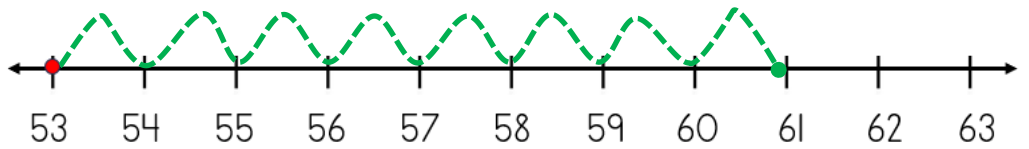
4) $92 + 5 = \underline{97}$



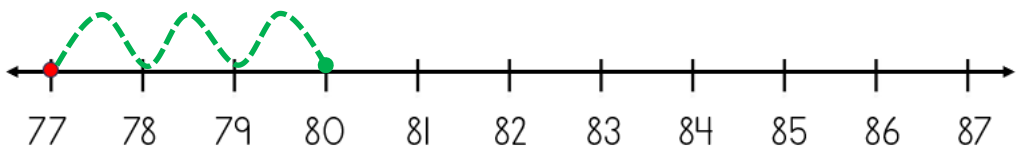
5) $49 - 7 = \underline{42}$



6) $53 + 8 = \underline{61}$



7) $77 + 3 = \underline{80}$



8) $93 - 6 = \underline{87}$

