

Name \_\_\_\_\_

Date \_\_\_\_\_

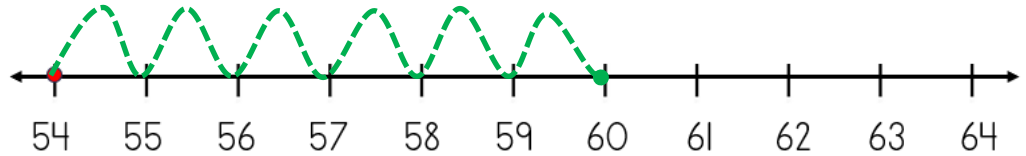


# NUMBER LINE ADDITION & SUBTRACTION WITHIN 100

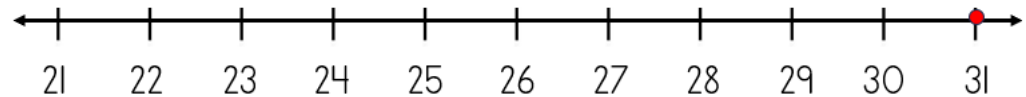
## SHEET 3A

*Jump on or back along the number line to find the answer.*

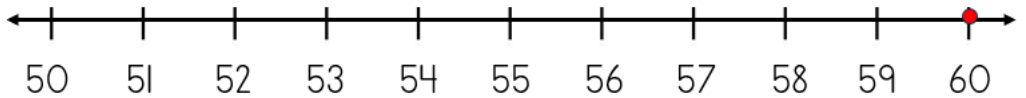
1)  $54 + 6 = \underline{\quad}$



2)  $31 - 5 = \underline{\quad}$



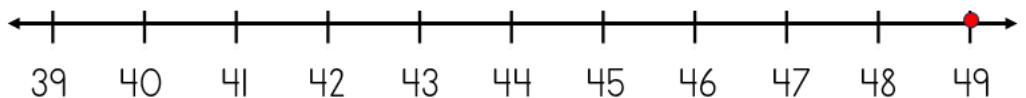
3)  $60 - 4 = \underline{\quad}$



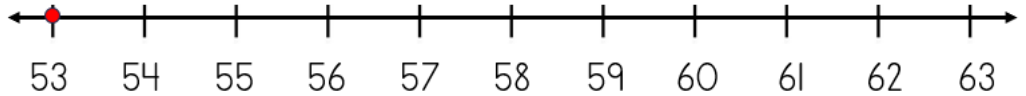
4)  $92 + 5 = \underline{\quad}$



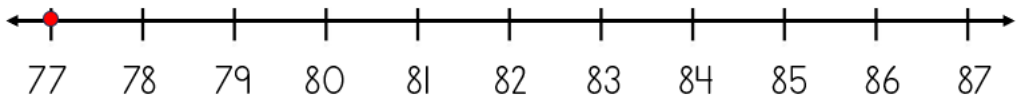
5)  $49 - 7 = \underline{\quad}$




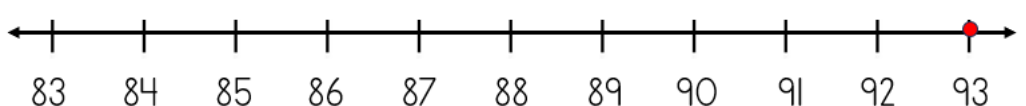
6)  $53 + 8 = \underline{\quad}$



7)  $77 + 3 = \underline{\quad}$



8)  $93 - 6 = \underline{\quad}$



Name

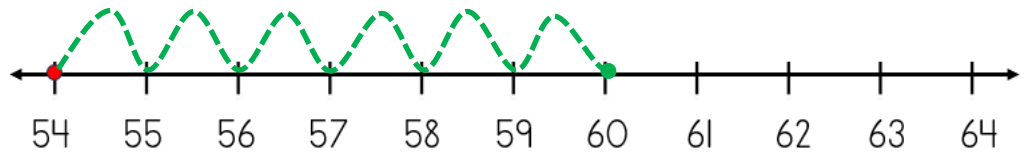
Date



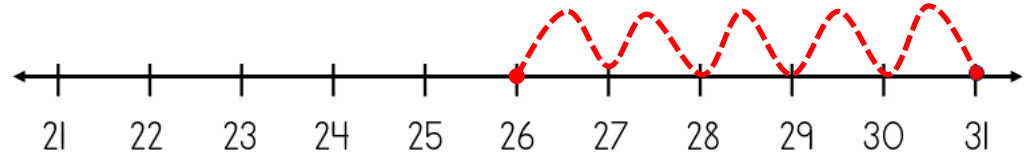
# NUMBER LINE ADDITION & SUBTRACTION WITHIN 100

## SHEET 3A ANSWERS

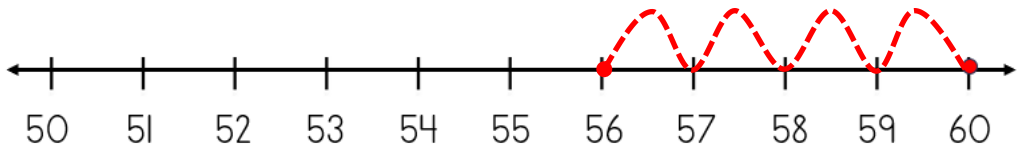
1)  $54 + 6 = \underline{60}$



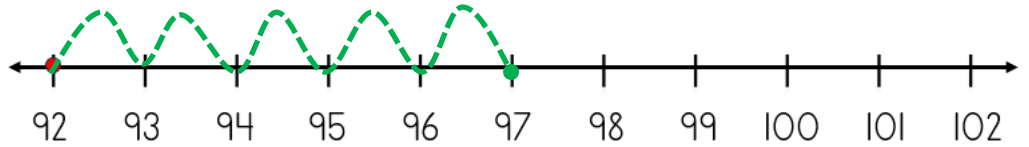
2)  $31 - 5 = \underline{26}$



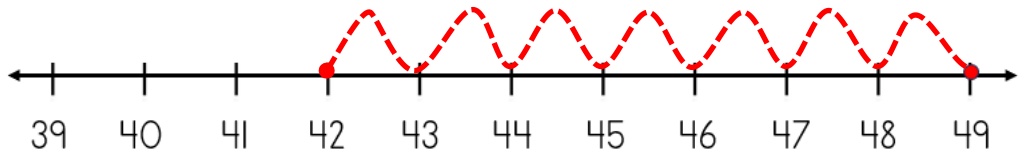
3)  $60 - 4 = \underline{56}$



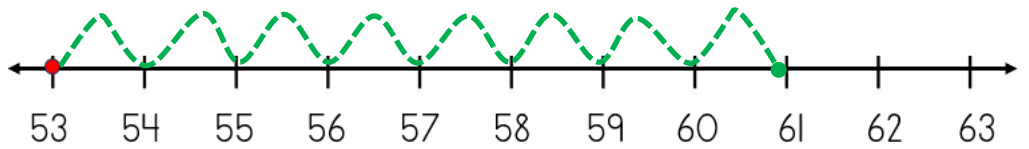
4)  $92 + 5 = \underline{97}$



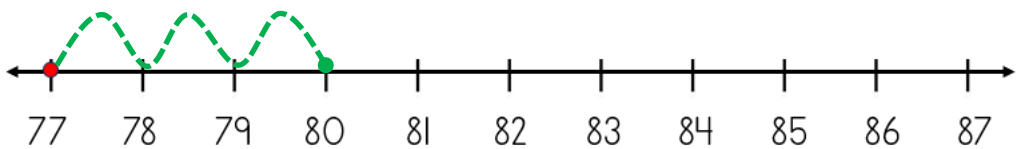
5)  $49 - 7 = \underline{42}$



6)  $53 + 8 = \underline{61}$



7)  $77 + 3 = \underline{80}$



8)  $93 - 6 = \underline{87}$

