

Name _____

Date _____

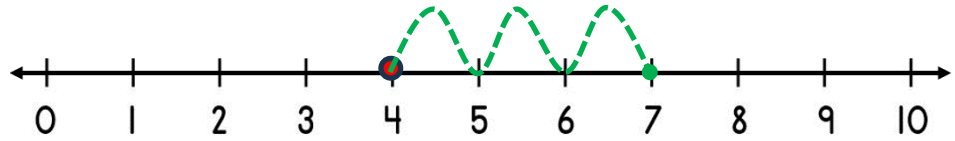


NUMBER LINE ADDITION & SUBTRACTION WITHIN 10

SHEET 4B

Jump on or back in ones from the starting number to find the missing addend or subtrahend.

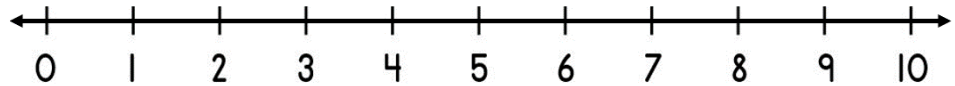
1) $4 + \underline{\quad} = 7$



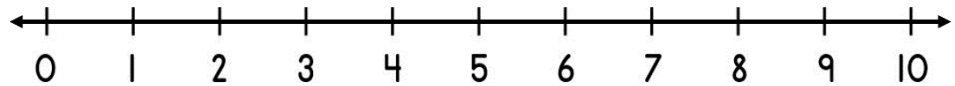
2) $6 - \underline{\quad} = 2$



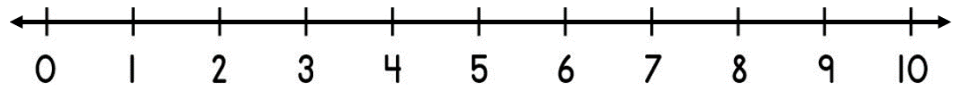
3) $9 + \underline{\quad} = 10$



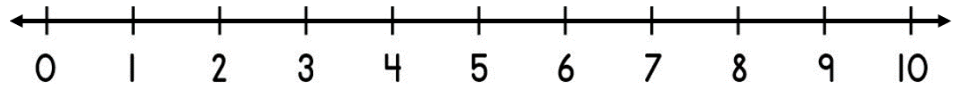
4) $8 - \underline{\quad} = 6$



5) $3 + \underline{\quad} = 8$




6) $4 - \underline{\quad} = 0$



7) $7 + \underline{\quad} = 9$




8) $10 - \underline{\quad} = 7$



Name

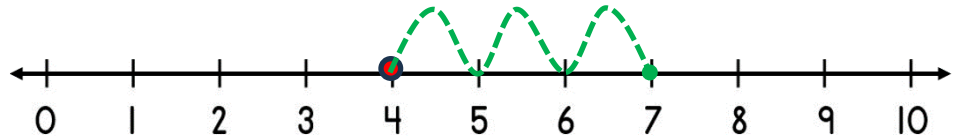
Date



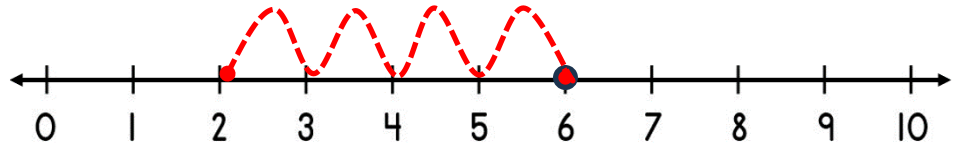
NUMBER LINE ADDITION & SUBTRACTION WITHIN 10

SHEET 4B ANSWERS

1) $4 + \underline{3} = 7$



2) $6 - \underline{4} = 2$



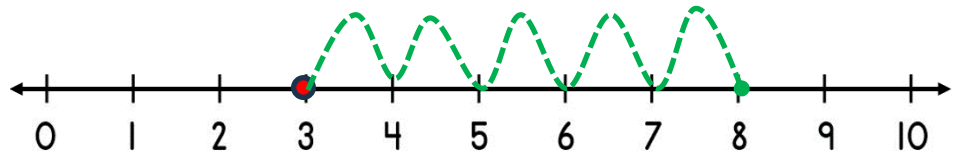
3) $9 + \underline{1} = 10$



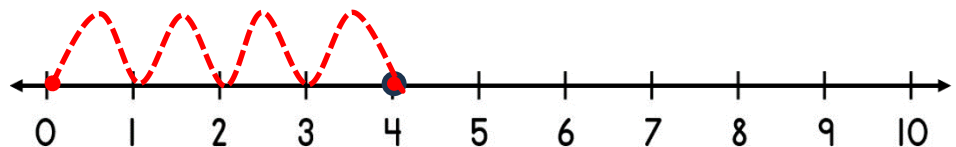
4) $8 - \underline{2} = 6$



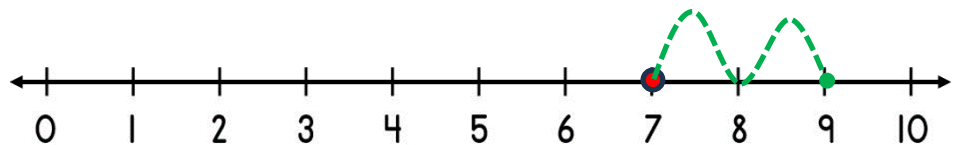
5) $3 + \underline{5} = 8$



6) $4 - \underline{4} = 0$



7) $7 + \underline{2} = 9$



8) $10 - \underline{3} = 7$

