


Name _____

Date _____

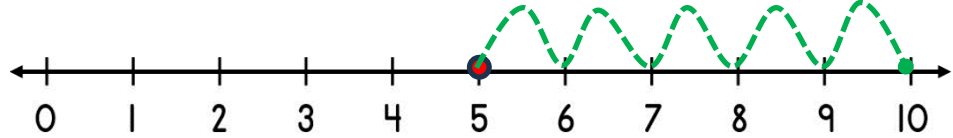


NUMBER LINE ADDITION & SUBTRACTION WITHIN 10

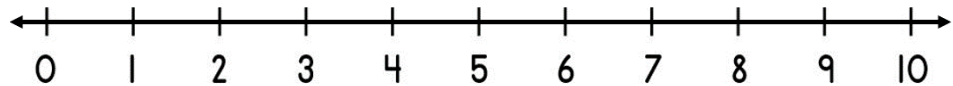
SHEET 3

Jump on or back along the number line to find the answer.

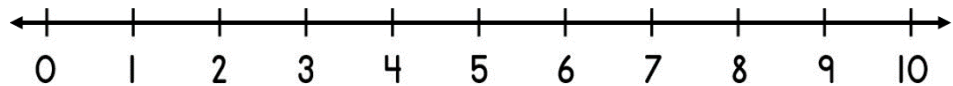
1) $5 + 5 =$ _____



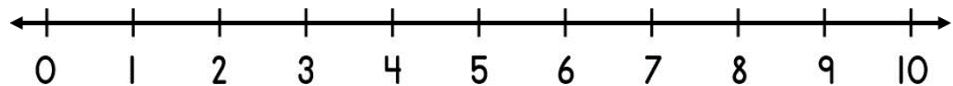
2) $7 - 4 =$ _____



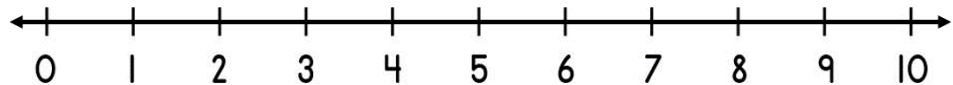
3) $7 + 3 =$ _____



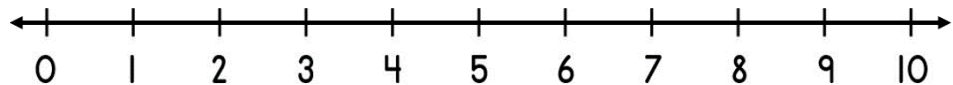
4) $8 - 5 =$ _____



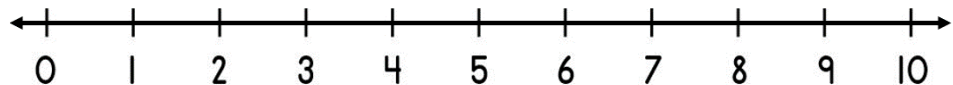
5) $2 + 6 =$ _____




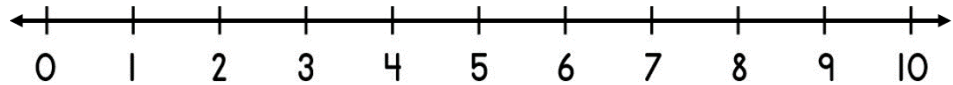
6) $9 - 7 =$ _____



7) $5 + 4 =$ _____



8) $10 - 6 =$ _____



Name

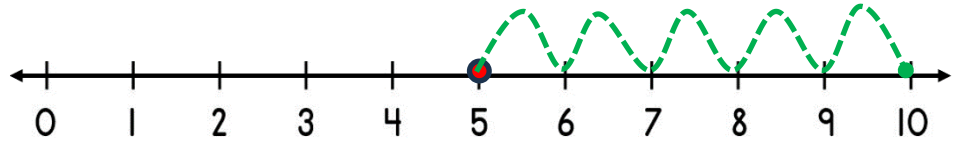
Date



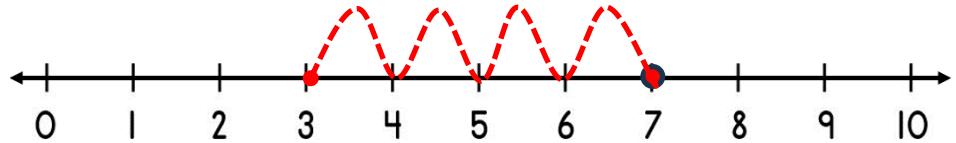
NUMBER LINE ADDITION & SUBTRACTION WITHIN 10

SHEET 3 ANSWERS

1) $5 + 5 = \underline{10}$



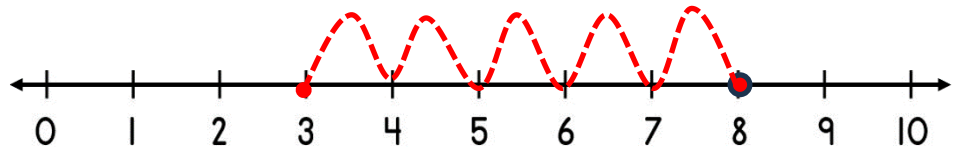
2) $7 - 4 = \underline{3}$



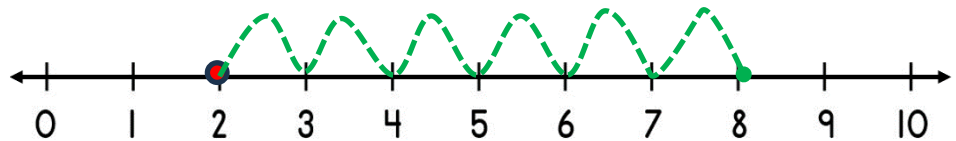
3) $7 + 3 = \underline{10}$



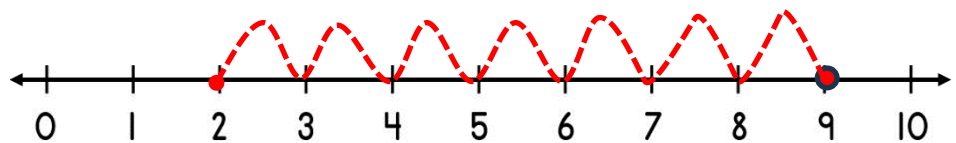
4) $8 - 5 = \underline{3}$



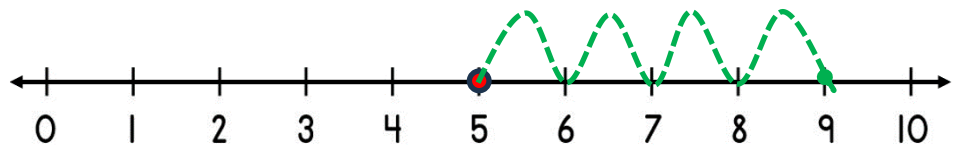
5) $2 + 6 = \underline{8}$



6) $9 - 7 = \underline{2}$



7) $5 + 4 = \underline{9}$



8) $10 - 6 = \underline{4}$

