

Name _____

Date _____

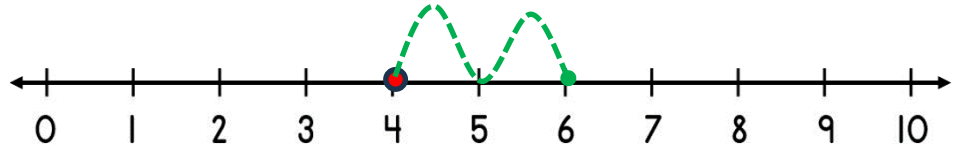


NUMBER LINE ADDITION & SUBTRACTION WITHIN 10

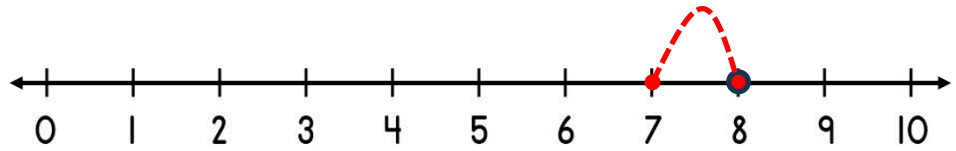
SHEET 1

Jump on or back along the number line to find the answer.

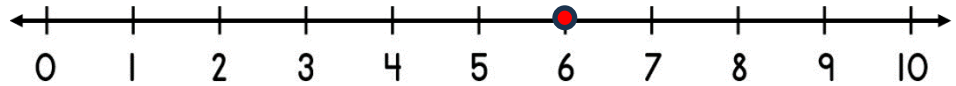
1) $4 + 2 =$ _____



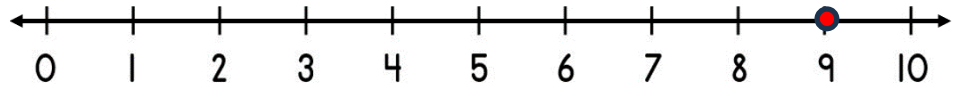
2) $8 - 1 =$ _____



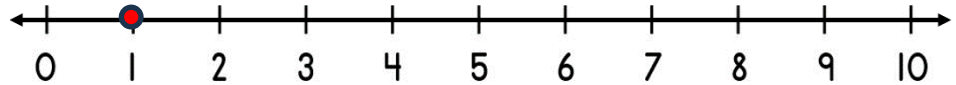
3) $6 + 3 =$ _____



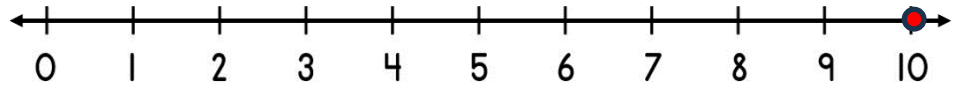
4) $9 - 2 =$ _____



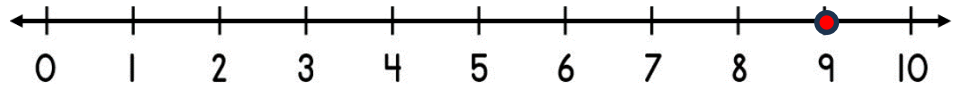
5) $1 + 4 =$ _____




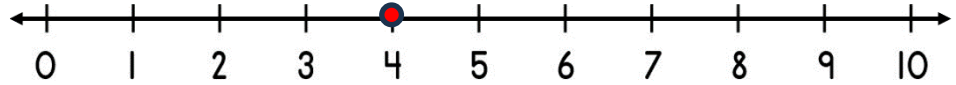
6) $10 - 3 =$ _____



7) $9 + 1 =$ _____




8) $4 - 4 =$ _____



Name _____

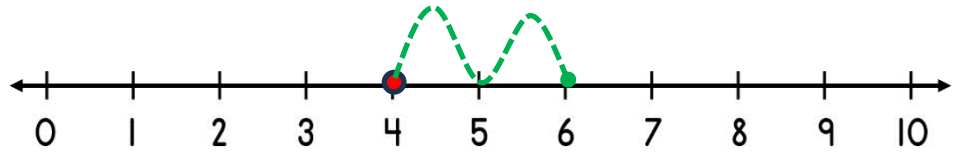
Date _____



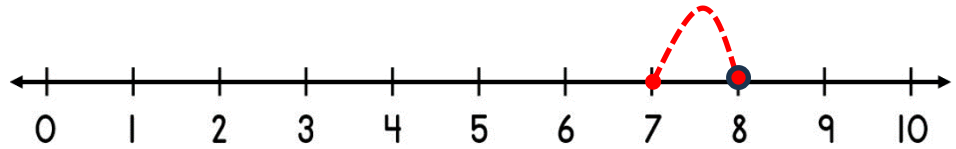
NUMBER LINE ADDITION & SUBTRACTION WITHIN 10

SHEET 1 ANSWERS

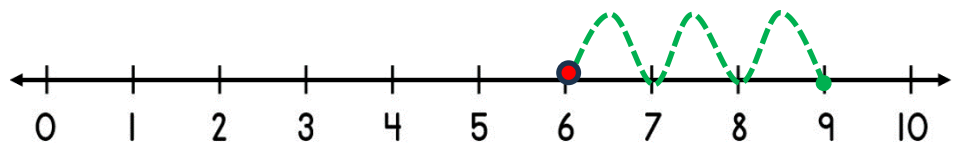
1) $4 + 2 = \underline{6}$



2) $8 - 1 = \underline{7}$



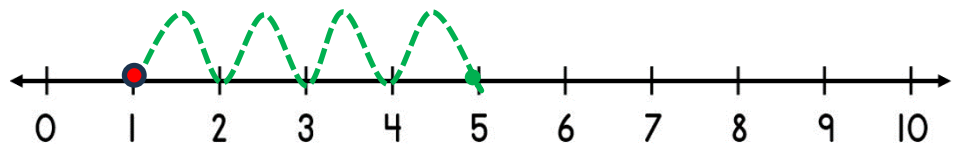
3) $6 + 3 = \underline{9}$



4) $9 - 2 = \underline{7}$



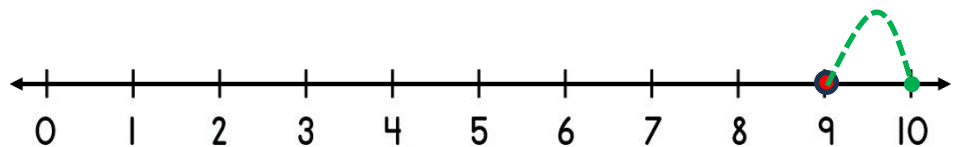
5) $1 + 4 = \underline{5}$



6) $10 - 3 = \underline{7}$



7) $9 + 1 = \underline{10}$



8) $4 - 4 = \underline{0}$

